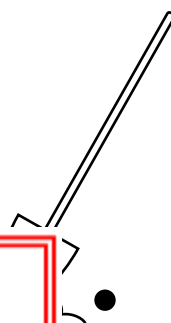
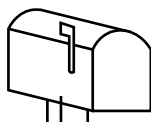




Name: _____

Using a Map Scale



Scale: 1

Use the scale to answer the questions below.

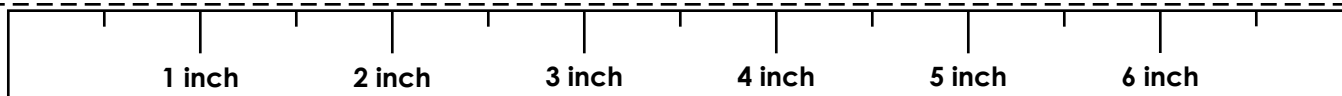


PREVIEW

Please log in or register to download the printable version of this worksheet.

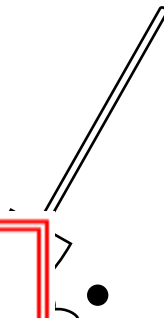
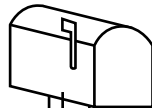

distance is the second ●.

1. How far is it from the soccer ball to the mailbox? _____
2. How far is it from the bike to the flower? _____
3. How far is the apple tree from the soccer ball? _____
4. How many feet is it from the soccer ball to the flower? _____
5. How many feet is it from the bike to the soccer ball? _____
6. How far is the flower from the shovel, then from the shovel to the apple tree? _____



ANSWER KEY

Using a Map Scale



Scale: 1

Use the scale to answer the questions below.

***Note: The illustrations are not to scale. The answers are only concerning the distances shown on the map.**



PREVIEW

Please log in or register to download the printable version of this worksheet.

distance
the second
ances,

1. How far is it from the soccer ball to the mailbox? 20 feet

2. How far is it from the bike to the flower? 30 feet

3. How far is the apple tree from the soccer ball? 45 feet

4. How many feet is it from the soccer ball to the flower? 15 feet

5. How many feet is it from the bike to the soccer ball? 30 feet

6. How far is the flower from the shovel, then from the shovel to the apple tree? 60 feet+20 feet = 80 feet

