

Name: _____

Solids and Polygons

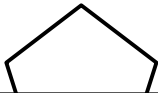
Write the name of each shape.

Word Bank

(You will not use all of the words)

octagon	pentagon	hexagon	rectangle
parallelogram	triangle	square	trapezoid
cylinder	rectangular prism	cube	sphere


1.



2.

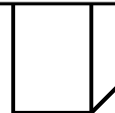
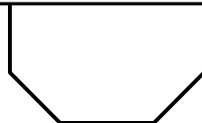


3.

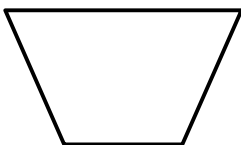


Preview

Please log in to download
the printable version of this worksheet.



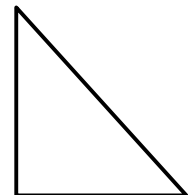
7.



8.



9.



ANSWER KEY

Solids and Polygons

Write the name of each shape.

Word Bank

(You will not use all of the words)

octagon	pentagon	hexagon	rectangle
parallelogram	triangle	square	trapezoid
cylinder	rectangular prism	cube	sphere

1.

Preview

Please log in to download
the printable version of this worksheet.

4.



7.

trapezoid

parallelogram

triangle