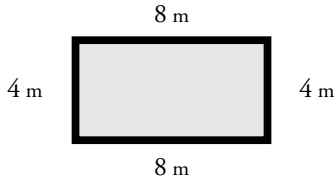


Name: \_\_\_\_\_

# Perimeter

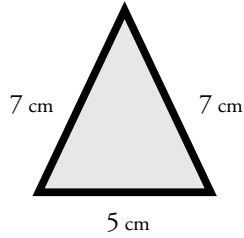
Find the perimeter of each polygon.

a.



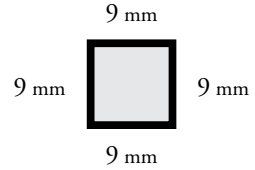
Perimeter = \_\_\_\_\_

b.



Perimeter = \_\_\_\_\_

c.



Perimeter = \_\_\_\_\_

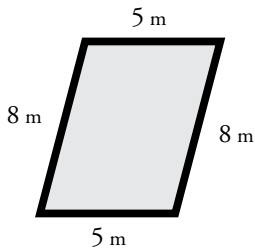
d.

e.

f.

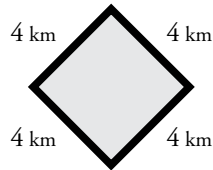
**Preview**  
Please log in to download the printable version of this worksheet.

g.



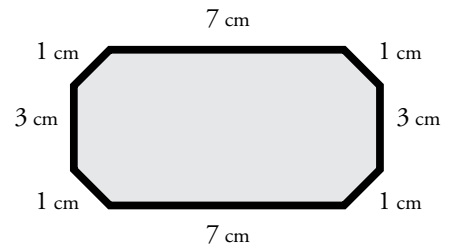
Perimeter = \_\_\_\_\_

h.



Perimeter = \_\_\_\_\_

i.



Perimeter = \_\_\_\_\_

**Bonus Box:** Write the names of the polygons pictured above.

# ANSWER KEY

## Perimeter

Find the perimeter of each polygon.

a.

8 m

b.



c.

9 mm

# Preview

Please log in to download  
the printable version of this worksheet.



**Bonus Box:** Write the names of the polygons pictured above.

rectangle  
trapezoid  
parallelogram

triangle  
hexagon  
diamond or square

square  
rectangle  
octagon