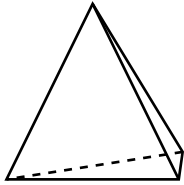
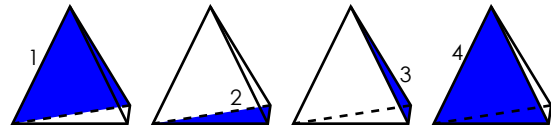


Name: _____

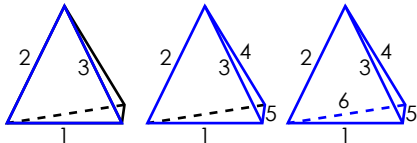
Faces, Edges, and Vertices



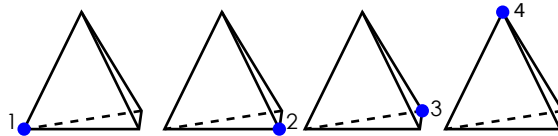
The pyramid figure on the left has 6 edges, 4 faces and 4 corners.



4 faces



6 edges



4 vertices

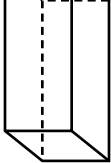
Tell how many faces, edges, and corners each figure has.

a. 



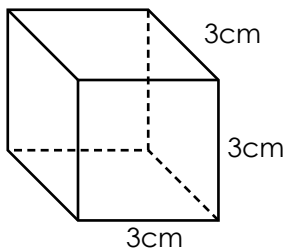
~ PREVIEW ~

Please log in or register to download the printable version of this worksheet.

c. 

faces: _____ edges: _____ vertices: _____

Use the shape to answer the questions.

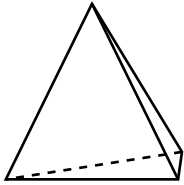


d. Will all the faces be the same size? _____

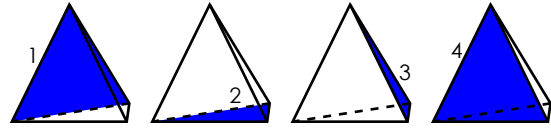
e. Based on the measurements of the three edges, what solid shape is this?

ANSWER KEY

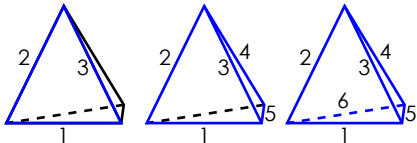
Faces, Edges, and Vertices



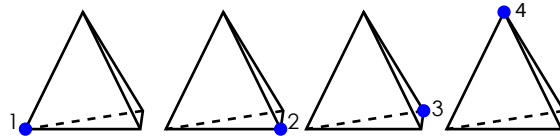
The pyramid figure on the left has 6 edges, 4 faces and 4 vertices.



4 faces



6 edges



4 vertices

Tell how many faces, edges, and corners each figure has.



~ PREVIEW ~

Please log in or register to download the printable version of this worksheet.