

Name: _____



Math Buzz

Count back by 100s from 962 to 62.

_____ , _____ , _____ , _____ , _____ ,
 _____ , _____ , _____ , _____ , _____

Use the data shown to complete the line plot.

Length of Pencils

4 inches
5 inches

key: X = 1 pencil



Preview

Please log in to download
the printable version of this worksheet.

How many pencils are shorter than 5 inches? _____

Add.


$$16 + 28 + 34 + 42 = \underline{\hspace{2cm}}$$

Draw and name
a shape that has
0 sides and **0 angles**.

Solve.

**Find the difference
between 869 and 500.** _____

Name: _____



Math Buzz

Add.

Find the sum
of 13 and 14. _____

$$\underline{\hspace{2cm}} = 5 + 24$$

$$\begin{array}{r} 17 \\ + 13 \\ \hline \end{array}$$

Jordan starts school at a quarter past 8. Pearl starts school at 8:30. Rey starts school at 8:15. Which kids start school at the same time?

_____ and _____

Complete the number sentence to find the total number of rectangles.



Preview

Please log in to download
the printable version of this worksheet.

b. 10

c. 100

_____ row of _____

$$\underline{\hspace{1cm}} + \underline{\hspace{1cm}} + \underline{\hspace{1cm}} + \underline{\hspace{1cm}} = \underline{\hspace{1cm}}$$

Each mark represents 1 less on the number line.



A = _____

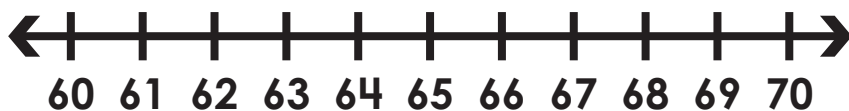
Find the difference between the two endpoints. _____

Name: _____



Math Buzz

Mark 62 on the number line.



Circle the number 62 is closer to.

60 70

Fill in the missing money amounts.

10 pennies = _____

100 pennies = _____

Identify the shaded area of each shape. Circle the shape that shows 1 whole shaded.



Preview

Please log in to download the printable version of this worksheet.



_____ third

_____ thirds

_____ thirds

Subtract.

$$\begin{array}{r} 617 \\ - 435 \\ \hline \end{array}$$

Order the numbers from **greatest to least**.


761 711 702 752 740

Name: _____



Math Buzz

Complete the number sentence to find the total number of hearts.



_____ rows of _____

Add.

Add 7 and 18.

$$\begin{array}{r} 15 \\ + 6 \\ \hline \end{array}$$

_____ = 14 + 9

Mikel helped his uncle work



Preview

Please log in to download the printable version of this worksheet.

10 tens =

Start

End

How long was Mikel working on the farm? _____

Measure each line, in centimeters, then complete the sentence.

Line A = _____

Line B = _____

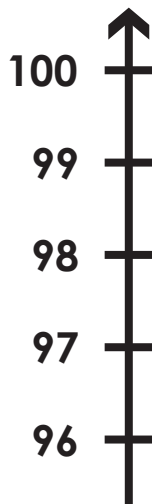
Line A is about _____ centimeters shorter than **Line B**.

Name: _____



Math Buzz

Mark 98 on the number line.



Dylan has \$5.89. Madelyn has \$5.92. Zach has \$5.57. Order the amount of money they each have from **least to greatest**.

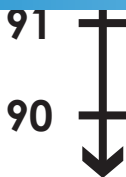
Solve each problem and tell if the sums are even or odd.

$$8 + 7 = \underline{\hspace{2cm}}$$



Preview

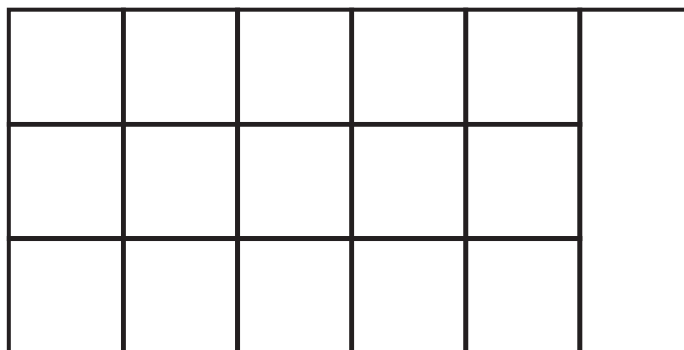
Please log in to download the printable version of this worksheet.



Circle the number 98 is closer to.

90 **100**

How many squares would cover the whole rectangle?



Solve.

$$913 - 611 = \underline{\hspace{2cm}}$$

a. 3 b. 15 c. 16 d. 18



Count back by 100s from 962 to 62.

962 , 862 , 762 ,
662 , 562 , 462 ,
362 , 262 , 162 ,
62

key: X = 1 pencil

Length of Pencils in Inches

How many pencils are 4 inches long? 2

How many pencils are shorter than 5 inches? 5 pencils

Add.

$16 + 28 + 34 + 42 = \underline{120}$

$$\begin{array}{r} 2 \\ 16 \\ 28 \\ 34 \\ +42 \\ \hline 120 \end{array}$$

Solve.

Find the difference between 869 and 500.

$$\begin{array}{r} 896 \\ -500 \\ \hline 396 \end{array}$$

Draw and name a shape that has **0 sides** and **0 angles**.

circle or oval

Add.

Find the sum of 13 and 14. 27

29 = 5 + 24

$$\begin{array}{r} 1 \\ 17 \\ +13 \\ \hline \end{array}$$

Jordan starts school at a quarter past 8. Pearl starts school at 8:30. Rey starts school at 8:15. Which kids start school at the same time?

Jordan and Rey

Choose the missing number.

10 tens =

a. 1
b. 10

Complete the number sentence to find the total number of rectangles.

1 row of 4

Each mark represents 1 more on the number line.

A = 65

Find the difference between the two endpoints.

16



Preview

Please log in to download the printable version of this worksheet.

Complete the number sentence to find the total number of hearts.

3 rows of 3

3 + 3 + 3 = 9

Add.

Add 7 and 18.

25

23 = 14 + 9

$$\begin{array}{r} 1 \\ 15 \\ +6 \\ \hline 21 \end{array}$$

Fill in the missing number.

10 ones = 10

100 ones = 100

10 tens = 100

Mikel helped his uncle work on the farm last Saturday. The clocks show what time he started and ended his work.

How long was Mikel working on the farm?

5 hours

Measure each line, in centimeters, then complete the sentence.

Line A = 7 cm

Line B = 12 cm

Line A is about 5 centimeters shorter than Line B.

Mark 98 on the number line.

Circle the number 98 is closer to.

90 100

Dylan has \$5.89. Madelyn has \$5.92. Zachary has \$5.57. Order the amount of money they each have from **least to greatest**.

\$5.57 \$5.89 \$5.92

Solve each problem and tell if the sums are even or odd.

$8 + 7 = \underline{15}$

even + odd = odd

$7 + 4 = \underline{11}$

odd + even = odd

Solve.

$913 - 611 = \underline{302}$

$$\begin{array}{r} 913 \\ -611 \\ \hline 302 \end{array}$$

How many squares would cover the whole rectangle?

1	2	3	4	5	6
7	8	9	10	11	12
13	14	15	16	17	18

a. 3 b. 15 c. 16 d. 18