

Name: \_\_\_\_\_

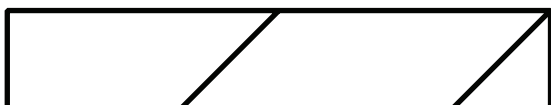


# Math Buzz

Count back by 1s from 844 to 835.

\_\_\_\_\_ , \_\_\_\_\_ , \_\_\_\_\_ , \_\_\_\_\_ , \_\_\_\_\_ ,  
 \_\_\_\_\_ , \_\_\_\_\_ , \_\_\_\_\_ , \_\_\_\_\_ , \_\_\_\_\_

Color the triangles blue.  
 Color the quadrilaterals red.



Solve each side and compare using  $>$ ,  $<$ , or  $=$ .



# Preview


Please log in to download the printable version of this worksheet.

Tamika estimated that the length of the playground was 18 yards. The actual length of the playground was 26 yards. What is the difference between Tamika's estimate and the actual length of the playground?



answer: \_\_\_\_\_ yards

Name: \_\_\_\_\_



# Math Buzz



Find the total value of the money shown.

answer: \_\_\_\_\_



# Preview

Please log in to download the printable version of this worksheet.

--	--	--	--


Vivek has 1 ten dollar bill, 1 five dollar bill, and 3 one dollar bills. How much money does Vivek have?

Show your work

answer: \_\_\_\_\_

4 rows of \_\_\_\_\_

\_\_\_\_\_ + \_\_\_\_\_ + \_\_\_\_\_ + \_\_\_\_\_ = \_\_\_\_\_

Compare using >, <, or =.

**600 + 70 + 8** \_\_\_\_\_ **sixty-eight**

Name: \_\_\_\_\_



# Math Buzz


Add.

$$\begin{array}{r} 141 \\ + 235 \\ \hline \end{array}$$

Find the difference using the number line.



$$72 - 6 = \underline{\quad}$$

Solve each side and compare using  $>$ ,  $<$ , or  $=$ .Order the numbers from **greatest to least**.

## Preview

Please log in to download the printable version of this worksheet.

		1	2	3	4	5
6	7	8	9	10	11	12
13	14	15	16	17	18	19
20	21	22	23	24	25	26
27	28	29	30			


				1	2	3
4	5	6	7	8	9	10
11	12	13	14	15	16	17
18	19	20	21	22	23	24
25	26	27	28	29	30	31

How many days are in April and May combined? \_\_\_\_\_

How many more Fridays are in May than April? \_\_\_\_\_

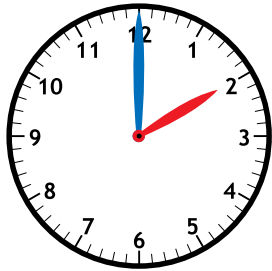
Mr. Gordon left for vacation on April 27th.  
He came home 5 days later. On what date  
did Mr. Gordon return home? \_\_\_\_\_

Name: \_\_\_\_\_



## Math Buzz

How many minutes does it take for the minute hand to travel around the clock from the 12 to the 12?



Nomi has a collection of 56 gems. Luca has 14 fewer gems than Nomi. What is the total number of gems they have combined?

**Step 1:** Find out how many gems Luca had.

56	
14	?

Number of gems: \_\_\_\_\_



# Preview

Please log in to download the printable version of this worksheet.

answer: \_\_\_\_\_

Total number of gems: \_\_\_\_\_

Subtract.

	Hundreds	Tens	Ones
	8	7	0
-	4	3	6
<hr/>			

Compare using  $>$ ,  $<$ , or  $=$ .

**4 hundreds 7 ones** \_\_\_\_\_ **407**

Add.

**22 + 14 + 21 + 32 =** \_\_\_\_\_



Name: \_\_\_\_\_

# Math Buzz

Complete the number sentence to find the total number of stars.



Add.

$$294 + 354 = \underline{\hspace{2cm}}$$

Complete the number sentences.



# Preview


Please log in to download the printable version of this worksheet.




18 centimeters

18 meters

Shade one third and one fourth of each circle, then compare using  $>$ ,  $<$ ,  $=$ .




one third



one fourth



$$\underline{\hspace{1cm}} + \underline{\hspace{1cm}} = \underline{\hspace{1cm}}$$



$$\underline{\hspace{1cm}} + \underline{\hspace{1cm}} = \underline{\hspace{1cm}}$$

Are the sums **even** or **odd**.

\_\_\_\_\_

