

Name: \_\_\_\_\_


# Counting Nickels

Count the money. Write the amount.

a.  \_\_\_\_\_ ¢

b.  \_\_\_\_\_ ¢

c. 


d. 


e. 





# Preview


Please log in to download the printable version of this worksheet.


 \_\_\_\_\_ ¢

 \_\_\_\_\_ ¢

 \_\_\_\_\_ ¢

i.  \_\_\_\_\_ ¢

j.  \_\_\_\_\_ ¢

k.  \_\_\_\_\_ ¢

# ANSWER KEY


## Counting Nickels

Count the money. Write the amount.

a.  \_\_\_\_\_ **55** ¢

b.  \_\_\_\_\_ **35** ¢

c. 

d. 


e. 




# Preview


Please log in to download the printable version of this worksheet.


 \_\_\_\_\_ **40** ¢

 \_\_\_\_\_ **85** ¢

 \_\_\_\_\_ **50** ¢

i.  \_\_\_\_\_ **65** ¢

j.  \_\_\_\_\_ **15** ¢

k.  \_\_\_\_\_ **45** ¢