

# Mixed Math: D-3

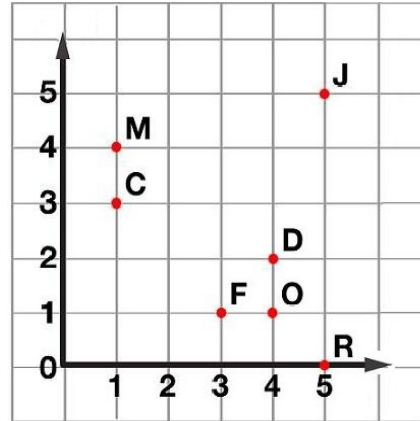
1. The Smalltown Zoo has 2 African elephants. An elephant eats 230 pounds of food per day. How many pounds of food are needed to feed the elephants for an entire week?  
(Show your work and label your answer.)

answer: \_\_\_\_\_

2. Elizabeth arrived at school at 8:05 am. She left school early at 12:15 pm so she could go to a dentist appointment. How long was Elizabeth at school?

answer: \_\_\_\_\_

4.



Write the letter for each ordered pair.

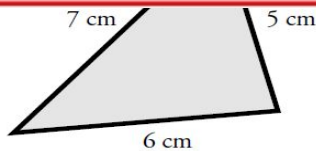
(3,1) - \_\_\_\_\_

(1,4) - \_\_\_\_\_



## ~ PREVIEW ~

Please log in or register to download the printable version of this worksheet.



answer: \_\_\_\_\_

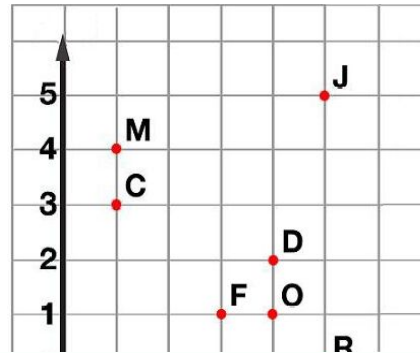
# ANSWER KEY

Skills: Add/Subtract/Multiply; Elapsed Time; Perimeter; Ordered Pairs

## Mixed Math: D-3

1. The Smalltown Zoo has 2 African elephants. An elephant eats 230 pounds of food per day. How many pounds of food are needed to feed the elephants for an entire week?  
(Show your work and label your answer.)

4.



# ~ PREVIEW ~

Please log in or register to download  
the printable version of this worksheet.