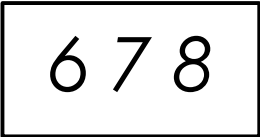


# Mixed Math: B-3

1. Kari has 17 roses and 9 tulips. How many more roses than tulips does she have?

Show your work and label your answer.

3.



Which digit is in the tens place?

\_\_\_\_\_

\_\_\_\_\_

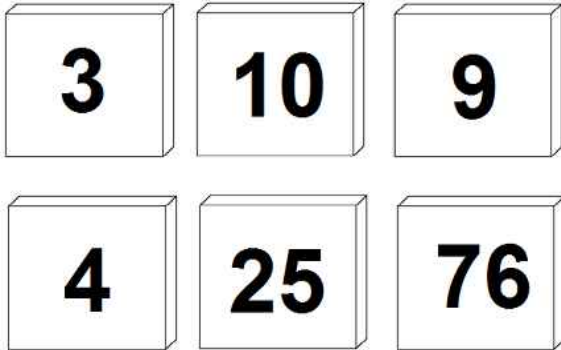
## PREVIEW

Please log in or register to download the printable version of this worksheet.

answer: \_\_\_\_\_

the hundreds place? \_\_\_\_\_

2. Color only the tiles that have odd numbers.



4. Dan has 6 sea shells. Caitlin has 7 shells. Travis has 9. Sara has 2. How many shells do they have altogether?

Show your work and label your answer.

answer: \_\_\_\_\_

# ANSWER KEY

Skills: Money, Add/subtract, Place Value, Odd/Even

## Mixed Math: B-3

1. Kari has 17 roses and 9 tulips. How many more roses than tulips does she have?

Show your work and label your answer.

3.

6 7 8

Which digit is in the tens place?

7

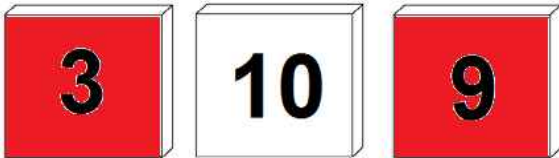
Which digit is in

8



6

2. Color only the tiles that have odd numbers.



4. Dan has 6 sea shells. Caitlin has 7 shells. Travis has 9. Sara has 2. How many shells do they have altogether?

Show your work and label your answer.

answer: 24 shells