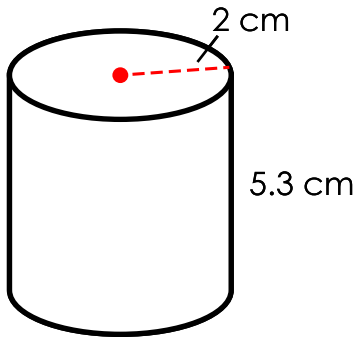


Name: _____

Volume of a Cylinder



A cylinder has a circular base. Use $A = \pi r^2$ to find the area of the base.

$$A \approx 3.14 \times 2^2$$

$$A \approx 3.14 \times 4$$

$$A \approx 12.56 \text{ cm}^2$$

The volume of the cylinder is equal to its base area times its height.

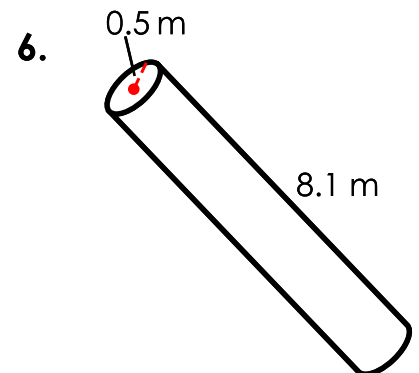
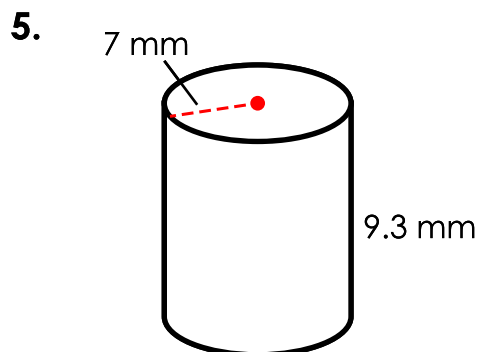
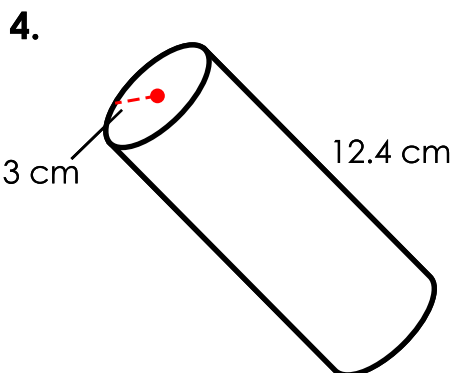
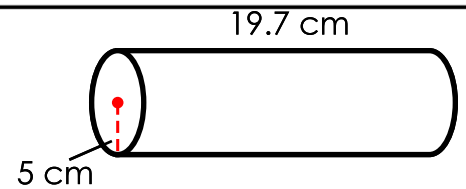
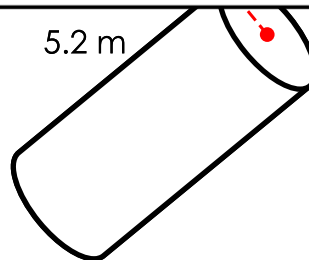
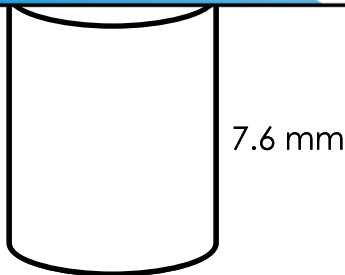
$$V \approx 12.56 \text{ cm}^2 \times 5.3 \text{ cm}$$

$$V \approx 66.57 \text{ cm}^3$$



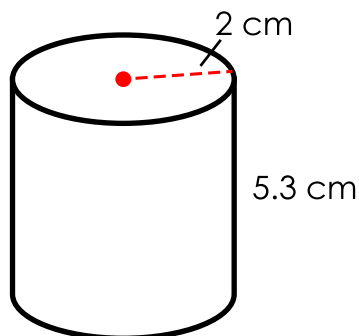
Preview

Please log in to download the printable version of this worksheet.



ANSWER KEY

Volume of a Cylinder



A cylinder has a circular base. Use $A = \pi r^2$ to find the area of the base.

$$A \approx 3.14 \times 2^2$$

$$A \approx 3.14 \times 4$$

$$A \approx 12.56 \text{ cm}^2$$

The volume of the cylinder is equal to its base area times its height.

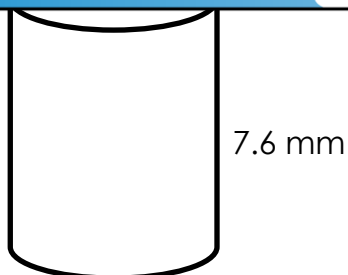
$$V \approx 12.56 \text{ cm}^2 \times 5.3 \text{ cm}$$

$$V \approx 66.57 \text{ cm}^3$$

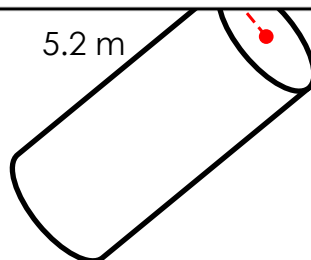


Preview

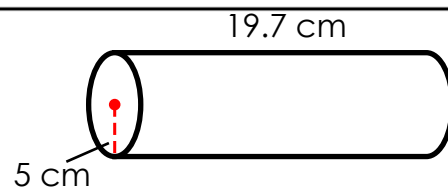
Please log in to download the printable version of this worksheet.



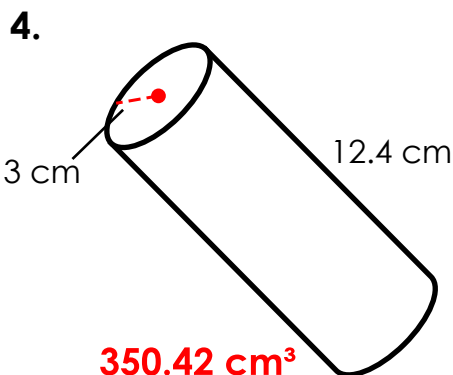
$$381.82 \text{ mm}^3$$



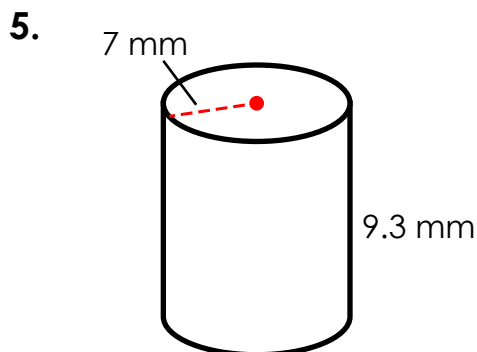
$$16.33 \text{ m}^3$$



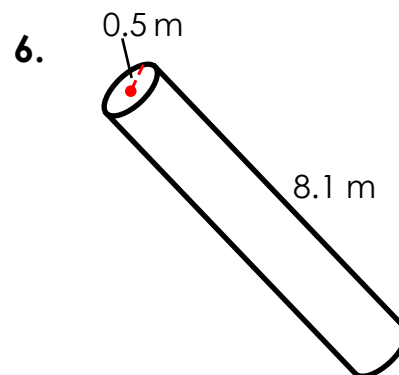
$$1,546.45 \text{ cm}^3$$



$$350.42 \text{ cm}^3$$



$$1,430.90 \text{ mm}^3$$



$$6.36 \text{ m}^3$$