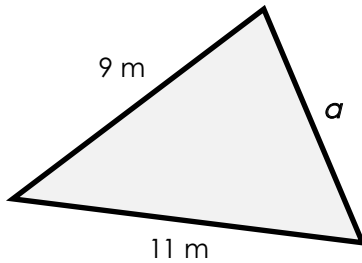


Perimeter of a Triangle

Find the missing length of each triangle.

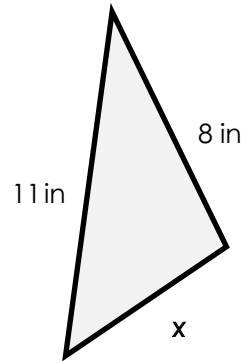
a.



perimeter = 28 m

a = _____

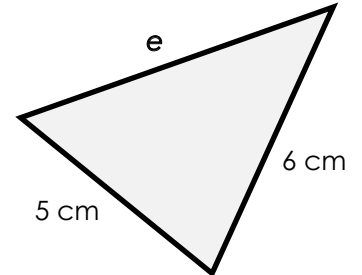
b.



perimeter = 25 in

x = _____

c.



perimeter = 18 cm

e = _____



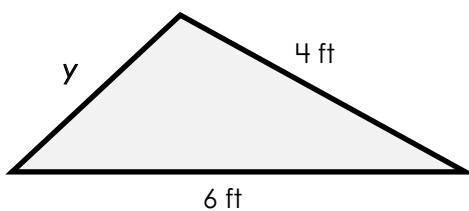
Preview

Please log in to download
the printable version of this worksheet.

perimeter = 19 ft

h = _____

g.



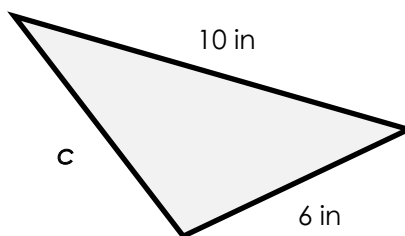
perimeter = 13 ft

y = _____

perimeter = 12 ft

z = _____

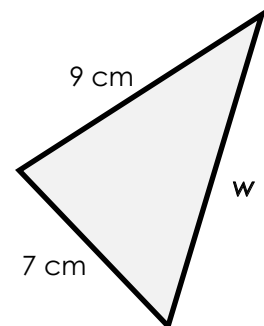
h.



perimeter = 23 in

c = _____

i.



perimeter = 26 cm

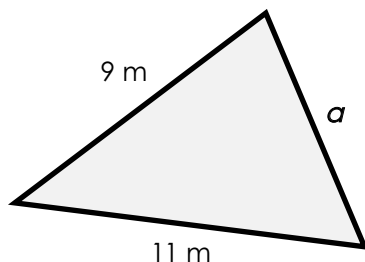
w = _____

Perimeter of a Triangle

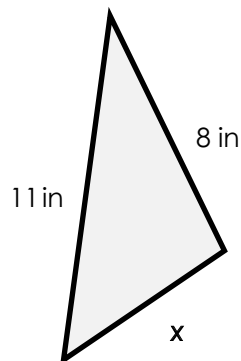
NOTE: The measurements of the triangles have been rounded to the nearest whole number. Triangles are not drawn to scale.

Find the missing length of each triangle.

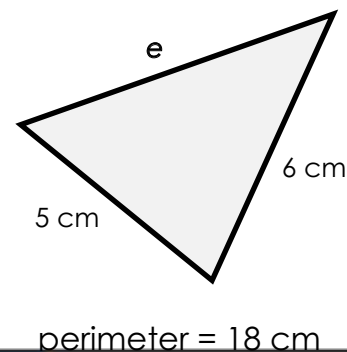
a.



b.



c.



Preview

Please log in to download
the printable version of this worksheet.

