

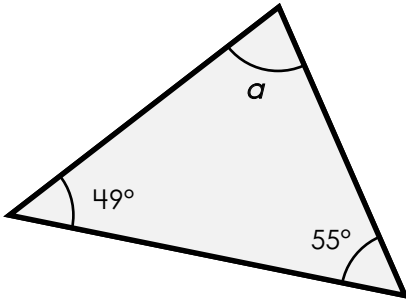
Name: \_\_\_\_\_

# Triangles

Missing Angles

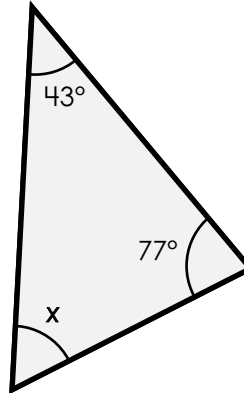
Find the missing angle of each triangle.

a.



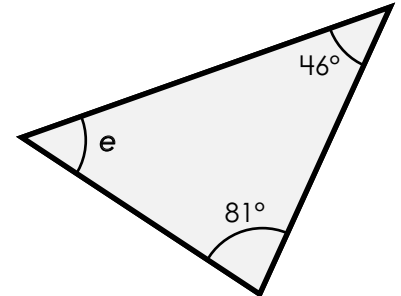
$\angle a =$  \_\_\_\_\_

b.



$\angle x =$  \_\_\_\_\_

c.



$\angle e =$  \_\_\_\_\_



# Preview

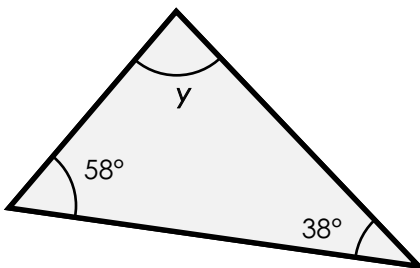
Please log in to download the printable version of this worksheet.

$\angle h =$  \_\_\_\_\_

$\angle z =$  \_\_\_\_\_

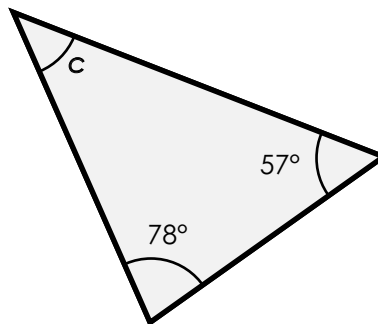
$\angle b =$  \_\_\_\_\_

g.



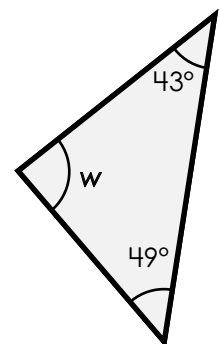
$\angle y =$  \_\_\_\_\_

h.



$\angle c =$  \_\_\_\_\_

i.



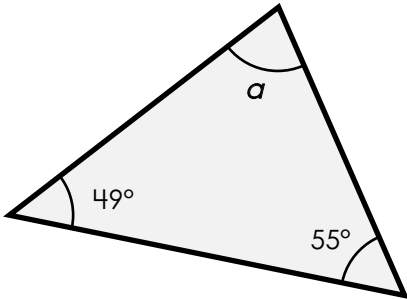
$\angle w =$  \_\_\_\_\_

## Triangles

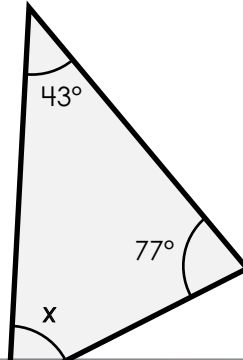
Missing Angles

Find the missing angle of each triangle.

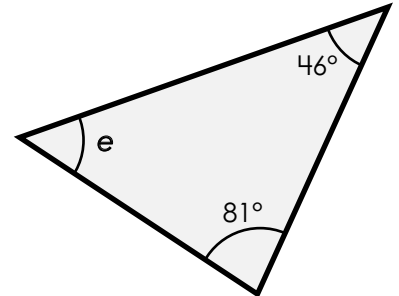
a.



b.



c.



# Preview

Please log in to download  
the printable version of this worksheet.

