

Name: _____

Telling Time



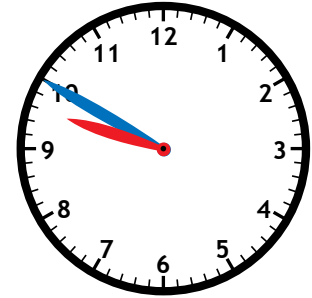
What time is it?

- ten minutes after five
- ten minutes after four
- fifteen minutes after five



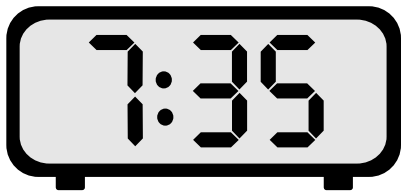
What time is it?

- twenty-five minutes after nine
- twenty-five minutes to eight
- twenty-five minutes after eight



What time is it?

- ten minutes to ten
- ten minutes to eleven
- ten minutes after ten



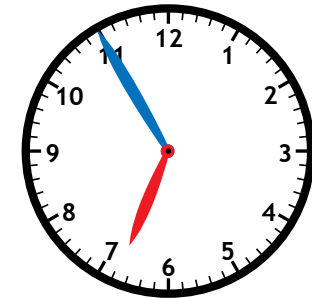
What time is it?

- twenty-five minutes to eight
- twenty-five minutes to seven
- twenty-five minutes after eight



What time is it?

- twenty minutes to nine
- twenty-five minutes to nine
- twenty minutes after nine



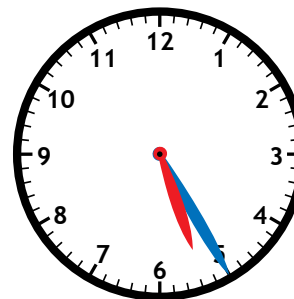
What time is it?

- ten minutes to six
- five minutes to seven
- five minutes after six



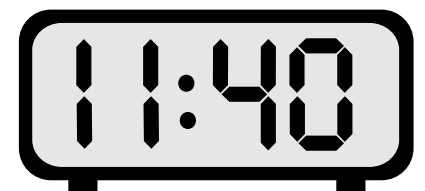
What time is it?

- five minutes after ten
- five minutes to eleven
- five minutes after twelve



What time is it?

- twenty-five minutes to six
- twenty-five minutes after five
- twenty minutes after five



What time is it?

- twenty minutes to twelve
- twenty minutes to eleven
- twenty minutes after twelve

Telling Time



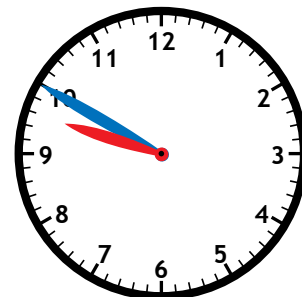
What time is it?

- ten minutes after five
- ten minutes after four
- fifteen minutes after five



What time is it?

- twenty-five minutes after nine
- twenty-five minutes to eight
- twenty-five minutes after eight



What time is it?

- ten minutes to ten
- ten minutes to eleven
- ten minutes after ten



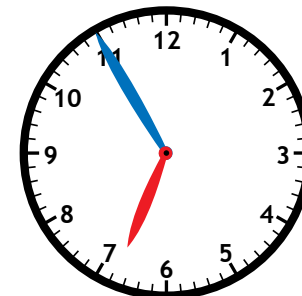
What time is it?

- twenty-five minutes to eight
- twenty-five minutes to seven
- twenty-five minutes after eight



What time is it?

- twenty minutes to nine
- twenty-five minutes to nine
- twenty minutes after nine



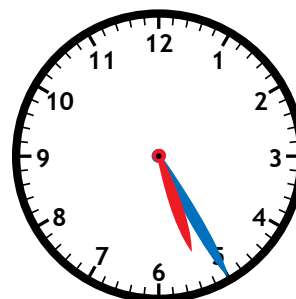
What time is it?

- ten minutes to six
- five minutes to seven
- five minutes after six



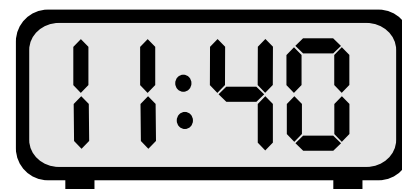
What time is it?

- five minutes after ten
- five minutes to eleven
- five minutes after twelve



What time is it?

- twenty-five minutes to six
- twenty-five minutes after five
- twenty minutes after five



What time is it?

- twenty minutes to twelve
- twenty minutes to eleven
- twenty minutes after twelve