


Name: _____

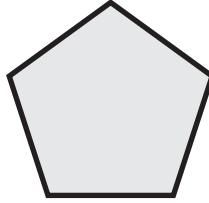
Tessellating Polygons

Tell if each polygon can tessellate. Write **yes** if it can or write **no** if it cannot.

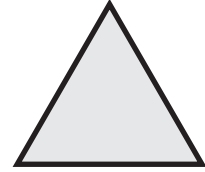
a.



b.



c.



d.



e.




f.



~ PREVIEW ~


Please log in or register to download the printable version of this worksheet.



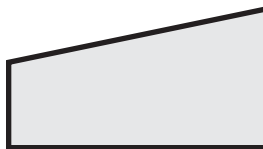




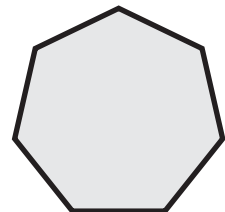
j.



k.



l.




ANSWER KEY

Tessellating Polygons

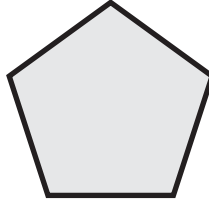
Tell if each polygon can tessellate. Write **yes** if it can or write **no** if it cannot.

a.



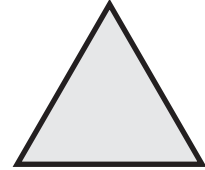
yes

b.



no

c.



yes

d.



e.




f.




~ PREVIEW ~

Please log in or register to download the printable version of this worksheet.



yes




yes



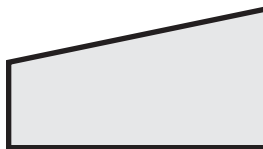
no

j.



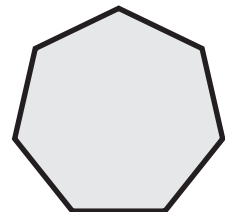
yes

k.



yes

l.



no