

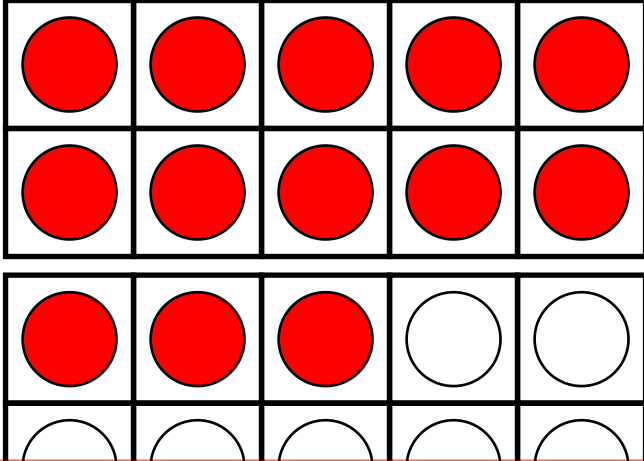
Name: _____

Ten Frames

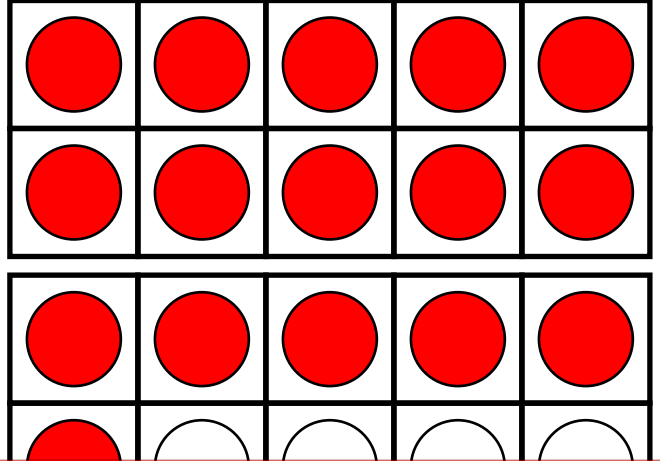
Up to Twenty

Write the addition and subtraction problems for each.

a.

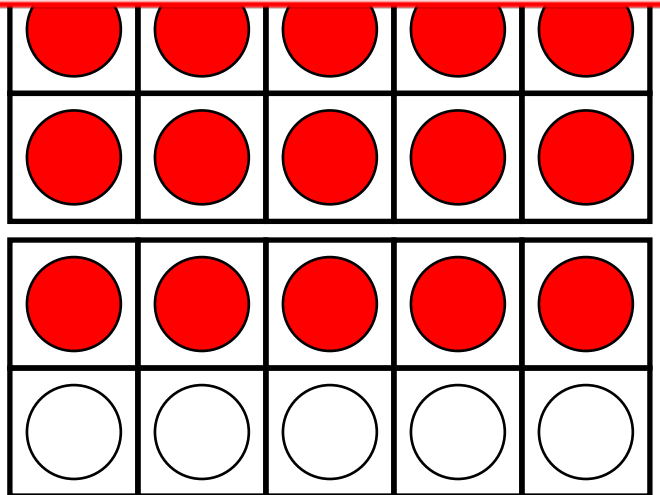
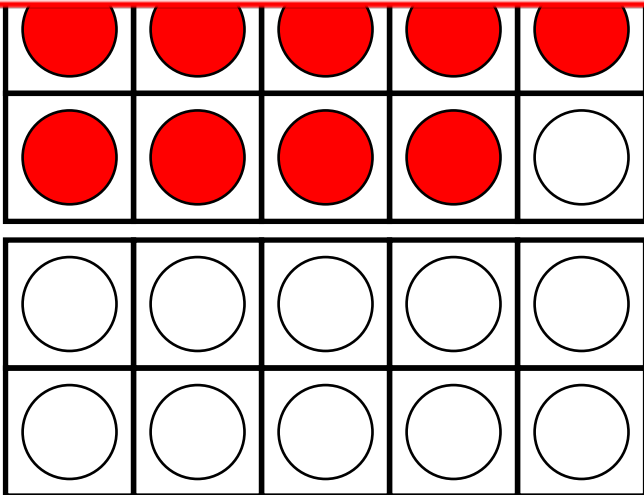


b.



~ PREVIEW ~

Please log in or register to download the printable version of this worksheet.



___ + ___ = ___

___ - ___ = ___

___ + ___ = ___

___ - ___ = ___

___ + ___ = ___

___ - ___ = ___

___ + ___ = ___

___ - ___ = ___

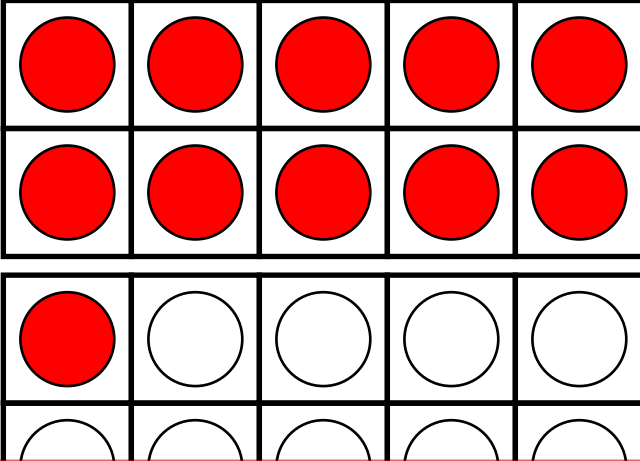
Name: _____

Ten Frames

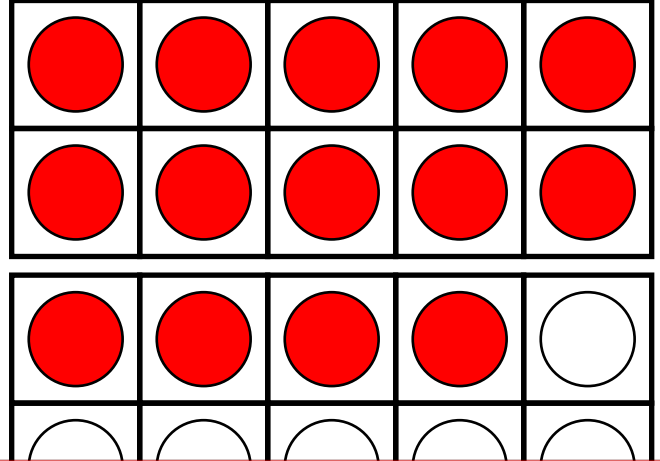
Up to Twenty

Write the addition and subtraction problems for each.

e.

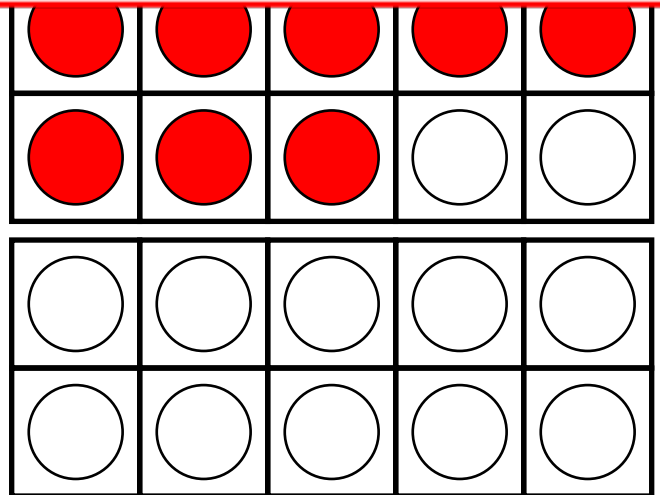



f.



~ PREVIEW ~

Please log in or register to download the printable version of this worksheet.



___ + ___ = ___

___ - ___ = ___

___ + ___ = ___

___ - ___ = ___

___ + ___ = ___

___ - ___ = ___

___ + ___ = ___

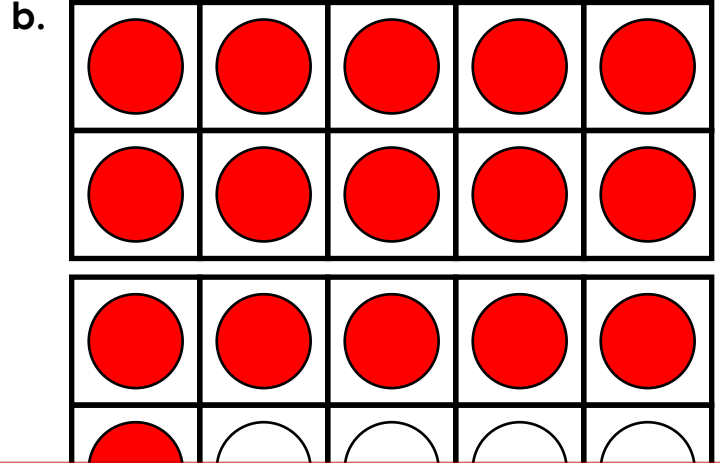
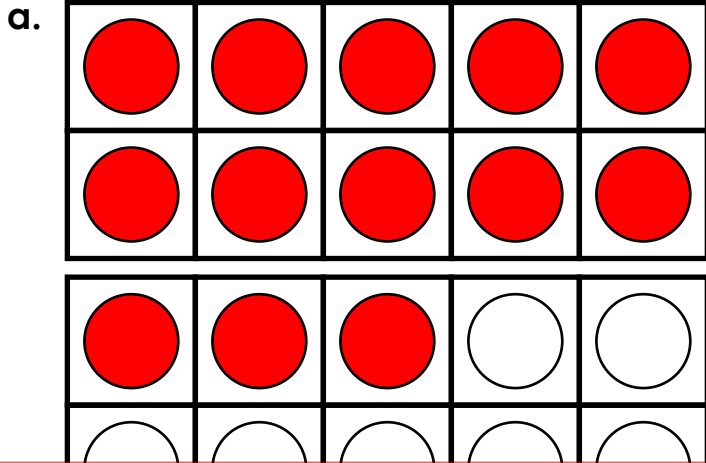
___ - ___ = ___

ANSWER KEY

Ten Frames

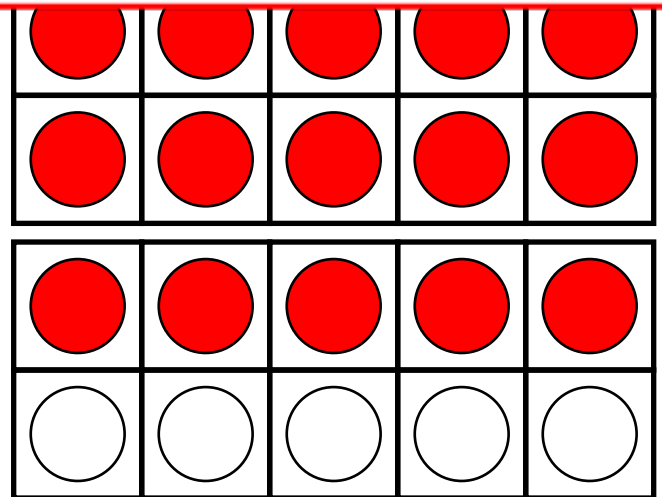
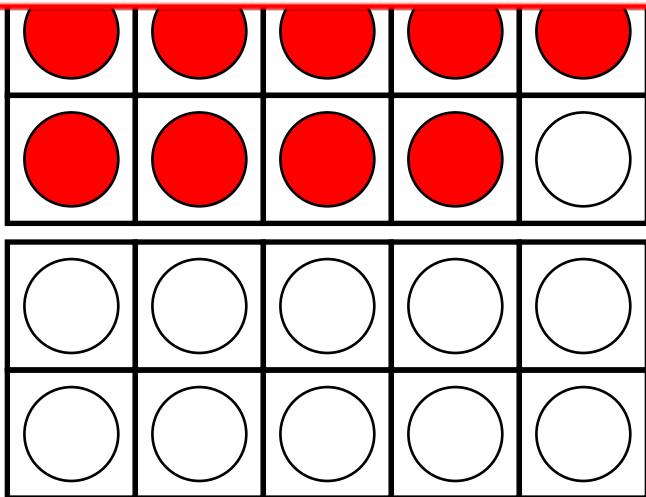
Up to Twenty

Write the addition and subtraction problems for each.



~ PREVIEW ~

Please log in or register to download the printable version of this worksheet.



$$\underline{9} + \underline{11} = \underline{20} \quad \underline{20} - \underline{9} = \underline{11}$$

$$\underline{15} + \underline{5} = \underline{20} \quad \underline{20} - \underline{15} = \underline{5}$$

$$\underline{11} + \underline{9} = \underline{20} \quad \underline{20} - \underline{11} = \underline{9}$$

$$\underline{5} + \underline{15} = \underline{20} \quad \underline{20} - \underline{5} = \underline{15}$$

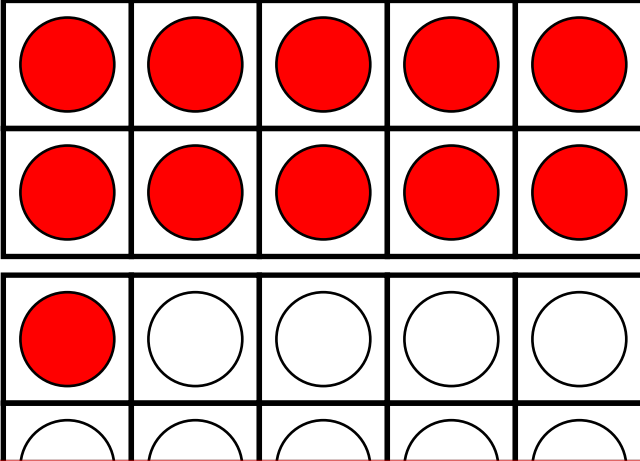
ANSWER KEY

Ten Frames

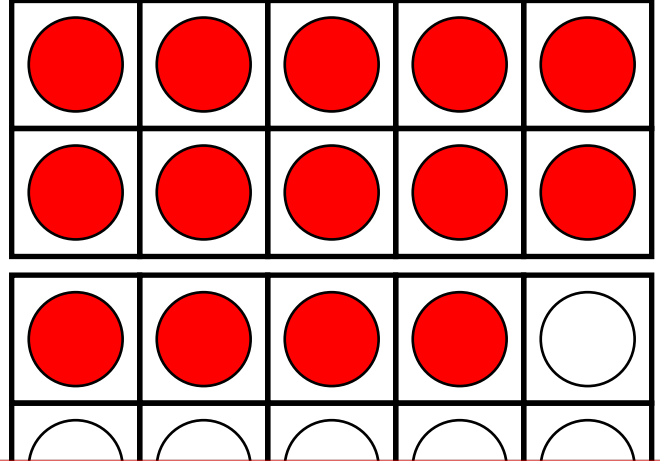
Up to Twenty

Write the addition and subtraction problems for each.

e.

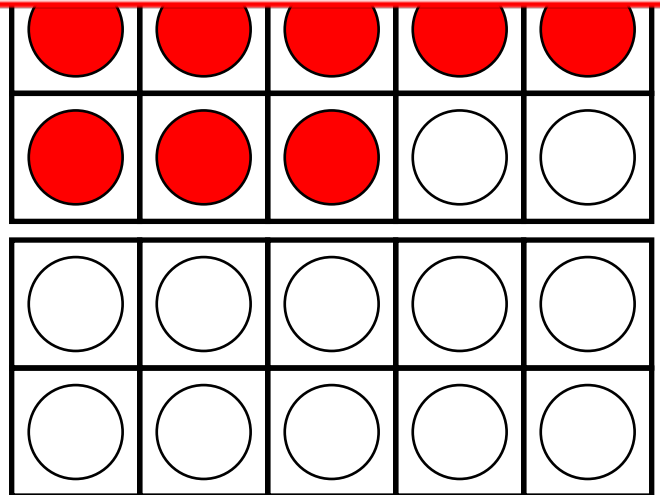



f.



~ PREVIEW ~

Please log in or register to download the printable version of this worksheet.



$$\underline{18} + \underline{2} = \underline{20}$$

$$\underline{20} - \underline{18} = \underline{2}$$

$$\underline{8} + \underline{12} = \underline{20}$$

$$\underline{20} - \underline{8} = \underline{12}$$

$$\underline{2} + \underline{18} = \underline{20}$$

$$\underline{20} - \underline{2} = \underline{18}$$

$$\underline{12} + \underline{8} = \underline{20}$$

$$\underline{20} - \underline{12} = \underline{8}$$