




Super Teacher Summer Packet

Summer Buzz


Daily Math Practice
Week Six Packet



Grade

3

Name: _____



Summer Buzz

The Brentwood Auditorium seats 943 people. Last night, 636 people came to see a concert. How many more people could have been seated?

Show your work

answer: _____ people

Fill in the missing numbers.

103	559

288	
846	


Write the number in expanded and word form.

863

expanded: _____

word: _____

Color one-fourth of the circle.



$\frac{1}{4}$

Color one-third of the rectangle.



$\frac{1}{3}$

Room 14's Favorite Subjects

Math	
Science	
Reading	
Writing	

Each = 2 votes


How many students chose math as their favorite subject?

answer: _____

How many students chose writing as their favorite subject?

answer: _____

Name: _____



Summer Buzz

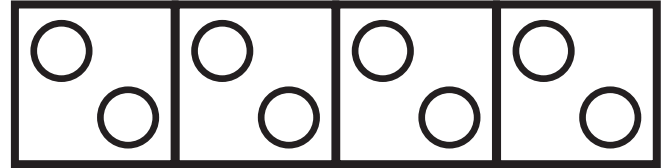


Marco wants to buy a book that costs \$4.29 from the school store. How much money does Marco have?

Does he have enough to buy it?

yes

no



$$2 + 2 + 2 + 2 = \underline{\hspace{2cm}}$$

$$4 \text{ groups of } 2 = \underline{\hspace{2cm}}$$

$$4 \times 2 = \underline{\hspace{2cm}}$$

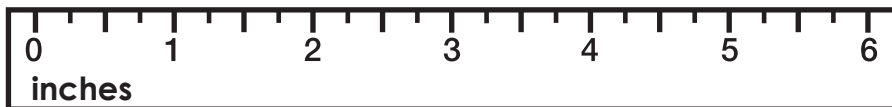
Write the number in expanded and word form.

358

expanded: _____

word: _____


How long is the feather?



The feather is _____ inches long.

Draw a shape that has 4 equal sides.

Name: _____




Summer Buzz

There are 572 students enrolled in Bonner Elementary School, and 394 students enrolled in Bonner Middle School. How many students are enrolled in both schools combined?

Show your work

Elementary School
572 students



Middle School
394 students



answer: _____ students

Round to the **nearest ten**.

92 _____ 46 _____

Round to the **nearest hundred**.

532 _____ 689 _____


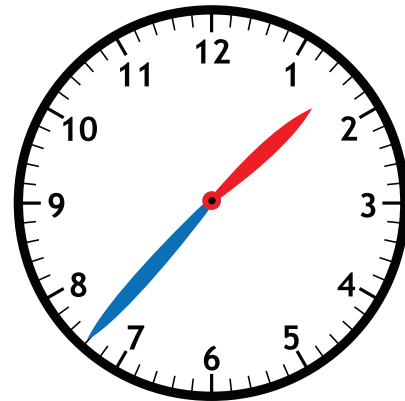
Circle the digits in the ones place.

3 5 4

7 8

5 9 3

Fill in the time on the digital clock to show the same time on the analog clock.




Add. Show your work

$$\begin{array}{r} 550 \\ + 271 \\ \hline \end{array}$$

Find the sum of 233 and 757. _____

$$707 + 147 = \underline{\hspace{2cm}}$$

Name: _____



Summer Buzz

Circle the digits in the tens place.

54

673

834

There were 618 tickets sold at the Glen Park Movie Theater on Saturday. On Sunday, 384 tickets were sold. How many more tickets were sold on Saturday than Sunday?

Show your work

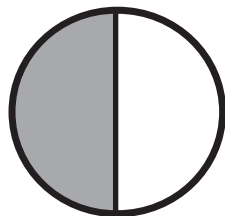
Subtract. *Show your work*

Find the difference between 865 and 307.

$$578 - 286 = \underline{\hspace{2cm}}$$

$$\begin{array}{r} 752 \\ - 294 \\ \hline \end{array}$$

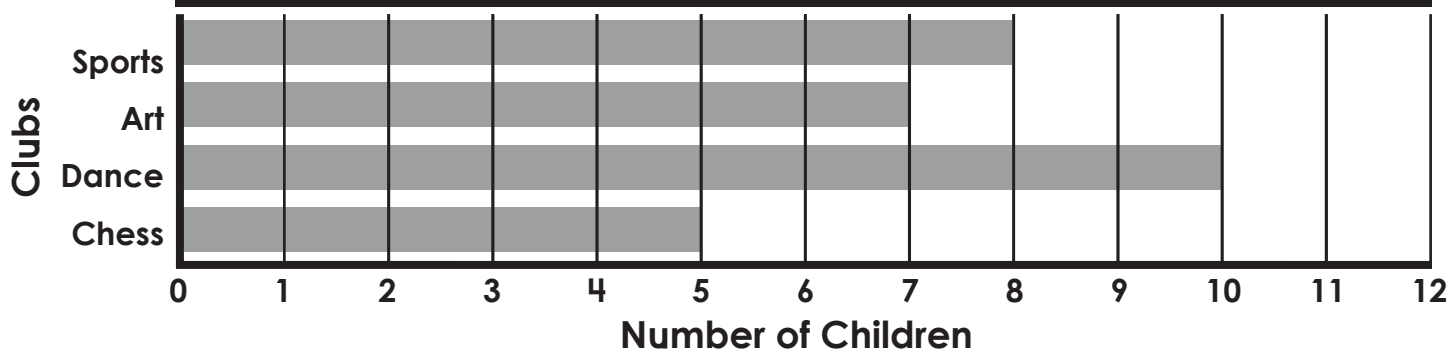
What fraction of the circle is shaded?



$\frac{1}{2}$ $\frac{1}{3}$ $\frac{1}{4}$

answer: _____ tickets

THIRD GRADE AFTER SCHOOL CLUBS




How many children are in Dance Club?

answer: _____

Which club has the least amount of children?

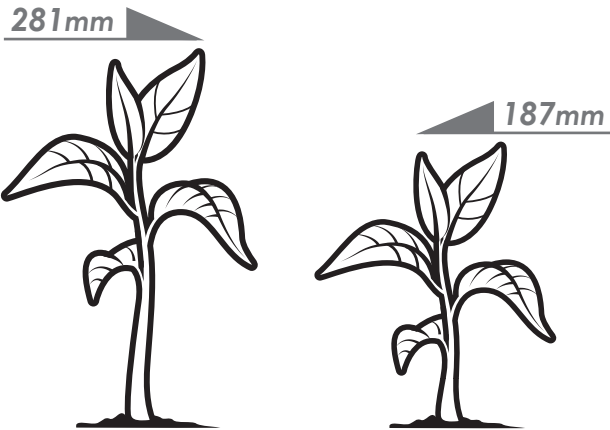
answer: _____

Name: _____



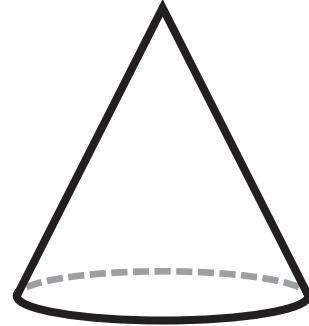
Summer Buzz

Mikayla and Jorge grew bean plants for a science experiment. Mikayla's plant was 281 millimeters tall. Jorge's plant was 187 millimeters tall. How much taller was Mikayla's plant than Jorge's?



answer: _____ millimeters

Choose the name of the shape.



sphere

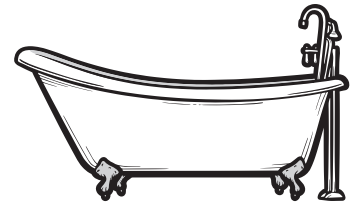
cylinder

cone

Which holds **less** liquid? Circle your answer.



tea cup



bathtub



$$3 + 3 + 3 + 3 + 3 = \underline{\hspace{2cm}}$$

$$5 \text{ groups of } 3 = \underline{\hspace{2cm}}$$

$$5 \times 3 = \underline{\hspace{2cm}}$$

Circle the digits in the hundreds place.

431



546

748

Start a **FREE** trial today at

www.iknowit.com

Engage your elementary students with interactive math and ELA practice.



Thank you for being
a valued member of
Super Teacher Worksheets!

