





Super Teacher Summer Packet


Summer Buzz

Daily Math Practice
Week Five Packet




Grade
3

Name: _____

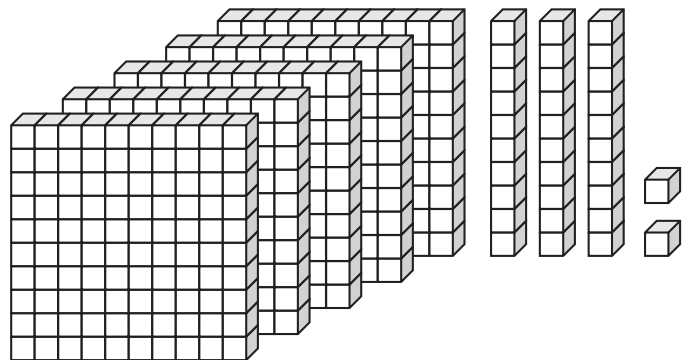


Summer Buzz

Circle the word that names the equal parts.

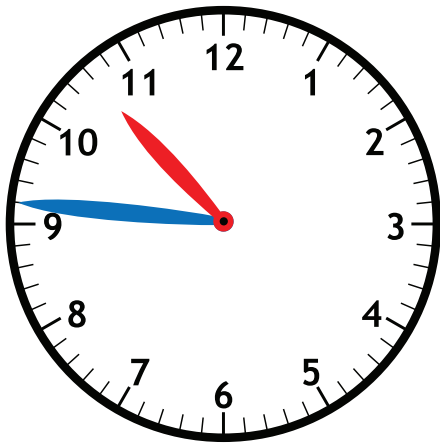


halves thirds quarters



What number is shown? _____

Circle the digital clock that shows the same time as the analog clock.








Mr. Burke's class needs 250 points to earn outdoor free time. If they already have 165 points, how many more points do they need to earn?

Show your work


answer: _____ points

How many fish are there in all?



answer: _____ fish

Name: _____



Summer Buzz

Fill in the missing numbers.

186	514















472	
155	

Deja logged 161 minutes of reading on her reading log last week. This week she logged 189 minutes of reading. How many minutes did Deja log for both weeks combined?

Show your work

answer: _____ minutes

Goals Scored

Luca					
Avery					
Yessenia					
Cyrus					

Each  = 1 goal

Which player(s) scored more goals than Luca?

answer: _____

How many total goals did the team score?

answer: _____

Write the numbers in standard form.

one hundred ninety-four


600 + 50 + 2

How many sides?


answer: _____

How many angles?

answer: _____

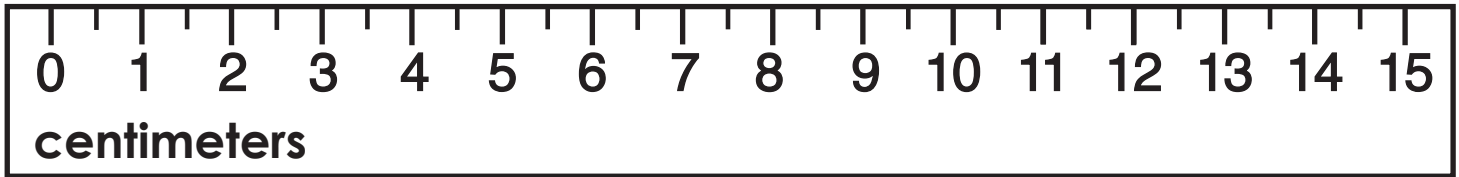



Name: _____



Summer Buzz

How long is the paper clip?



The paper clip is _____ centimeters long.


Olivia bought a pencil and an emoji eraser for 75¢ from the school store. She paid with a \$1 bill. How much change did Olivia receive?

Show your work

answer:

_____ ¢

Circle the word that names the equal parts.



halves

thirds

fourths

Write the number in word form.

825


Add. Show your work

$$\begin{array}{r} 313 \\ + 609 \\ \hline \end{array}$$

Find the sum of 224 and 738. _____

$$549 + 160 = \underline{\hspace{2cm}}$$

Name: _____

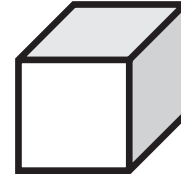


Summer Buzz

Write the number in expanded form.

413


Choose the name of the shape.



cube

cone

sphere



2 + 2 = _____

2 groups of 2 = _____

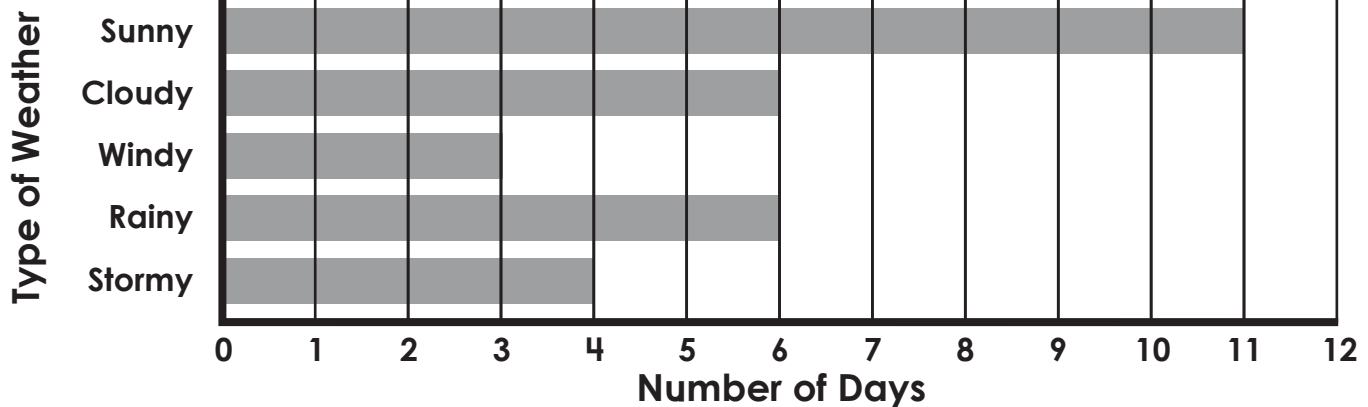
2 x 2 = _____

Last week, Connor spent 270 minutes at soccer practice and 120 minutes at soccer games. How many total minutes did Connor spend at soccer?

Show your work

answer: _____ minutes


SEPTEMBER WEATHER



How many more sunny days than cloudy days? answer: _____

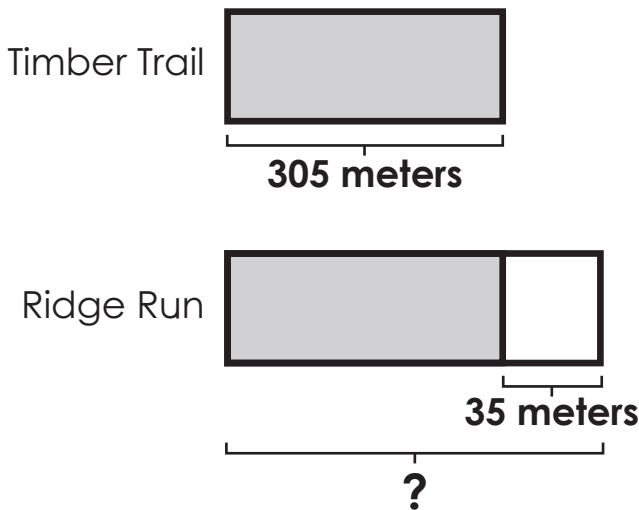
How many rainy and stormy days combined? answer: _____

Name: _____



Summer Buzz

Enzo and his family hiked Timber Trail before lunch and Ridge Run after lunch. The length of Timber Trail is 305 meters and Ridge Run is 35 meters longer. How long is Ridge Run?



answer: _____ meters

Compare each set of numbers using $>$, $<$, $=$.

80 _____ 57

68 _____ 132

201 _____ 95

520 _____ 376


Round to the **nearest ten**.

25 _____ 72 _____

Round to the **nearest hundred**.

918 _____ 390 _____

Circle the object that weighs more.



leaf



pumpkin

Subtract. *Show your work*

Find the difference between 465 and 172.

936 - 496 = _____

542
- 314

Summer Buzz ANSWERS



Daily Math Practice

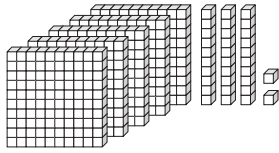
C

Week 5

Circle the word that names the equal parts.



halves **thirds** quarters



What number is shown?

532

Circle the digital clock that shows the same time as the analog clock.



9:54

11:46

10:46


Mr. Burke's class needs 250 points to earn outdoor free time. If they already have 165 points, how many more points do they need to earn?

Show your work

$$250 - 165 = 85$$

answer: **85** points

How many fish are there in all?



answer: **10** fish

Fill in the missing numbers.

700	
186	514

$$186 + 514 = 700$$

472	
155	317

$$472 - 155 = 317$$

Deja logged 161 minutes of reading on her reading log last week. This week she logged 189 minutes of reading. How many minutes did Deja log for both weeks combined?

Show your work

$$161 + 189 = 350$$

answer: **350** minutes

Goals Scored	
Luca	4
Avery	5
Yessierli	2
Cyus	3

Which player(s) scored more goals than Luca?

answer: **Avery**

How many total goals did the team score?

answer: **14**


Write the numbers in standard form.

one hundred ninety-four

194

$$600 + 50 + 2$$

652



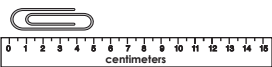
How many sides?

answer: **0**

How many angles?

answer: **0**

How long is the paper clip?



The paper clip is **5** centimeters long.


Olivia bought a pencil and an emoji eraser for 75¢ from the school store. She paid with a \$1 bill. How much change did Olivia receive?

Show your work

$$100¢ - 75¢ = 25¢$$

answer: **25** ¢

Circle the word that names the equal parts.



halves

thirds

fourths

Write the number in word form.

825

eight hundred twenty-five

Add. Show your work

Find the sum of 224 and 738.

962

$$549 + 160 = 709$$

$$\begin{array}{r} 1 \\ 313 \\ + 609 \\ \hline 922 \end{array}$$

Write the number in expanded form.

413

$$400 + 10 + 3$$

Choose the name of the shape.



cube cone sphere



$$2 + 2 = 4$$

$$2 \text{ groups of } 2 = 4$$

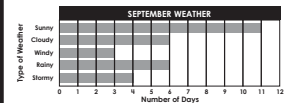
$$2 \times 2 = 4$$

Last week, Connor spent 270 minutes at soccer practice and 120 minutes at soccer games. How many total minutes did Connor spend at soccer?

Show your work

$$270 + 120 = 390$$

answer: **390** minutes



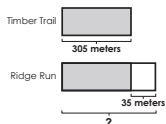
How many more sunny days than cloudy days?

answer: **5**

How many rainy and stormy days combined?

answer: **10**

Enzo and his family hiked Timber Trail before lunch and Ridge Run after lunch. The length of Timber Trail is 305 meters and Ridge Run is 35 meters longer. How long is Ridge Run?



answer: **340** meters

Round to the nearest ten.

25 **30** 72 **70**

Round to the nearest hundred.

918 **900** 390 **400**

Circle the object that weighs more.



leaf



pumpkin

Compare each set of numbers using >, <, =.

$$80 > 57$$

$$68 < 132$$

$$201 > 95$$

$$520 > 376$$

Subtract. Show your work

Find the difference between 465 and 172.

293



$$936 - 496 = 440$$

$$\begin{array}{r} 312 \\ 542 \\ - 314 \\ \hline 228 \end{array}$$

Start a **FREE** trial today at

www.iknowit.com

Engage your elementary students with interactive math and ELA practice.



Thank you for being
a valued member of
Super Teacher Worksheets!

