





Super Teacher Summer Packet


Summer Buzz

Daily Math Practice
Week Four Packet



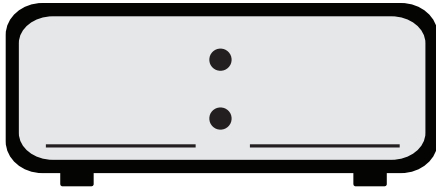
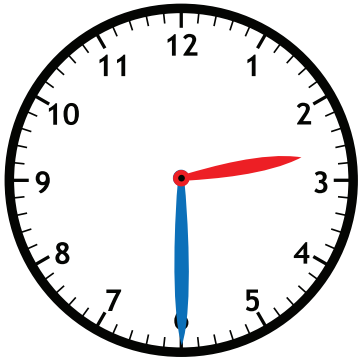
Grade
3

Name: _____



Summer Buzz

Fill in the time on the digital clock to show the same time on the analog clock.



Maya and Jaxon were playing a trivia game together. Jaxon scored 73 points and Maya scored 64 points. What was their combined score?



Show your work

Jaxon: 73 points

Maya: 64 points

answer:

_____ points



How many sides does the rectangle have?

answer: _____

How many angles does the rectangle have?

answer: _____

Write the numbers in expanded form.

78 _____

157 _____

293 _____


Subtract.

933 - 678 = _____

849
- 750

321
- 125

Name: _____



Summer Buzz

Class Pets									
Dogs									
Cats									
Fish									
Hamsters									

Each = 1 pet

How many more students have dogs than hamsters? _____

How many fewer students have fish than cats? _____

Write the numbers in standard form.

seven hundred sixteen

nine hundred forty-one

About how long is a pencil?



8 inches

8 feet

80 inches

Add.

$$\begin{array}{r} 246 \\ + 381 \\ \hline \end{array}$$

$248 + 409 = \underline{\hspace{2cm}}$


$701 + 882 = \underline{\hspace{2cm}}$

There are 95 pages in the chapter book Alina is reading. She read 26 pages so far. How many pages does she have left to read?

Show your work

answer: _____ pages

Name: _____





Summer Buzz

Write the numbers in standard form.

$$80 + 9 \quad \underline{\hspace{2cm}}$$

$$400 + 20 + 9 \quad \underline{\hspace{2cm}}$$

Draw straight lines to divide each shape into 4 equal parts




Malik has 1 quarter, 3 dimes, 1 nickel and 2 pennies. How much money does Malik have?

Show your work

answer: _____ ¢

How many cookies are there in all?




answer: _____ cookies



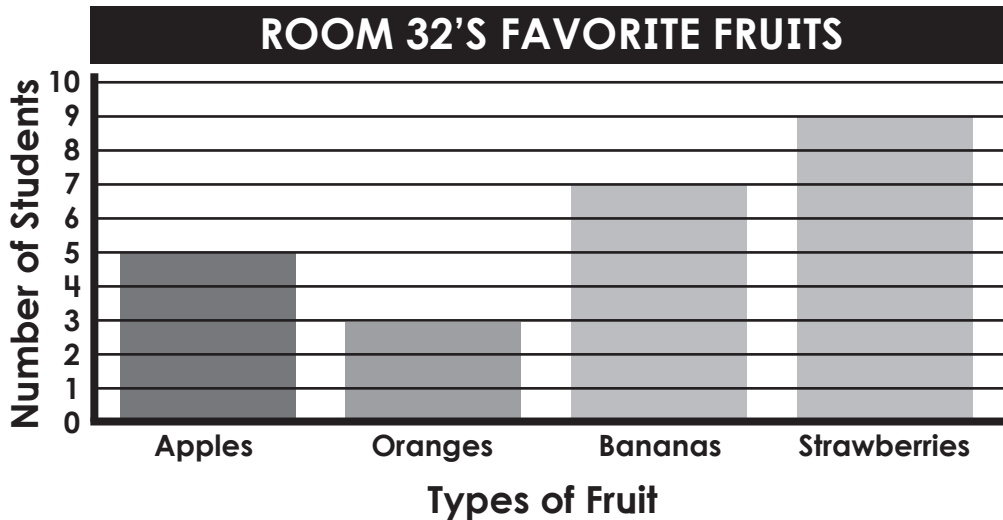
How much money is shown?

answer: _____

Name: _____



Summer Buzz



How many more students chose strawberries over oranges?

How many fewer students chose apples over bananas?

Color the even numbers red.
Color the odd numbers blue.


4	15	16	17
3	9	10	20

745

Add 10

Add 100

About how long is an eraser?



6 millimeters

6 centimeters


60 centimeters

Leila had 75¢. She gave her brother one dime and one nickel. How much money does she have left?

Show your work

answer: _____ ¢

Name: _____



Summer Buzz

Compare each set of numbers using $>$, $<$, $=$.

34 _____ 28

456 _____ 645

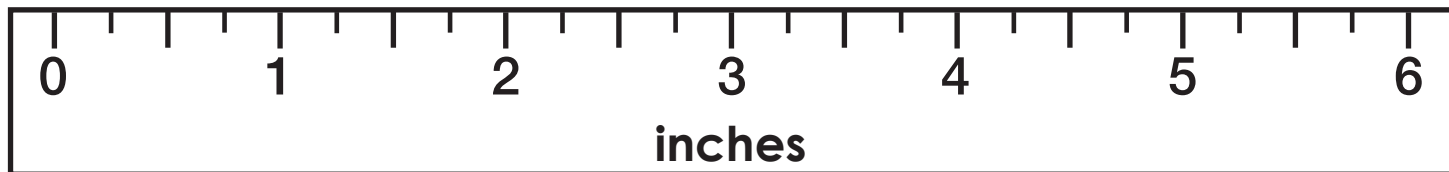
793 _____ 643

678

Subtract 10

Subtract 100

How long is the crayon?

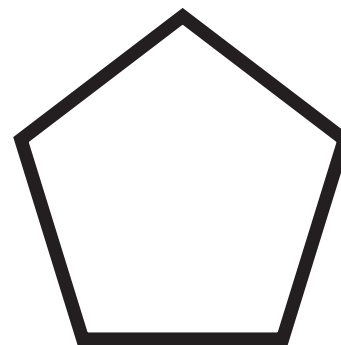


The crayon is _____ inches long.

Donovan is making costumes for the school play. He sewed together two pieces of fabric that were each 16 inches long to make a belt. What is the total length of the belt?

Show your work

answer: _____ inches



How many sides? _____

How many angles? _____

Summer Buzz ANSWERS



Daily Math Practice

C

Week 4

Fill in the time on the digital clock to show the same time on the analog clock.

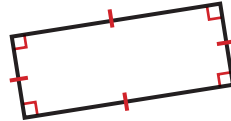


2:30

Maya and Jaxon were playing a trivia game together. Jaxon scored 73 points and Maya scored 64 points. What was their combined score?

$$73 + 64 = 137$$

answer: 137 points



How many sides does the rectangle have?
answer: 4

How many angles does the rectangle have?
answer: 4

Write the numbers in expanded form.

$$78 = 70 + 8$$

$$157 = 100 + 50 + 7$$

$$293 = 200 + 90 + 3$$

Subtract.

$$933 - 678 = 255$$

$$\begin{array}{r} 7\ 14 \\ 849 \\ - 750 \\ \hline 99 \end{array} \qquad \begin{array}{r} 2\ 11\ 11 \\ 321 \\ - 125 \\ \hline 196 \end{array}$$

Class Pets	
Dogs	
Cats	
Fish	
Hamsters	

How many more students have dogs than hamsters?
4

How many fewer students have fish than cats?
3

Write the numbers in standard form.

seven hundred sixteen

716

nine hundred forty-one

941

About how long is a pencil?



8 inches

8 feet

80 inches

Add.

$$\begin{array}{r} 1 \\ 246 \\ + 381 \\ \hline 627 \end{array}$$

$$248 + 409 = 657$$

$$701 + 882 = 1,583$$

There are 95 pages in the chapter book Alina is reading. She read 26 pages so far. How many pages does she have left to read?

$$95 - 26 = 69$$

answer: 69 pages

Write the numbers in standard form.

$$80 + 9 = 89$$

$$400 + 20 + 9 = 429$$

Draw straight lines to divide each shape into 4 equal parts




Answers may vary.

Malik has 1 quarter, 3 dimes, 1 nickel and 2 pennies. How much money does Malik have?



answer: 62 ¢

How many cookies are there in all?

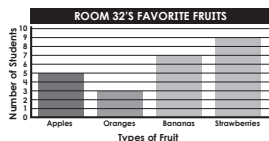


answer: 9 cookies



How much money is shown?

answer: \$4.75



How many more students chose strawberries over oranges? 6

How many fewer students chose apples over bananas?
2

Color the even numbers red. Color the odd numbers blue.



745

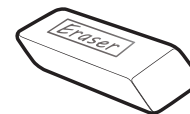
Add 10

755

Add 100

845

About how long is an eraser?



6 millimeters

6 centimeters

60 centimeters

Leila had 75¢. She gave her brother one dime and one nickel. How much money does she have left?

$$75¢ - 15¢ = 60¢$$

answer: 60 ¢

Compare each set of numbers using >, <, =.

$$34 > 28$$

$$456 < 645$$

$$793 > 643$$

678

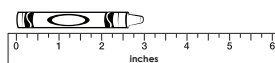
Subtract 10

668

Subtract 100

578

How long is the crayon?

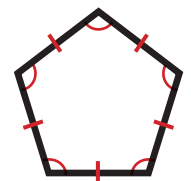


The crayon is 3 inches long.

Donovan is making costumes for the school play. He sewed together two pieces of fabric that were each 16 inches long to make a belt. What is the total length of the belt?

$$16 + 16 = 32$$

answer: 32 inches





How many sides? 5

How many angles? 5

Start a **FREE** trial today at

www.iknowit.com

Engage your elementary students with interactive math and ELA practice.



Thank you for being
a valued member of
Super Teacher Worksheets!

