




Super Teacher Summer Packet


Summer Buzz

Daily Math Practice
Week Three Packet



Grade
3

Name: _____



Summer Buzz

Fill in the missing numbers.

278, _____, 280, _____, 282

_____, 516, _____, 518, _____

953, _____, 955, _____, 957

Add.

$$\begin{array}{r} 36 \\ + 49 \\ \hline \end{array}$$

$$\begin{array}{r} 820 \\ + 398 \\ \hline \end{array}$$

$$625 + 67 = \underline{\hspace{2cm}}$$

Write the value of each coin.

Make sure to use the cent (¢) sign

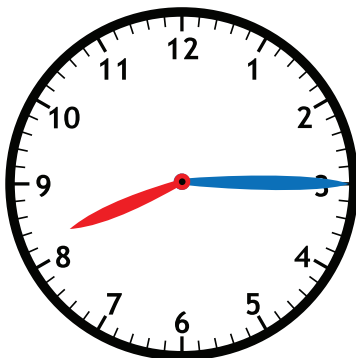








Circle the digital clock that shows the same time as the analog clock.




Grove Elementary's basketball team lost their game on Friday by 15 points. If the winning team had 62 points, how many points did Grove Elementary have?

Show your work

answer: _____ points

Name: _____



Summer Buzz

How many squares long is the crayon?



answer: _____ squares

Subtract.

$$\begin{array}{r} 91 \\ - 54 \\ \hline \end{array} \quad \begin{array}{r} 625 \\ - 208 \\ \hline \end{array}$$


$$546 - 355 = \underline{\hspace{2cm}}$$

How many sides?

answer: _____

How many angles?

answer: _____



Count by 5s.

105, _____, 115, _____, 125

450, _____, _____, 465, 470


775, 780, _____, _____, 795

There are 47 girls and 53 boys in third grade at Westwood Elementary School. How many third grade students are there in all?


Show your work

answer: _____ students

Name: _____



Summer Buzz



About how long is a bicycle?

5 inches

5 feet

Add.

$$\begin{array}{r} 54 \\ 36 \\ 90 \\ + 29 \\ \hline \end{array}$$

$$\begin{array}{r} 25 \\ 67 \\ 10 \\ + 44 \\ \hline \end{array}$$

62 + 48 + 81 = _____

Moira has 2 quarters, 1 dime, 3 nickels, and 6 pennies. How much money does she have?

Show your work

answer: _____ ¢

Count by 10s.

310, _____, 330, _____, 350

640, _____, _____, 670, 680

860, 870, _____, _____, 900

Books Read Over the Summer

Kamari	
Daxton	
Elyse	
Zara	

Each = 1 book


Who read the most books?

answer: _____

Who read the fewest books?

answer: _____

Name: _____



Summer Buzz



How much money is shown?

answer: _____

Count by 100s.

100, _____, 300, _____, 500

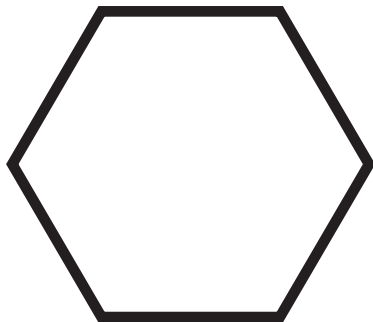
_____, 400, _____, 600, _____

500, _____, 700, _____, 900

214

Add 10

Add 100



How many sides?

answer: _____

How many angles?


answer: _____

Quinton is 48 inches tall. His older brother is 64 inches tall. How much taller is Quinton's older brother?



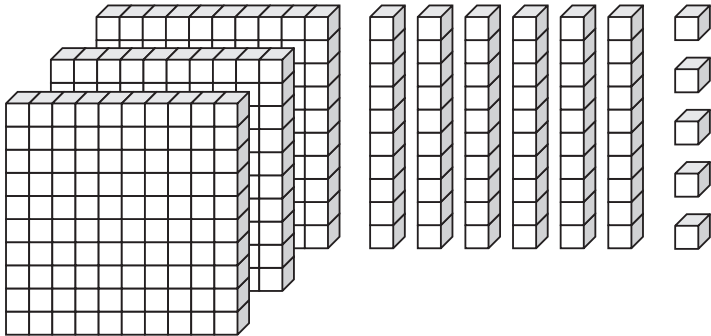
answer: _____ inches

Name: _____



Summer Buzz

Count the blocks.



What number is shown?


Hundreds	Tens	Ones

958

Subtract 10

Subtract 100

About how long is a real school bus?



12 centimeters

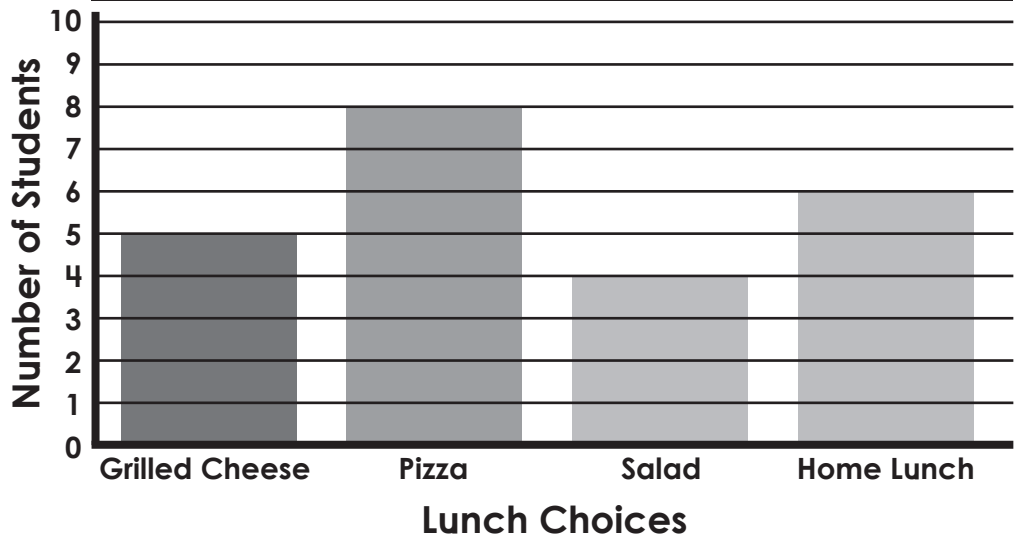
12 meters

Gino had 89¢. He used one quarter to buy a gumball. How much money does Gino have left?

Show your work

answer: _____ ¢

LUNCH COUNT



Which lunch choice has the most? _____

Which lunch choice has the least? _____

Summer Buzz ANSWERS



Daily Math Practice

C

Week 3

Fill in the missing numbers.

278, 279, 280, 281, 282

515, 516, 517, 518, 519

953, 954, 955, 956, 957

Add.

$$\begin{array}{r} 1 \\ 36 \\ + 49 \\ \hline 85 \end{array} \qquad \begin{array}{r} 1 \\ 820 \\ + 398 \\ \hline 1,218 \end{array}$$

$625 + 67 = \underline{692}$

Write the value of each coin.



5¢



10¢



1¢



25¢

Circle the digital clock that shows the same time as the analog clock.



Grove Elementary's basketball team lost their game on Friday by 15 points. If the winning team had 62 points, how many points did Grove Elementary have?

$62 - 15 = 47$

answer: 47 points

How many squares long is the crayon?

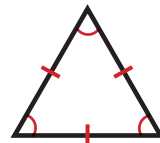


answer: 6 squares

Subtract.

$$\begin{array}{r} 811 \\ 97 \\ - 54 \\ \hline 37 \end{array} \qquad \begin{array}{r} 115 \\ 625 \\ - 208 \\ \hline 417 \end{array}$$

$546 - 355 = \underline{191}$



How many sides? answer: 3

How many angles? answer: 3

Count by 5s.

105, 110, 115, 120, 125


450, 455, 460, 465, 470

775, 780, 785, 790, 795

There are 47 girls and 53 boys in third grade at Westwood Elementary School. How many third grade students are there in all?

$47 + 53 = 100$

answer: 100 students



About how long is a bicycle?


5 inches 5 feet

Add.

$$\begin{array}{r} 1 \\ 54 \\ 36 \\ 90 \\ + 29 \\ \hline 209 \end{array} \qquad \begin{array}{r} 1 \\ 25 \\ 67 \\ 10 \\ + 44 \\ \hline 146 \end{array}$$

$62 + 48 + 81 = \underline{191}$

Moira has 2 quarters, 1 dime, 3 nickels, and 6 pennies. How much money does she have?



answer: 81 ¢

Count by 10s.

310, 320, 330, 340, 350

640, 650, 660, 670, 680

860, 870, 880, 890, 900

Books Read Over the Summer	
Kamari	
Daxton	
Elyse	
Zara	

Who read the most books?

answer: Zara

Who read the fewest books?

answer: Daxton

Count by 100s.

100, 200, 300, 400, 500

300, 400, 500, 600, 700

500, 600, 700, 800, 900

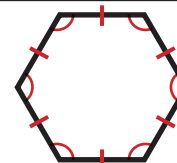


How much money is shown?

answer: \$3.50

214

Add 10	Add 100
<u>224</u>	<u>314</u>



How many sides? answer: 6

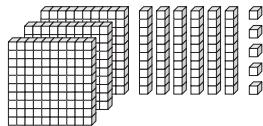
How many angles? answer: 6

Quinton is 48 inches tall. His older brother is 64 inches tall. How much taller is Quinton's older brother?

$64 - 48 = 16$

answer: 16 inches

Count the blocks.



What number is shown?

Hundreds	Tens	Ones
<u>3</u>	<u>6</u>	<u>5</u>

958

Subtract 10	Subtract 100
<u>948</u>	<u>858</u>

About how long is a real school bus?

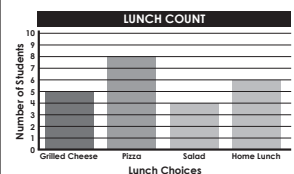


12 centimeters 12 meters

Gino had 89¢. He used one quarter to buy a gumball. How much money does Gino have left?

$89¢ - 25¢ = 64¢$

answer: 64 ¢





Which lunch choice has the most? Pizza

Which lunch choice has the least? Salad

Start a **FREE** trial today at

www.iknowit.com

Engage your elementary students with interactive math and ELA practice.



Thank you for being
a valued member of
Super Teacher Worksheets!

