




Super Teacher Summer Packet

Summer Buzz


Daily Math Practice
Week Two Packet



Grade

3

Name: _____



Summer Buzz

Draw a line that is 6 inches long and label the line A.

Draw a line that is 4 inches long and label the line B.

How much shorter is Line B than Line A?

answer: _____ inches

Add.

$$\begin{array}{r} 27 \\ 28 \\ 11 \\ + 24 \\ \hline \end{array}$$

Count back by 10s from 790 to 700.

_____, _____, _____, _____, _____,
_____, _____, _____, _____, _____

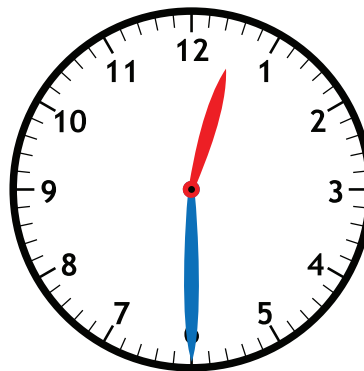
Subtract.

Find the difference between 27 and 8.

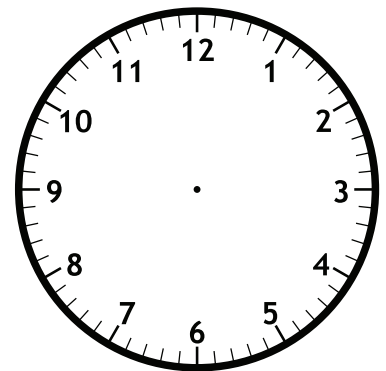
$$29 - 16 = \underline{\quad}$$

$$\begin{array}{r} 24 \\ - 8 \\ \hline \end{array}$$

Harlan began his hike at 12:30. He finished 4 hours later. Draw hands on the clock to show what time Harlan finished hiking.




Start



End

Name: _____



Summer Buzz

Choose the missing number.

$$25 \text{ tens} = \square$$

- a. 25 b. 250

Marshall had 80¢. He bought an eraser that costs 25¢. Draw coins to show how much change Marshall got back.

The Mehta family is taking a road trip. They drove 289 miles on Saturday, and 306 miles on Sunday. How many miles did they drive in all?

289	306
?	

answer: _____ miles


Shade in an array of 4 rows of 3 and complete the number sentence.

_____ + _____ + _____ + _____ = _____

Subtract.

	Hundreds	Tens	Ones
	5	0	0
-		6	2
<hr/>			

Name: _____



Summer Buzz

Order the numbers from **greatest to least** in standard form.

600 + 90

three hundred ninety-two

5 hundreds 6 tens 6 ones

Choose the missing number.

1 meter = centimeters

- a. 100 b. 10**

Aimee bought a pack of gum for 72¢. She paid with a \$1 bill. Draw coins to show how much change Aimee got back.

Fill in the missing number.

76 + = 84

The students in Mr. Liu's class want to graph their eye colors. Use the tally chart to complete the picture graph, then answer the questions.

Eye Color	Number of Students
Green	
Blue	
Brown	+++
Hazel	


Eye Color of Students	
Green	
Blue	
Brown	
Hazel	

Each  = 1 student

How many students graphed their eye colors in all? _____

How many more students have brown eyes than all the other eye colors combined? _____

Name: _____



Summer Buzz



Find the total value of the money shown.




answer: _____

There are 24 students in Mr. Garcia's class, 26 students in Ms. Weir's class, 25 students in Mrs. Hart's class and 24 students in Mr. Hornsby's class. How many students are in all four classes combined?

answer: _____ students

Shade in an array of 2 rows of 5 and complete the number sentence.



2 rows of 5

_____ + _____ = _____

Subtract.

	Hundreds	Tens	Ones
	8	0	0
-	3	5	6
<hr/>			


Choose the missing number.

28 tens =

a. 280

b. 28

Name: _____



Summer Buzz

Measure your pencil to the nearest inch and the nearest centimeter.

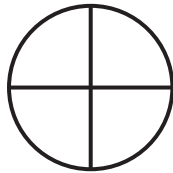
Length in inches: _____

Length in centimeters: _____


Last week the Royal Oak Recycling Center recycled 689 pounds of paper. This week, they recycled 871 pounds. How many more pounds of paper did they recycle this week?

871	
689	?


Shade 1 quarter.




Shade 2 quarters.



Shade 3 quarters.



Shade 4 quarters.



Circle the shape that shows 1 whole shaded.

answer: _____ pounds

Subtract.

Subtract 18 from 23.

$$\begin{array}{r} 24 \\ - 19 \\ \hline \end{array}$$

$$\text{_____} = 15 - 7$$

Mark 690 on the number line.



Circle the number 690 is closer to. **600** **700**

Summer Buzz ANSWERS



Daily Math Practice

C

Week 2

Draw a line that is 6 inches long and label the line A.

Line A

Draw a line that is 4 inches long and label the line B.

Line B

How much shorter is Line B than Line A?
answer: 2 inches

Add.

$$\begin{array}{r} 2 \\ 27 \\ 28 \\ 11 \\ + 24 \\ \hline 90 \end{array}$$

Count back by 10s from 790 to 700.

790 , 780 , 770 ,
760 , 750 , 740 ,
730 , 720 , 710 ,
700

Subtract.
Find the difference between 27 and 8. 19

$$29 - 16 = \underline{13}$$

$$\begin{array}{r} 114 \\ 24 \\ - 8 \\ \hline 16 \end{array}$$

Harlan began his hike at 12:30. He finished 4 hours later. Draw hands on the clock to show what time Harlan finished hiking.

Start

End

Choose the missing number.

25 tens =

a. 25 **b. 250**

The Mehta family is taking a road trip. They drove 289 miles on Saturday, and 306 miles on Sunday. How many miles did they drive in all?

$$\underline{289} + \underline{306} = \underline{595}$$

answer: 595 miles

Marshall had 80¢. He bought an eraser that costs 25¢. Draw coins to show how much change Marshall got back.

25¢ 25¢ 5¢

Answers may vary.

Subtract.

Hundreds	Tens	Ones
4	9	10
5	0	0
-		
4	3	8

Shade in an array of 4 rows of 3 and complete the number sentence.

■	■	■	■	■
■	■	■	■	■
■	■	■	■	■
■	■	■	■	■
■	■	■	■	■

3 + 3 + 3 + 3 = 12

Order the numbers from **greatest to least** in standard form.

600 + 90
three hundred ninety-two
5 hundreds 6 tens 6 ones

690 566 392

Choose the missing number.

1 meter = centimeters

a. 100 b. 10

Aimee bought a pack of gum for 72¢. She paid with a \$1 bill. Draw coins to show how much change Aimee got back.

25¢ 1¢ 1¢ 1¢

Answers may vary.

Fill in the missing number.

$$76 + \underline{8} = 84$$

$$84 - 76 = 8$$

Eye Color of Students	
Green	<input type="checkbox"/>
Blue	<input type="checkbox"/>
Brown	<input type="checkbox"/>
Hazel	<input type="checkbox"/>

How many students graphed their eye colors in all?
10 1+2+6+1=10

How many more students have brown eyes than all the other eye colors combined?
2 1+2+1=4
6-4=2

Find the total value of the money shown.

\$10.00 \$15.00 \$16.00

\$16.10 \$16.20 \$16.25 \$16.26 \$16.27

answer: \$16.27

There are 24 students in Mr. Garcia's class, 26 students in Ms. Weir's class, 25 students in Mrs. Hart's class and 24 students in Mr. Hornsby's class. How many students are in all four classes combined?

$$\underline{24} + \underline{26} + \underline{25} + \underline{24} = \underline{99}$$

answer: 99 students

Shade in an array of 2 rows of 5 and complete the number sentence.

■	■	■	■	■
■	■	■	■	■

2 rows of 5

$$\underline{5} + \underline{5} = \underline{10}$$

Subtract.

Hundreds	Tens	Ones
7	9	10
8	0	0
-		
4	4	4

Choose the missing number.

28 tens =

a. 28 **b. 280**

Measure your pencil to the nearest inch and the nearest centimeter.

Length in inches: ? in

Length in centimeters: ? cm

Answers will vary.

Last week the Royal Oak Recycling Center recycled 689 pounds of paper. This week, they recycled 871 pounds. How many more pounds of paper did they recycle this week?

$$\underline{871} - \underline{689} = \underline{182}$$

answer: 182 pounds

Subtract.
Subtract 18 from 23.

$$\underline{5}$$

$$\underline{8} = 15 - 7$$

$$\begin{array}{r} 114 \\ 24 \\ - 19 \\ \hline 5 \end{array}$$

Shade 1 quarter.

Shade 2 quarters.

Shade 3 quarters.

Shade 4 quarters.

Circle the shape that shows 1 whole shaded.

Mark 690 on the number line.



Circle the number 690 is closer to?

600 **700**

Start a **FREE** trial today at

www.iknowit.com

Engage your elementary students with interactive math and ELA practice.



Thank you for being
a valued member of
Super Teacher Worksheets!

