





Super Teacher Summer Packet

Summer Buzz

Daily Math Practice
Week Eight Packet



Name: _____




Summer Buzz

Count on by hundreds.

49, 149, _____, 349, _____, _____, 649, _____, _____, 949

Miss Lang's class had 24 students and 3 adults that went on the field trip to the farm. How many people went on the field trip in all?



answer: _____ people

Compare. Write $>$, $<$, $=$.

$10 + 5$ _____ fifty

4 tens 8 ones _____ 48

32 _____ 2 tens 8 ones


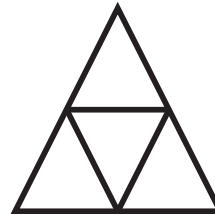



Solve.

$$\begin{array}{r} 11 \\ + 9 \\ \hline \end{array}$$


$$\begin{array}{r} 18 \\ - 8 \\ \hline \end{array}$$

$$\begin{array}{r} 10 \\ + 7 \\ \hline \end{array}$$

Write the number of equal parts.

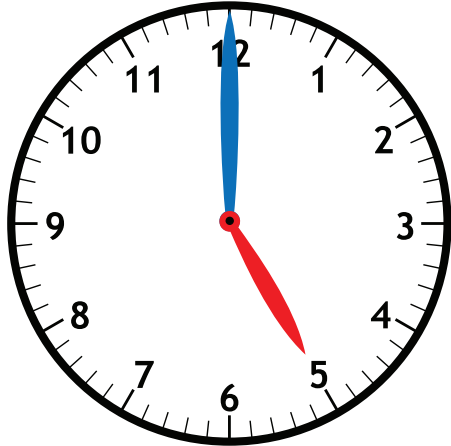


Name: _____



Summer Buzz

Circle **a.m.** or **p.m.**

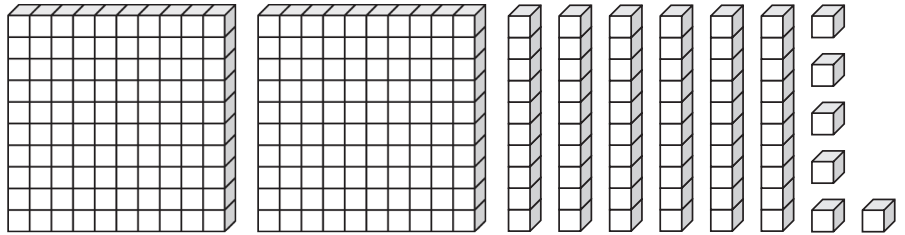


Nia eats dinner.

a.m.

p.m.

Write how many hundreds, tens, and ones.
Write the number.



Hundreds	Tens	Ones

answer: _____

Add.

	Tens	Ones
	7	3
+	2	5
<hr/>		

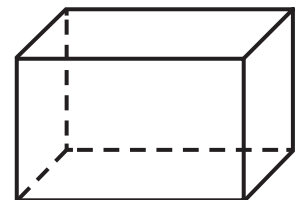
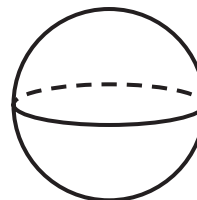

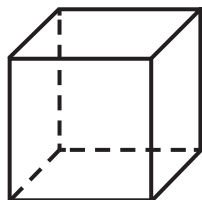
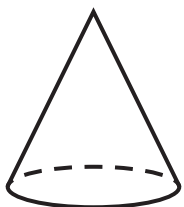
Zane is 13 years old. His brother is 5 years younger. How old is Zane's brother?

13	
5	?

_____ - _____ = _____

answer: _____ years old

Color the shapes that have only flat surfaces.



Name: _____

Summer Buzz



Use a centimeter ruler to measure.
How long is the pencil?




answer: _____ centimeters


Fill in the even numbers.

1		3		5		7		9	
11		13		15		17		19	

Write the total values.
Compare using $>$, $<$, or $=$.




Fill in the missing days.



Subtract.

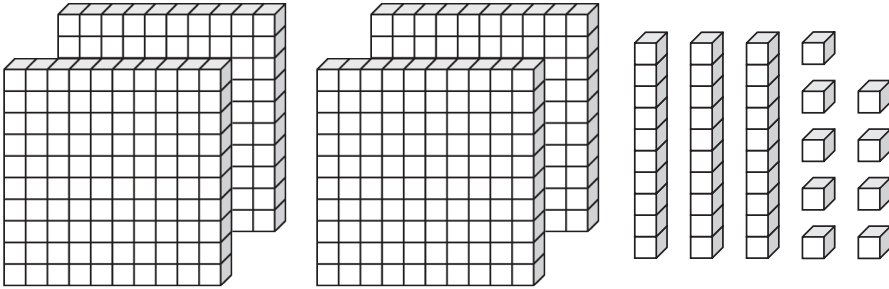
	Tens	Ones
	5	8
-		6
<hr/>		

Name: _____



Summer Buzz

Write how many hundreds, tens, and ones.
Write the number.



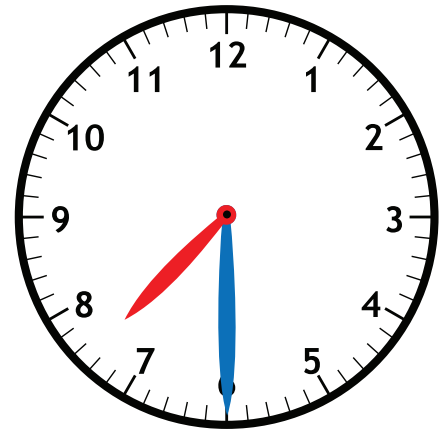
Hundreds	Tens	Ones

answer: _____

Add.

	Tens	Ones
	3	6
+	1	9
<hr/>		

Circle **a.m.** or **p.m.**



Theo eats breakfast
before school.

a.m.

p.m.

Match the words to the correct ordinal numbers.

fifth

1st

third

2nd

first

3rd

second

4th


fourth

5th

A wooden block has only flat surfaces. Name another object that has only flat surfaces.

answer: _____

Name: _____



Summer Buzz

October						
Sunday	Monday	Tuesday	Wednesday	Thursday	Friday	Saturday
				1	2	3
4	5	6	7	8	9	10
11	12	13	14	15	16	17
18	19	20	21	22	23	24
25	26	27	28	29	30	31

How many total days are in October? _____

What day is October 13th? _____

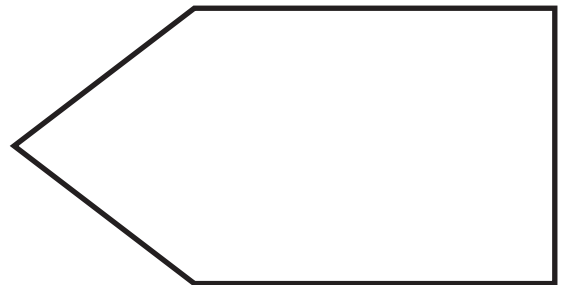
Add to continue the pattern.

$45 + 3 =$ _____ $345 + 3 =$ _____

$145 + 3 =$ _____ $445 + 3 =$ _____

$245 + 3 =$ _____ $545 + 3 =$ _____

Draw a line to divide the shape into two equal parts.



Skye has 10¢. Which group of coins has a total value of 10¢?

- a. 1 dime and 10 pennies
- b. 5 nickels
- c. 1 nickel and 5 pennies
- d. 2 dimes

Fill in the missing number.

$$\begin{array}{r} 7 \\ + 2 \\ \hline 9 \end{array}$$

$$\begin{array}{r} 2 \\ + \square \\ \hline 9 \end{array}$$

Summer Buzz ANSWERS



Daily Math Practice

B

Week 8

Count on by hundreds.

49, 149, **249**, 349,

449, **549**, 649,

749, **849**, 949

Miss Lang's class had 24 students and 3 adults that went on the field trip to the farm. How many people went on the field trip in all?

24 + 3 = 27

answer: **27** people

Compare. Write >, <, =.

10 + 5 **<** fifty

4 tens 8 ones **=** 48

32 **>** 2 tens 8 ones




Solve.




$$\begin{array}{r} 11 \\ + 9 \\ \hline 20 \end{array}$$

$$\begin{array}{r} 18 \\ - 8 \\ \hline 10 \end{array}$$

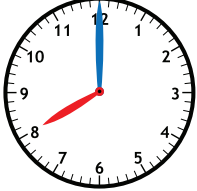
$$\begin{array}{r} 10 \\ + 7 \\ \hline 17 \end{array}$$

Write the number of equal parts.

 **4**  **2**  **4**

 **2**  **4**  **2**

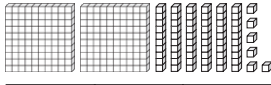
Circle a.m. or p.m.



Nia eats dinner.

a.m. **p.m.**

Write how many hundreds, tens, and ones. Write the number.



Hundreds	Tens	Ones
2	6	6

answer: **266**

Add.

	Tens	Ones
	7	3
+	2	5
	9	8

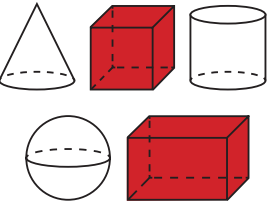
Zane is 13 years old. His brother is 5 years younger. How old is Zane's brother?

13	
5	?


13 - 5 = 8

answer: **8** years old

Color the shapes that have only flat surfaces.



Use a centimeter ruler to measure. How long is the pencil?



answer: **12** centimeters

Fill in the even numbers.


1	2	3	4	5	6	7	8	9	10
11	12	13	14	15	16	17	18	19	20

Fill in the missing days.

Today	Tomorrow
Monday	Tuesday

Answers may vary.

Write the total values. Compare using >, <, or =.

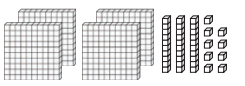


15¢ **<** **25¢**

Subtract.

	Tens	Ones
	5	8
-		6
	5	2

Write how many hundreds, tens, and ones. Write the number.



Hundreds	Tens	Ones
4	3	9

answer: **439**


Add.

	Tens	Ones
	1	6
+	1	9
	5	5

Match the words to the correct ordinal numbers.

fifth ~~1st~~
 third ~~2nd~~
 first ~~3rd~~
 second ~~4th~~
 fourth ~~5th~~

Circle a.m. or p.m.



Theo eats breakfast before school.

a.m. p.m.

A wooden block has only flat surfaces. Name another object that has only flat surfaces.

answer: **cereal box**

Answers may vary.

October						
Sunday	Monday	Tuesday	Wednesday	Thursday	Friday	Saturday
			1	2	3	
4	5	6	7	8	9	10
11	12	13	14	15	16	17
18	19	20	21	22	23	24
25	26	27	28	29	30	31

How many total days are in October? **31**

What day is October 13th?
Tuesday

Add to continue the pattern.

45 + 3 = 48

145 + 3 = 148

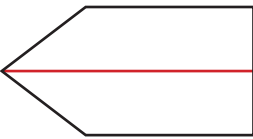
245 + 3 = 248

345 + 3 = 348

445 + 3 = 448

545 + 3 = 548

Draw a line to divide the shape into two equal parts.



Skye has 10¢. Which group of coins has a total value of 10¢?

a. 1 dime and 10 pennies
 b. 5 nickels
c. 1 nickel and 5 pennies
 d. 2 dimes

Fill in the missing number.



$$\begin{array}{r} 7 \\ + 2 \\ \hline 9 \end{array}$$

$$\begin{array}{r} 2 \\ + 7 \\ \hline 9 \end{array}$$

Start a **FREE** trial today at

www.iknowit.com

Engage your elementary students with interactive math and ELA practice.



Thank you for being
a valued member of
Super Teacher Worksheets!

