





Super Teacher Summer Packet

Summer Buzz

Daily Math Practice
Week Seven Packet



Name: _____



Summer Buzz

Count on by hundreds.

50, 150, _____, _____, _____, _____, _____, 750, _____, _____

Fill in the missing months.





Months of the Year
January
February
April
May
July
August
October
December

Zara, Wilson, and Angel were making a birthday book for their grandma. Zara colored 6 pages for the book, Wilson colored 4 pages, and Angel colored 5 pages. How many pages did they color in all?

Show your work

answer: _____ pages

Circle the shapes that have equal fourths.




Subtract.

$$\begin{array}{r} 26 \\ - 5 \\ \hline \end{array}$$

$$\begin{array}{r} 25 \\ - 7 \\ \hline \end{array}$$

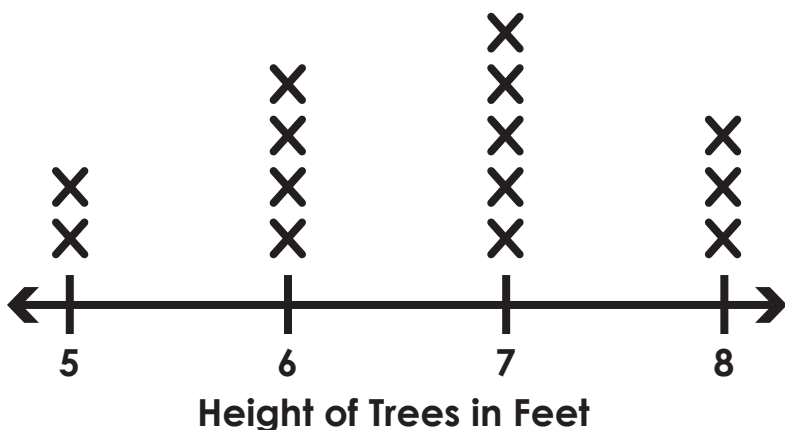
Name: _____



Summer Buzz

Use the line plot. How many trees are 6 feet tall?

key: X = 1 tree



- a. 3 b. 5 c. 4 d. 2

Fill in the missing numbers.

sixty-two

_____ tens _____ ones

_____ + _____

Complete the fact family.

17
+ , -
10 7


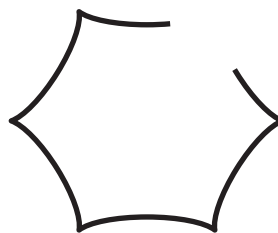


_____ + _____ = _____
_____ + _____ = _____
_____ - _____ = _____
_____ - _____ = _____

Karina had 2 quarters, 1 dime, and 4 pennies in her purse. How much does Karina have?


Show your work

answer: _____ ¢

Label each shape as open or closed.

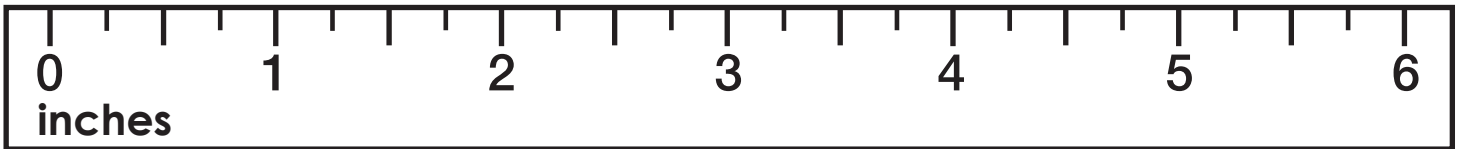


Name: _____



Summer Buzz

Use the ruler to measure. How long is the feather?




answer: _____ inches

Solve.

What is ten more than 75? _____

What is ten less than 69? _____

Draw lines to divide each shape into equal fourths.



Fill in the missing numbers.

$$7 + 5 + \underline{\quad} = 15$$

$$7 + \underline{\quad} + 3 = 15$$


Dominic has 24 apps on his tablet. Haley has 17 apps on her tablet. How many more apps does Dominic have?

17	?
24	

$$\underline{\quad} - \underline{\quad} = \underline{\quad}$$

answer: _____ apps

Name: _____



Summer Buzz

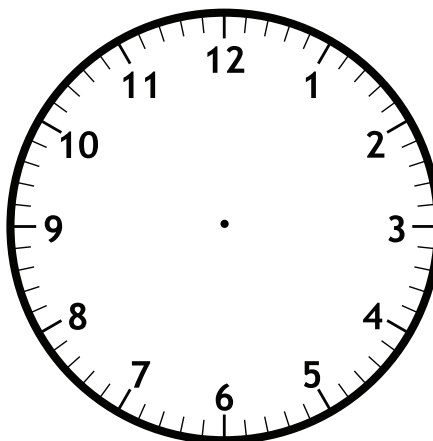
Fill in the missing numbers.

ninety-seven

_____ tens _____ ones

_____ + _____

Mr. Tully gets to school at half past 7 every morning. Fill in the clocks to show what time Mr. Tully arrives at school.



Subtract.

$$30 - 10 = \underline{\hspace{2cm}}$$

$$26 - 9 = \underline{\hspace{2cm}}$$

$$22 - 8 = \underline{\hspace{2cm}}$$

Fill in the missing numbers.


10	9

15	
6	

	4
12	

Draw 5 coins to show exactly 25¢.

Name: _____



Summer Buzz

Draw what shape comes next.



Add to continue the pattern.

$4 + 3 = \underline{\quad}$ $4 + 33 = \underline{\quad}$

$4 + 13 = \underline{\quad}$ $4 + 43 = \underline{\quad}$

$4 + 23 = \underline{\quad}$ $4 + 53 = \underline{\quad}$

Jade read 23 pages of her book before dinner. After dinner she read 9 more pages. How many pages did Jade read all together?

?	
23	9

_____ + _____ = _____

answer: _____ pages

Solve.

Subtract 7 from 27. _____

Find the difference between 21 and 6. _____

Complete the tally chart. Use the tally chart to answer the questions below.

Favorite Ice Cream		Total
Vanilla	+++ III	
Chocolate	+++ +++	
Strawberry	+++ I	

How many children chose chocolate? _____

How many children chose strawberry? _____

Summer Buzz ANSWERS



Daily Math Practice

B

Week 7

Count on by hundreds.

50, 150, 250, 350,
450, 550, 650,
750, 850, 950

Subtract.

$$\begin{array}{r} 26 \\ - 5 \\ \hline 21 \end{array}$$

$$\begin{array}{r} 115 \\ 25 \\ - 7 \\ \hline 18 \end{array}$$

Zara, Wilson, and Angel were making a birthday book for their grandma. Zara colored 6 pages for the book, Wilson colored 4 pages, and Angel colored 5 pages. How many pages did they color in all?

$6 + 4 + 5 = 15$
answer: 15 pages

Fill in the missing months.

Months of the Year
January
February
March
April
May
June
July
August
September
October
November
December

Circle the shapes that have equal fourths.

Use the line plot. How many trees are 6 feet tall?

key: X = 1 tree

a. 3 b. 5 **c. 4** d. 2

Fill in the missing numbers.

sixty - two

$$\begin{array}{r} 6 \text{ tens } 2 \text{ ones} \\ 60 + 2 \\ \hline 62 \end{array}$$

Karina had 2 quarters, 1 dime, and 4 pennies in her purse. How much does Karina have?

$25¢ + 25¢ + 10¢ + 1¢ + 1¢ + 1¢ + 1¢ = 64¢$
answer: 64 ¢

Complete the fact family.

Label each shape as open or closed.

closed open
 open closed

Use the ruler to measure. How long is the feather?

answer: 5 inches

Solve.

What is ten more than 75?
85

What is ten less than 69?
59

Fill in the missing numbers.

$7 + 5 + \underline{3} = 15$
 $7 + \underline{5} + 3 = 15$

Draw lines to divide each shape into equal fourths.

Answers may vary.

Dominic has 24 apps on his tablet. Haley has 17 apps on her tablet. How many more apps does Dominic have?

17	?
24	

$24 - 17 = 7$
answer: 7 apps

Fill in the missing numbers.

ninety - seven

$$\begin{array}{r} 9 \text{ tens } 7 \text{ ones} \\ 90 + 7 \\ \hline 97 \end{array}$$

Mr. Tully gets to school at half past 7 every morning. Fill in the clocks to show what time Mr. Tully arrives at school.

Subtract.

$30 - 10 = \underline{20}$
 $26 - 9 = \underline{17}$
 $22 - 8 = \underline{14}$

Draw 5 coins to show exactly 25¢.

Fill in the missing numbers.

19	
10	9

15	
6	9

8	4
12	

Draw what shape comes next.

△ △ ○ △ △ ○ △ △ ○

Add to continue the pattern.

$4 + 3 = \underline{7}$
 $4 + 13 = \underline{17}$
 $4 + 23 = \underline{27}$
 $4 + 33 = \underline{37}$
 $4 + 43 = \underline{47}$
 $4 + 53 = \underline{57}$

Solve.

Subtract 7 from 27. 20

Find the difference between 21 and 6. 15

Jade read 23 pages of her book before dinner. After dinner she read 9 more pages. How many pages did Jade read all together?

?	
23	9

$23 + 9 = 32$
answer: 32 pages

Complete the tally chart. Use the tally chart to answer the questions below.



How many children chose chocolate? 10

How many children chose strawberry? 6

Start a **FREE** trial today at

www.iknowit.com

Engage your elementary students with interactive math and ELA practice.



Thank you for being
a valued member of
Super Teacher Worksheets!

