




Super Teacher Summer Packet

Summer Buzz


Daily Math Practice
Week Five Packet



Grade

2

Name: _____



Summer Buzz

Complete the table.

Number of Triangles	1	2	3	4	5
Number of Sides	3	6			

Color the numbers that have a 1 in the tens place.

18	31	16
41	19	51
13	17	21

Solve.

Add 9 and 9. _____

Find the sum of 12 and 8. _____

Circle the number sentence that is true.


$$6 + 6 = 3 + 9$$

$$9 + 5 = 7 + 8$$

Count by ones.

34, 35, 36, _____, _____, _____, _____, _____, _____

Name: _____



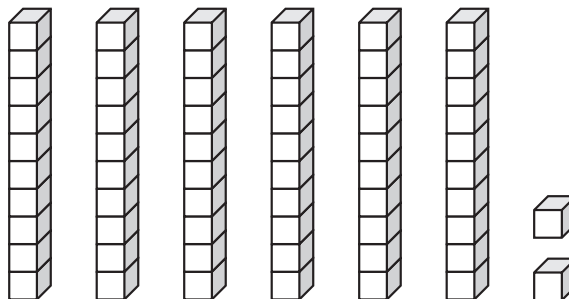
Summer Buzz

Add.

	Tens	Ones
	3	1
+		7
<hr/>		

Circle the value of the underlined digit.

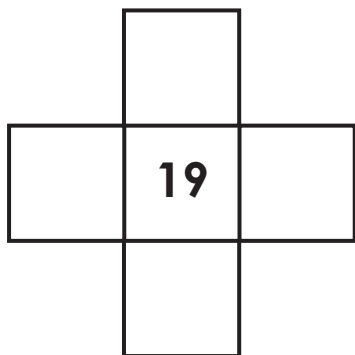
62



60

6

Write the numbers that are 1 more, 1 less, 10 more, and 10 less.




Find the total value of the coins.




answer: _____ ¢

Write the number of sides and corners for each shape.



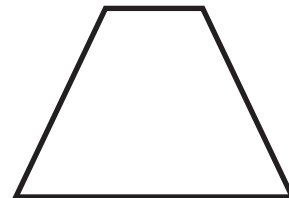
_____ sides

_____ corners



_____ sides


_____ corners



_____ sides


_____ corners

Name: _____



Summer Buzz

Estimate. About how many cubes long is the piece of chalk?



answer: _____ cubes

There were 24 children on the bus. 5 more got on at the next stop. How many children are on the bus now?

?	
24	5

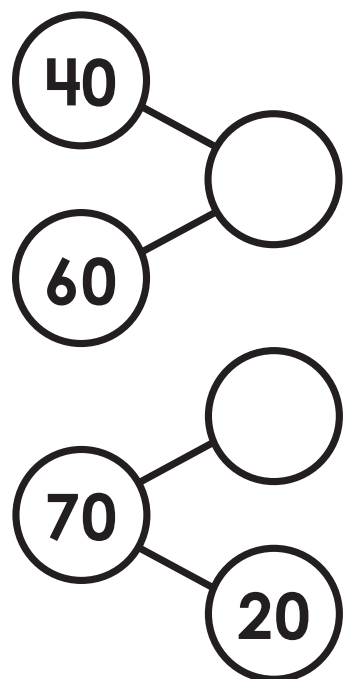
_____ + _____ = _____

answer: _____ children

Count back by ones.

56, 55, 54, _____, _____, _____, _____, _____, _____

Complete the number bonds.



Circle the word that makes the sentence true.



Pax



Zoe




Isla

Isla's plant is **taller** / **shorter** than Pax's plant.

Zoe's plant is the **tallest** / **shortest**.

Name: _____



Summer Buzz

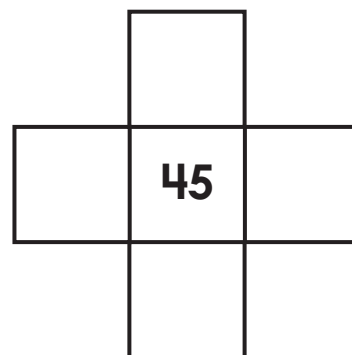
Mrs. Daly had 18 markers. She gave 6 markers to the first group. How many markers does she have now?

18	
6	?

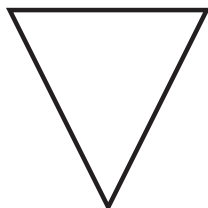
_____ - _____ = _____

answer: _____ markers

Write the numbers that are 1 more, 1 less, 10 more, and 10 less.

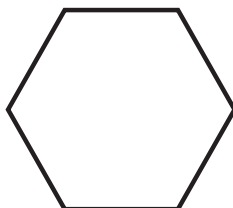


Write the number of sides and corners for each shape.



_____ sides

_____ corners



_____ sides

_____ corners

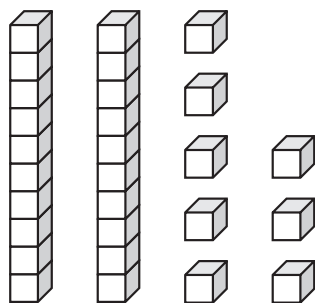


_____ sides

_____ corners

Circle the value of the underlined digit.

28
2




80

8

Add.

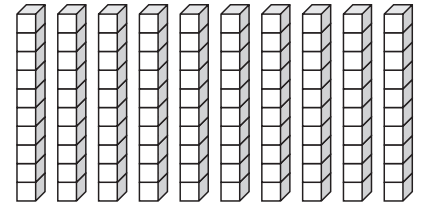
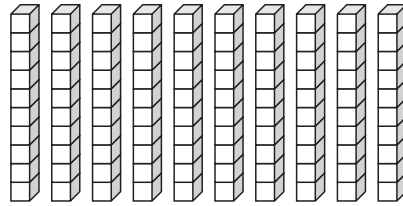
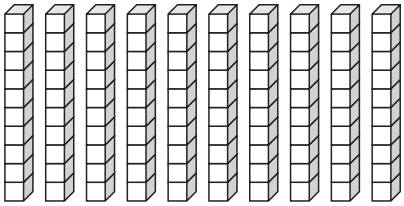
	Tens	Ones
	5	9
+		4
<hr/>		

Name: _____



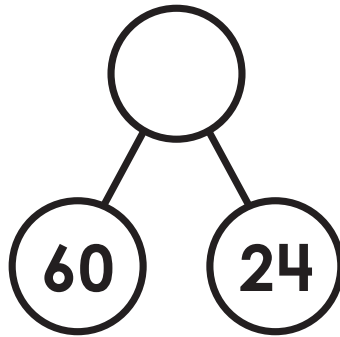
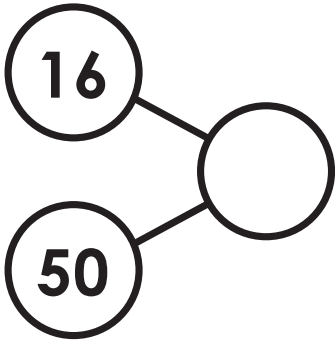
Summer Buzz

Circle groups of 10.



_____ tens = _____ hundreds

Complete the number bonds.



Match the numbers that have the same value.

9 tens 7 ones

78 ones

7 tens 8 ones

89 ones

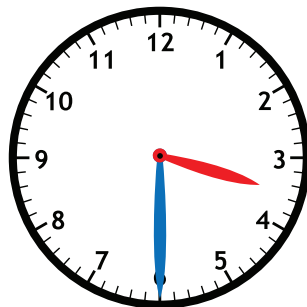
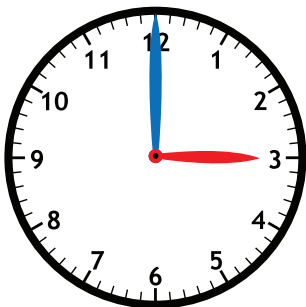
8 tens 9 ones

97 ones

Fill in the times Levi started each activity.


had a snack

played outside



What did Levi do at 3:00? _____

Draw a line to divide each shape into 2 equal parts.



Summer Buzz ANSWERS



Daily Math Practice

B

Week 5

Complete the table.

Number of Triangles	1	2	3	4	5
Number of Sides	3	6	9	12	15

Color the numbers that have a 1 in the tens place.

18	31	16
41	19	51
13	17	21

Solve.

Add 9 and 9. 18

Find the sum of 12 and 8. 20

Circle the number sentence that is true.

$6 + 6 = 3 + 9$

$9 + 5 = 7 + 8$

Count by ones.

34, 35, 36, 37, 38,

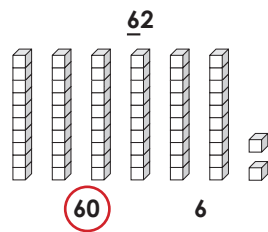
39, 40, 41,

42, 43

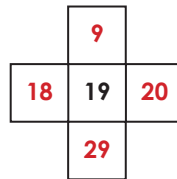
Add.

	Tens	Ones
	3	1
+		7
	<u>3</u>	<u>8</u>

Circle the value of the underlined digit.



Write the numbers that are 1 more, 1 less, 10 more, and 10 less.

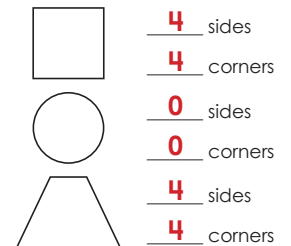


Find the total value of the coins.

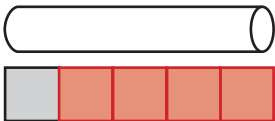


answer: 46 ¢

Write the number of sides and corners for each shape.



Estimate. About how many cubes long is the piece of chalk?



answer: 5 cubes

There were 24 children on the bus. 5 more got on at the next stop. How many children are on the bus now?

?	
24	5
<u>24 + 5 = 29</u>	

answer: 29 children

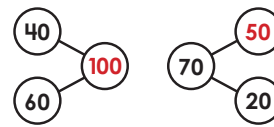
Count back by ones.

56, 55, 54, 53, 52,

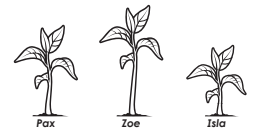
51, 50, 49,

48, 47

Complete the number bonds.



Circle the word that makes the sentence true.



Isla's plant is taller / shorter than Pax's plant.

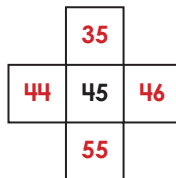
Zoe's plant is the tallest / shortest.

Mrs. Daly had 18 markers. She gave 6 markers to the first group. How many markers does she have now?

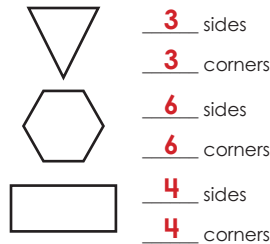
18	
6	?
<u>18 - 6 = 12</u>	

answer: 12 markers

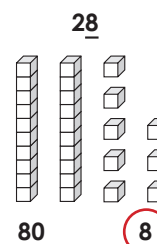
Write the numbers that are 1 more, 1 less, 10 more, and 10 less.



Write the number of sides and corners for each shape.



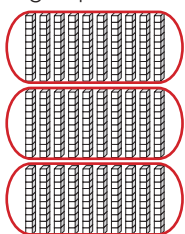
Circle the value of the underlined digit.



Add.


	Tens	Ones
	1	9
+		4
	<u>6</u>	<u>3</u>

Circle groups of 10.



30 tens = 3 hundreds

Complete the number bonds.



Match the numbers that have the same value.

9 tens 7 ones ~~78 ones~~

7 tens 8 ones ~~89 ones~~

8 tens 9 ones ~~97 ones~~

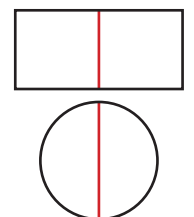
Fill in the times Levi started each activity.



What did Levi do at 3:00?

had a snack

Draw a line to divide each shape into 2 equal parts.





Answers may vary.

Start a **FREE** trial today at

www.iknowit.com

Engage your elementary students with interactive math and ELA practice.



Thank you for being
a valued member of
Super Teacher Worksheets!

