




Super Teacher Summer Packet


Summer Buzz

Daily Math Practice
Week Three Packet



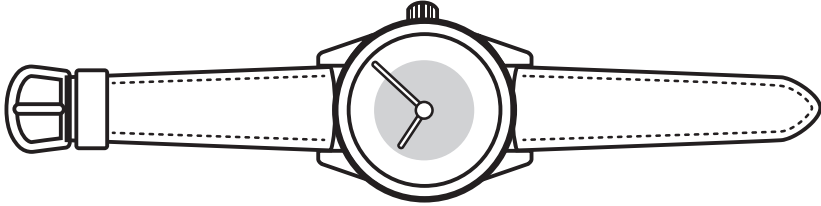
Grade
2

Name: _____



Summer Buzz

How many squares long is the watch?



answer: _____ squares



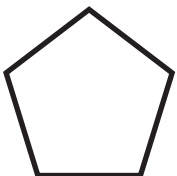
The team scored 7 goals in the first half and 6 goals in the second half. How many goals did the team score in all?

?	
7	6

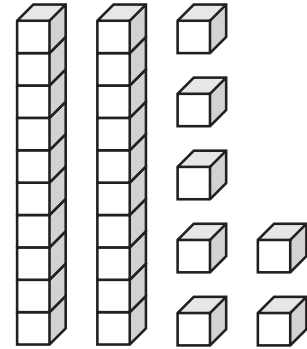
_____ + _____ = _____

answer: _____ goals

Color the shapes with 4 sides.



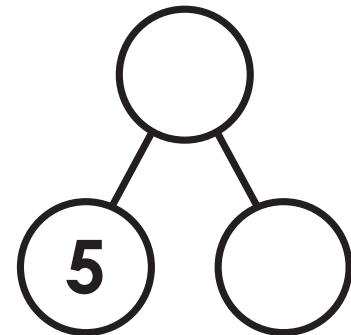
Write how many tens and ones. Write the number.




Tens	Ones

answer: _____

Make a group of 5. Then, complete the number bond.

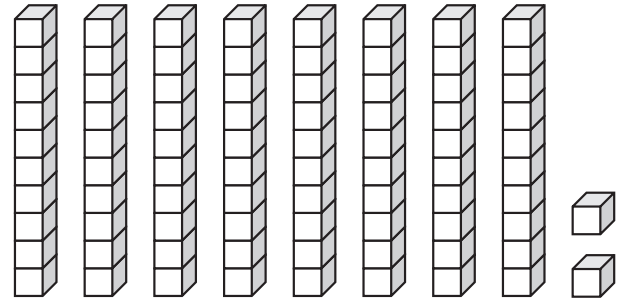

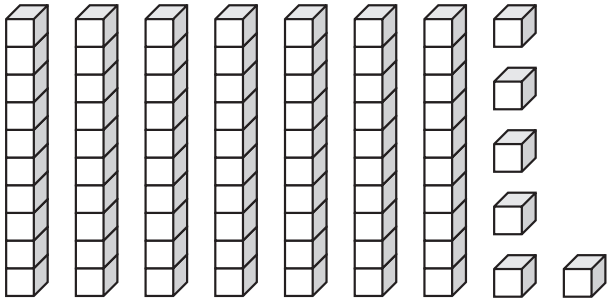


Name: _____



Summer Buzz

Compare. Write $>$, $<$, $=$.



Complete the table.

Number of Bicycles	1	2	3	4	5
Number of Wheels	2	4			

Match each coin to its name and value.

penny

nickel

dime

quarter



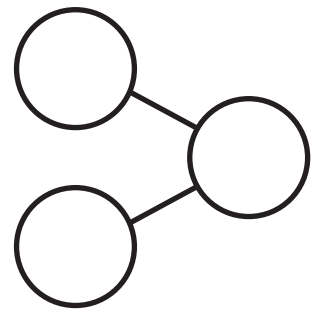

25¢

1¢

5¢

10¢


Fill in the number bond to match the domino.



Count by ones.

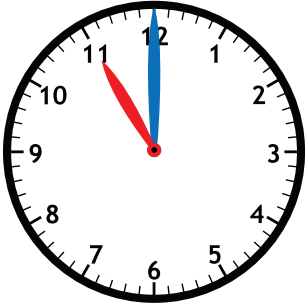
21		23		25		27		29	
	32		34		36		38		40
41		43		45		47		49	

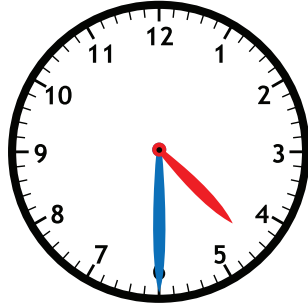
Name: _____

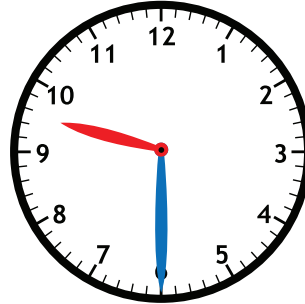


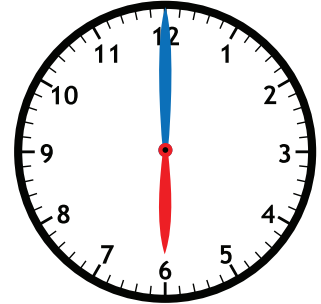
Summer Buzz

Fill in the time shown.









Add.


$$\begin{array}{r} 8 \\ + 2 \\ \hline \end{array} \quad \begin{array}{r} 4 \\ + 4 \\ \hline \end{array} \quad \begin{array}{r} 3 \\ + 6 \\ \hline \end{array}$$

Find the total value of Vivi's coins.



answer: _____ ¢

Count the objects and fill in the chart.



Tens	Ones


answer: _____

How many tiles long is the crayon?



answer: _____ tiles

Name: _____



Summer Buzz

Compare. Circle the words that make the number sentence true.

is greater than

54 is less than **45**

is equal to

Enzo's new pencil is 16 centimeters long. His old pencil is 8 centimeters long. How much longer is Enzo's new pencil?

Show your work

answer: _____ centimeters

Match the coins that have the same value.



Count by ones.

	72		74		76		78		80
81		83		85		87		89	
	92		94		96		98		100


Add.

$$4 + 5 = \underline{\quad}$$

$$3 + 7 = \underline{\quad}$$

$$1 + 6 = \underline{\quad}$$

Name: _____



Summer Buzz

Use the picture graph to answer the questions below.

Lunch Count	
Hot Lunch	
PB & J	
Home Lunch	



Each = 1 student

Which lunch was chosen by 6 students? _____

Which lunch choice had the most students? _____

How many students ate lunch in all? _____

Circle the shapes that have two equal parts.



Add.

$$\begin{array}{r} 3 \\ + 4 \\ \hline \end{array}$$


$$\begin{array}{r} 2 \\ + 6 \\ \hline \end{array}$$

$$\begin{array}{r} 9 \\ + 0 \\ \hline \end{array}$$


Circle **two** different ways to write the number **36**.

- a. thirty - six
- b. 36 tens
- c. 3 tens 6 ones
- d. 3 + 6

Circle the object that is taller.



Summer Buzz ANSWERS

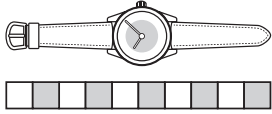


Daily Math Practice

B

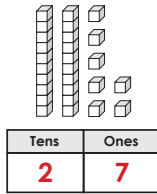
Week 3

How many squares long is the watch?



answer: 10 squares

Write how many tens and ones. Write the number.



answer: 27

The team scored 7 goals in the first half and 6 goals in the second half. How many goals did the team score in all?

?	
7	6
<u>7 + 6 = 13</u>	

answer: 13 goals

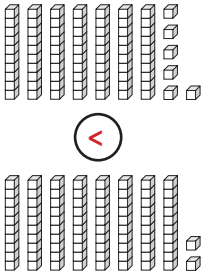
Color the shapes with 4 sides.



Make a group of 5. Then, complete the number bond.



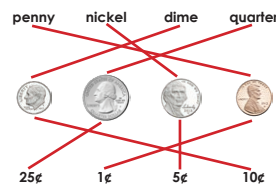
Compare. Write >, <, =.



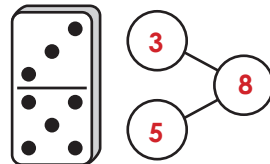
Complete the table.

Number of Bicycles	1	2	3	4	5
Number of Wheels	2	4	6	8	10

Match each coin to its name and value.



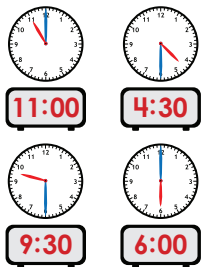
Fill in the number bond to match the domino.



Count by ones.

21	22	23	24	25	26	27	28	29	30
31	32	33	34	35	36	37	38	39	40
41	42	43	44	45	46	47	48	49	50

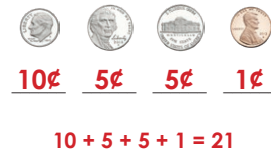
Fill in the time shown.



Add.

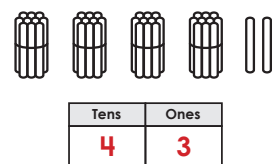
$$\begin{array}{r} 8 \\ + 2 \\ \hline 10 \end{array} \quad \begin{array}{r} 4 \\ + 4 \\ \hline 8 \end{array} \quad \begin{array}{r} 3 \\ + 6 \\ \hline 9 \end{array}$$

Find the total value of Vivi's coins.



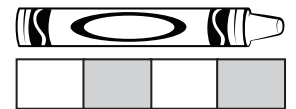
answer: 21 ¢

Count the objects and fill in the chart.



answer: 43

How many tiles long is the crayon?



answer: 4 tiles

Compare. Circle the words that make the number sentence true.

is greater than

54 is less than 45

is equal to

Enzo's new pencil is 16 centimeters long. His old pencil is 8 centimeters long. How much longer is Enzo's new pencil?

Show your work

$$16 - 8 = 8$$

answer: 8 centimeters

Match the coins that have the same value.



Count by ones.

71	72	73	74	75	76	77	78	79	80
81	82	83	84	85	86	87	88	89	90
91	92	93	94	95	96	97	98	99	100

Add.

$$4 + 5 = \underline{9}$$

$$3 + 7 = \underline{10}$$

$$1 + 6 = \underline{7}$$

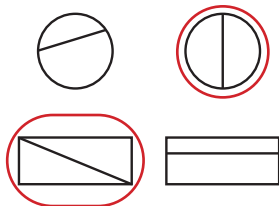
Lunch Count	
Hot Lunch	☺ ☺ ☺ ☺ ☺ ☺ ☺
PB & J	☺ ☺ ☺ ☺ ☺ ☺
Home Lunch	☺ ☺ ☺ ☺ ☺ ☺

Which lunch was chosen by 6 students? Home Lunch

Which lunch choice had the most students?
Hot Lunch

How many students ate lunch in all? 18

Circle the shapes that have two equal parts.



Add.

$$\begin{array}{r} 3 \\ + 4 \\ \hline 7 \end{array} \quad \begin{array}{r} 2 \\ + 6 \\ \hline 8 \end{array} \quad \begin{array}{r} 9 \\ + 0 \\ \hline 9 \end{array}$$

Circle two different ways to write the number 36.


a. thirty - six

b. 36 tens

c. 3 tens 6 ones

d. 3 + 6



Circle the object that is taller.



Start a **FREE** trial today at

www.iknowit.com

Engage your elementary students with interactive math and ELA practice.



Thank you for being
a valued member of
Super Teacher Worksheets!

