




# Super Teacher Summer Packet

Summer Buzz


Daily Math Practice  
Week Two Packet



Grade

2

Name: \_\_\_\_\_



## Summer Buzz


Solve each side and compare using  $<$ ,  $>$ , or  $=$ .

$$7 + 7 \bigcirc 5 + 9$$

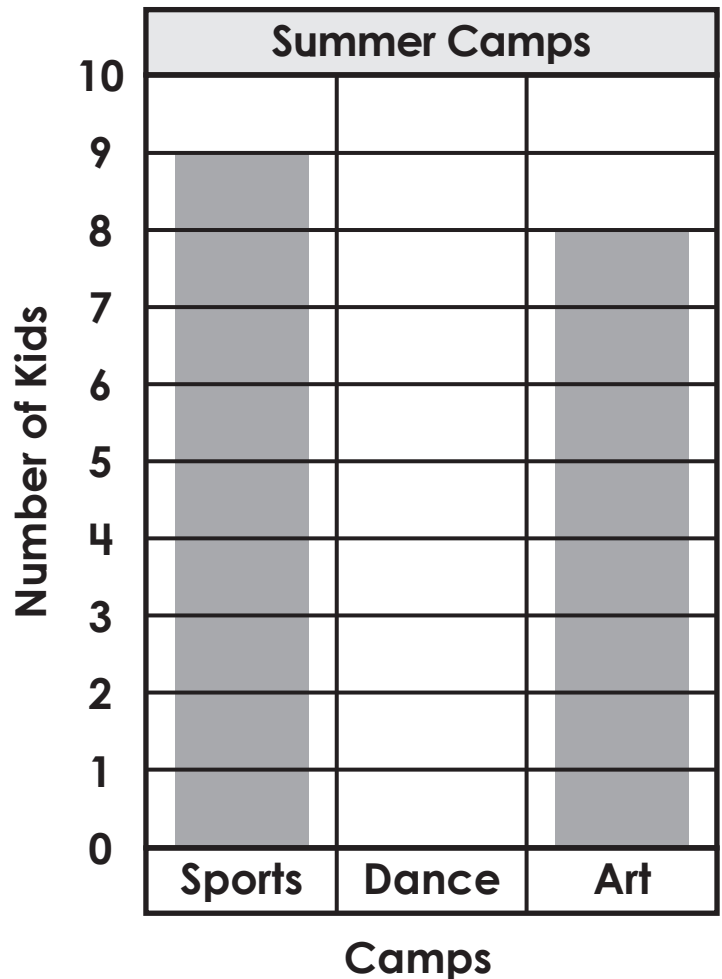
Subtract.

$$\begin{array}{r} 68 \\ - 7 \\ \hline \end{array}$$

Draw **pennies** to show how much the baseball costs.




The graph below shows which summer camps kids signed up to attend.



There were 4 fewer kids who attended dance camp than sports camp. Complete the graph to show how many kids attended dance camp.


How many kids went to summer camps in all? \_\_\_\_\_

Name: \_\_\_\_\_




## Summer Buzz

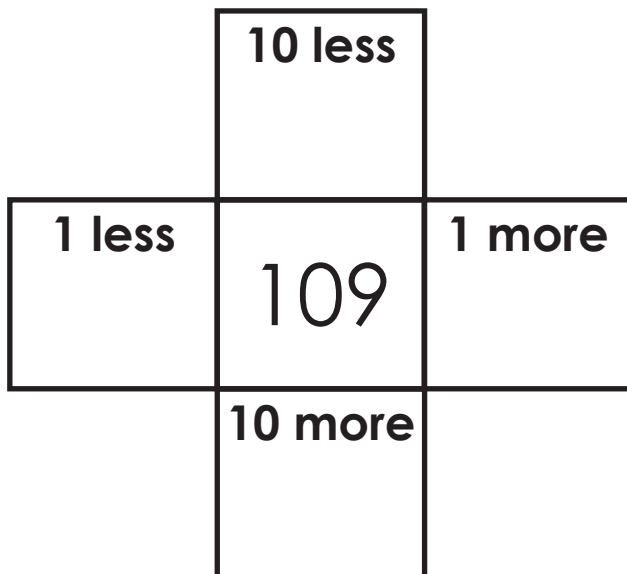
Draw a line to make equal halves. Color one half.



Draw lines to make equal fourths. Color one fourth.



Fill in the missing numbers.



Add.

$$\begin{array}{r} 71 \\ + 8 \\ \hline \end{array}$$

Draw 9 triangles.  
Circle groups of two.


Are there any left over?

\_\_\_\_\_

Is 9 even or odd?

\_\_\_\_\_

Name: \_\_\_\_\_



## Summer Buzz

Draw **nickels** to show how much the teddy bear costs.




Solve each side and compare the using  $<$ ,  $>$ , and  $=$ .

$$16 - 5 \bigcirc 13 - 7$$

Subtract.


$$86 - 3 = \underline{\quad}$$

There are 23 students in Mrs. Vasko's class. 6 students from next door came over for reading groups. How many students are there now?



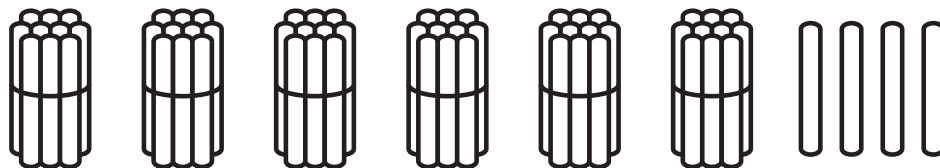
answer: \_\_\_\_\_ **students**

Name: \_\_\_\_\_



# Summer Buzz

Count the sticks and fill in the missing numbers.



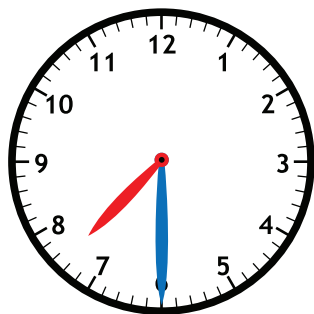
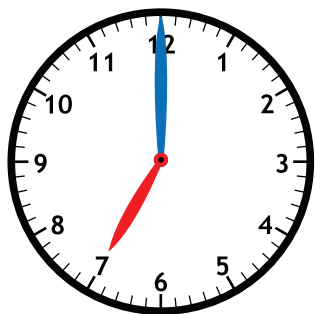
1 more is \_\_\_\_\_.

10 more is \_\_\_\_\_.

1 less is \_\_\_\_\_.

10 less is \_\_\_\_\_.

Fill in the times shown on the clocks.



Add.

$$90 + 5 = \underline{\hspace{2cm}}$$

Draw 6 squares.  
Circle groups of two.


Are there any left over?

\_\_\_\_\_

Is 6 even or odd?

\_\_\_\_\_

Name: \_\_\_\_\_

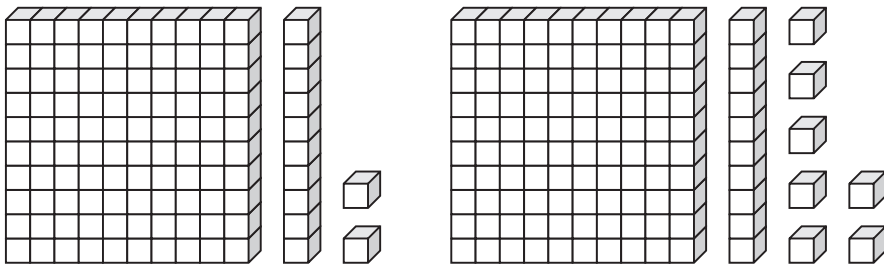


# Summer Buzz

Solve.

Find the difference between 54 and 1. \_\_\_\_\_


Compare.



\_\_\_\_\_ is less than \_\_\_\_\_

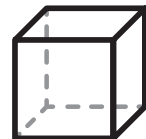
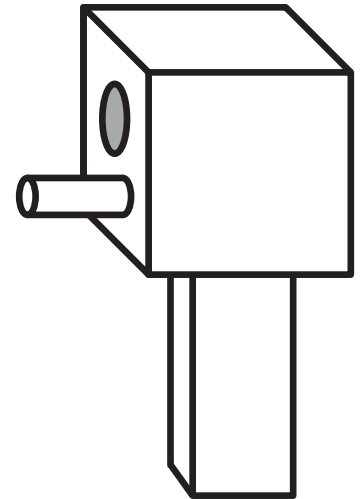
\_\_\_\_\_ < \_\_\_\_\_

Draw **dimes** to show how much the doll costs.



40¢

Circle the shapes used to make the birdhouse.



# Summer Buzz ANSWERS



Daily Math Practice

**B**

Week 2

Solve each side and compare using  $<$ ,  $>$ , or  $=$ .

$$7 + 7 = 5 + 9$$

**14                      14**

Subtract.

$$\begin{array}{r} 68 \\ - 7 \\ \hline 61 \end{array}$$

Draw pennies to show how much the baseball costs.

P
P
P
P
P
P
P

**1¢ 2¢ 3¢ 4¢ 5¢ 6¢ 7¢**

| Camps  | Number of Kids |
|--------|----------------|
| Sports | 9              |
| Dance  | 5              |
| Art    | 8              |

How many kids went to summer camps in all? **22**

Draw a line to make equal halves. Color one half.

Draw lines to make equal fourths. Color one fourth.

**Answers may vary.**

Add.

$$\begin{array}{r} 71 \\ + 8 \\ \hline 79 \end{array}$$

Fill in the missing numbers.

|            |            |            |
|------------|------------|------------|
|            | 10 less    |            |
|            | <b>99</b>  |            |
| 1 less     | 109        | 1 more     |
| <b>108</b> |            | <b>110</b> |
|            | 10 more    |            |
|            | <b>119</b> |            |

Draw 9 triangles. Circle groups of two.

Are there any left over? **yes**

Is 9 even or odd? **odd**

**Answers may vary.**

Draw nickels to show how much the teddy bear costs.

N
N
N
N
N

**5¢ 10¢ 15¢ 20¢ 25¢**

Solve each side and compare the using  $<$ ,  $>$ , and  $=$ .

$$16 - 5 > 13 - 7$$

**11                      6**

Subtract.

$$86 - 3 = 83$$

There are 23 students in Mrs. Vasko's class. 6 students from next door came over for reading groups. How many students are there now?

**23 + 6 = 29**

answer: **29** students

Count the sticks and fill in the missing numbers.

1 more is **65**.

1 less is **63**.

10 more is **74**.

10 less is **54**.

Fill in the times shown on the clocks.

**7:00                      7:30**

Add.

$$90 + 5 = 95$$

Draw 6 squares. Circle groups of two.

Are there any left over? **no**

Is 6 even or odd? **even**

**Answers may vary.**

Solve.

Find the difference between 54 and 1. **53**

$$54 - 1 = 53$$

Circle the shapes used to make the birdhouse.

Compare.

**112** is less than **117**

$$112 < 117$$

Draw dimes to show how much the doll costs.



D
D
D
D

**10¢ 20¢ 30¢ 40¢**

Start a **FREE** trial today at

[www.iknowit.com](http://www.iknowit.com)

Engage your elementary students with interactive math and ELA practice.



Thank you for being  
a valued member of  
**Super Teacher Worksheets!**

