

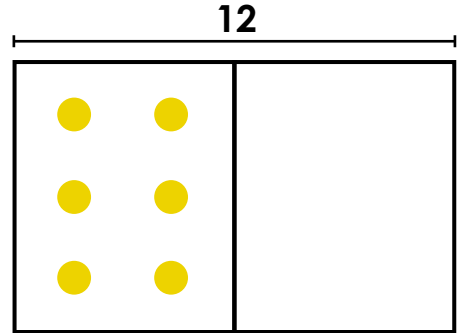
Name: \_\_\_\_\_

# Subtraction

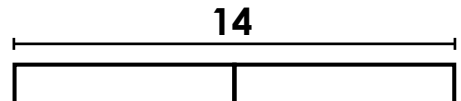
Complete the picture models to help find the answer to the subtraction questions.  
Write a subtraction fact for each.

- a. Aiden has 12 ping pong balls.  
Some are yellow and some are white.  
If 6 are yellow, how many are white?

$$\underline{\quad} - \underline{\quad} = \underline{\quad}$$



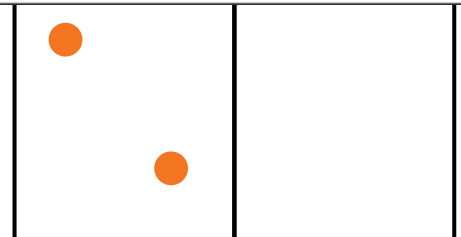
- b. Cora has 14 sea shells.



**Preview**  
Please log in to download  
the printable version of this worksheet.

- Some are orange and some are black.  
If 2 are orange, how many are black?

$$\underline{\quad} - \underline{\quad} = \underline{\quad}$$



- d. Mike has 20 cubes.  
Some are red and some are blue.  
If 10 are red, how many are blue?

$$\underline{\quad} - \underline{\quad} = \underline{\quad}$$

