

Name: _____

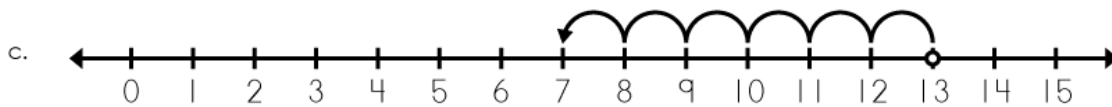
Number Line Addition & Subtraction



$$\underline{9 - 7 = 2}$$

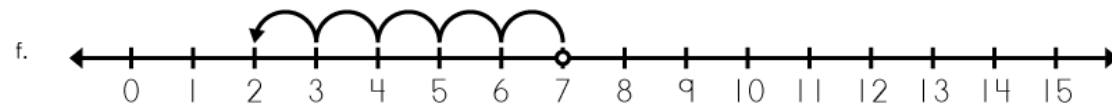


$$\underline{6 + 8 = 14}$$











ANSWER KEY

Number Line Addition & Subtraction



$$\underline{9 - 7 = 2}$$



$$\underline{6 + 8 = 14}$$



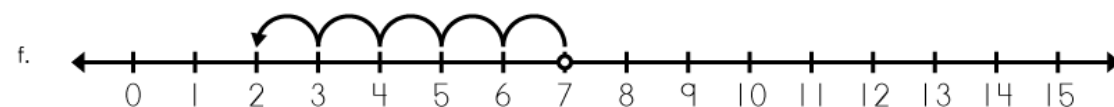
$$\underline{13 - 6 = 7}$$



$$\underline{3 + 5 = 8}$$



$$\underline{4 + 9 = 13}$$



$$\underline{7 - 5 = 2}$$



$$\underline{4 + 7 = 11}$$