



Name: _____

Name the Science Lab Tools

magnifying glass	thermometer	graduated cylinder	ruler
hot plate	stopwatch	microscope	balance

Fill in the correct tool for each picture below.


















ANSWER KEY


Name the Science Lab Tools

magnifying glass	thermometer	graduated cylinder	ruler
hot plate	stopwatch	microscope	balance

Fill in the correct tool for each picture below.



ruler



**hot
plate**



thermometer




microscope



stopwatch



**magnifying
glass**



balance



**graduated
cylinder**