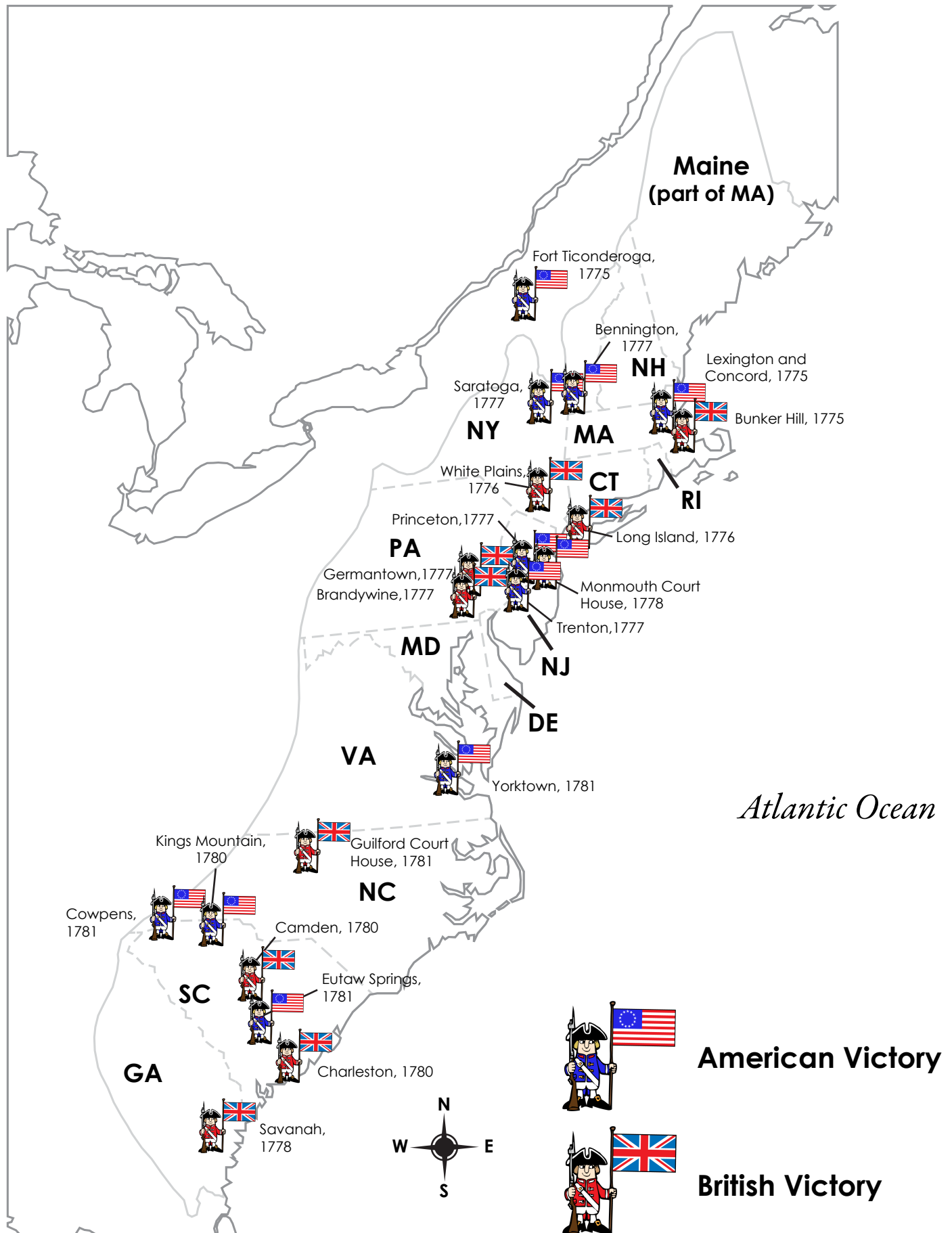



# Battles of the American Revolution



Name: \_\_\_\_\_



# Battles of the American Revolution

Use the map to answer the questions.

1. Who won the Battle of Bunker Hill? \_\_\_\_\_

2. In what year was the Battle of Charleston? \_\_\_\_\_

3. Where was the northernmost battle of shown on the map? \_\_\_\_\_

4. Where was the southernmost battle of shown on the map? \_\_\_\_\_

5. Which battle was fought further inland from the Atlantic Ocean: Trenton or Cowpens? \_\_\_\_\_

6. How many American victories took place in South Carolina? \_\_\_\_\_

7. Which happened first: the Battle of Saratoga or the Battle of White Plains? \_\_\_\_\_

8. Which five states did not have a battle during the American Revolutionary War?

\_\_\_\_\_ , \_\_\_\_\_ , \_\_\_\_\_ ,

\_\_\_\_\_ , and \_\_\_\_\_ .


9. Which three states each had only one battle during the American Revolutionary War?

\_\_\_\_\_ , \_\_\_\_\_ , and

\_\_\_\_\_ .

10. The last battle of the American Revolution was fought in Virginia. Where was this battle? \_\_\_\_\_

# ANSWER KEY



## Battles of the American Revolution

Use the map to answer the questions.

1. Who won the Battle of Bunker Hill?

**the British**

2. In what year was the Battle of Charleston?

**1780**

3. Where was the northernmost battle of shown on the map?

**Fort Ticonderoga**

4. Where was the southernmost battle of shown on the map?

**Savannah**

5. Which battle was fought further inland from the Atlantic Ocean: Trenton or Cowpens?

**Cowpens**

6. How many American victories took place in South Carolina?

**three**

7. Which happened first: the Battle of Saratoga or the Battle of White Plains?

**White Plains**

8. Which four states did not have a battle during the American Revolutionary War?

**New Hampshire** , **Connecticut** , **Delaware** ,

**Rhode Island** , and **Maryland** .

9. Which three states each had only one battle during the American Revolutionary War?

**Virginia** , **North Carolina** , and

**Georgia** .

10. The last battle of the American Revolution was fought in Virginia. Where was this battle?

**Yorktown**