































Name: _____

The Pumpkin Carving Contest

Monica, Wayne, Kiersten, and Derrick were in a pumpkin carving contest. There was a prize for the person who carved the most pumpkins.

Number of Pumpkins Carved

Monica										
Wayne										
Kiersten										
Derrick										



~ PREVIEW ~

Please log in or register to download the printable version of this worksheet.





























- How many more pumpkins did Derrick carve than Kierstan? 5. _____
- How many pumpkins did Monica and Wayne carve in all? 6. _____
- Which person carved the greatest number of pumpkins? 7. _____
- Which person carved the least number of pumpkins? 8. _____
- If Kiersten carved 4 more pumpkins, how many pumpkins would she have carved in all? 9. _____
- If Monica had carved 6 fewer pumpkins, how many would she have carved? 10. _____
- How many more pumpkins did Wayne carve than Monica? 11. _____
- How many pumpkins did the 4 contestants carve altogether? 12. _____

ANSWER KEY

The Pumpkin Carving Contest

Monica, Wayne, Kiersten, and Derrick were in a pumpkin carving contest. There was a prize for the person who carved the most pumpkins.

Number of Pumpkins Carved

Monica									
Wayne									
Kiersten									
									



~ PREVIEW ~

Please log in or register to download the printable version of this worksheet.