






Name: _____

Fishing Trip Pictograph

Michael, Emily, Jose, Jennifer, and Kevin went on a fishing trip. The pictograph below shows how many fish each caught. Use the pictograph to answer the questions.

Number of Fish Caught

| | |
|----------|--|
| Michael |  |
| Emily |  |
| Jose |  |
| Jennifer |  |
| Kevin |  |



~ PREVIEW ~

Please log in or register to download the printable version of this worksheet.





- How many more fish did Emily catch than Jose? _____
- How many fish did the girls catch? _____
- How many fish did boys catch? _____
- How many more fish did the girls catch than the boys? _____
- How many fish did Jose and Kevin catch? _____
- Find the sum of the fish caught by all five people? _____
- Who caught fewer fish, Jennifer or Emily? _____
- Did Jennifer catch an odd or even number of fish? _____
- Jose said, "I caught a dozen fish!" Is he correct? Explain. _____

ANSWER KEY

Fishing Trip Pictograph

Michael, Emily, Jose, Jennifer, and Kevin went on a fishing trip. The pictograph below shows how many fish each caught. Use the pictograph to answer the questions.

Number of Fish Caught

| | |
|----------|--|
| Michael |  |
| Emily |  |
| Jose |  |
| Jennifer |  |



~ PREVIEW ~

Please log in or register to download the printable version of this worksheet.