


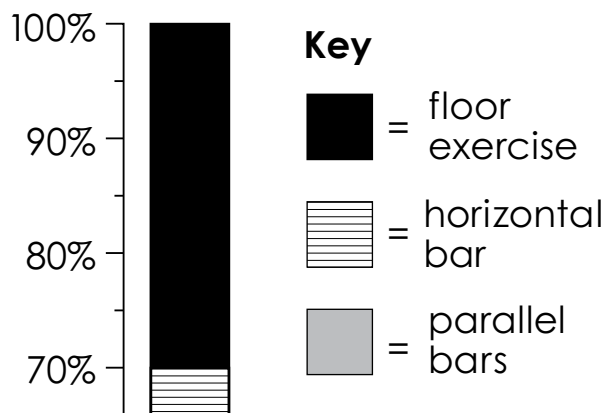
Name: \_\_\_\_\_



# Stacked Percent Bar Graph

A reporter polls 180 attendees at a men's gymnastics meet to determine the most popular events.

## Favorite Men's Gymnastics Event



1. Which event was least popular? \_\_\_\_\_

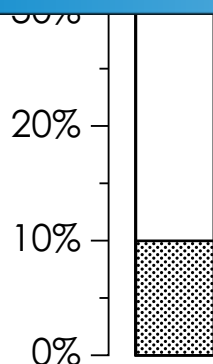
2. Which two events were equally popular? \_\_\_\_\_

Combined, they account for what total percent of the poll? \_\_\_\_\_



# Preview

Please log in to download the printable version of this worksheet.



4. Which event is the mode? \_\_\_\_\_

What percent is it? \_\_\_\_\_

How many people does that represent? \_\_\_\_\_


*Show your work.*

Circle *T* (true) or *F* (false) for each statement.

5. Vault and pommel horse together are less popular than rings. T      F

6. 135 people like floor exercise, horizontal bar, or rings best. T      F

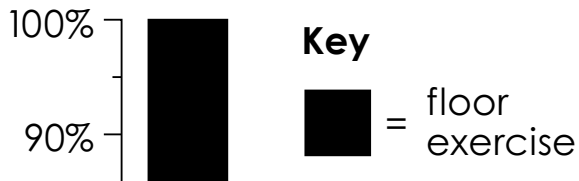
# ANSWER KEY



## Stacked Percent Bar Graph

A reporter polls 180 attendees at a men's gymnastics meet to determine the most popular events.

### Favorite Men's Gymnastics Event



1. Which event was least popular?

**pommel horse**

2. Which two events were equally popular?

**vault**

# Preview

Please log in to download  
the printable version of this worksheet.



6. 135 people like floor exercise, horizontal bar, or rings best.

**T**

**F**