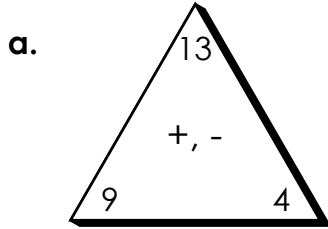


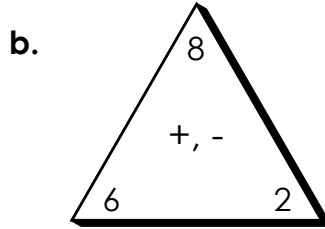
Name: \_\_\_\_\_

# Fact Families

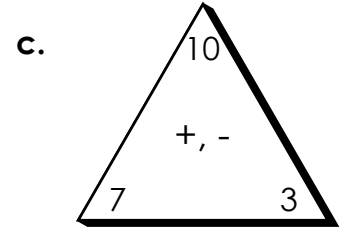
Use addition and subtraction to write the fact family for each.



$$\begin{array}{l} \underline{\quad} + \underline{\quad} = \underline{\quad} \\ \underline{\quad} + \underline{\quad} = \underline{\quad} \\ \underline{\quad} - \underline{\quad} = \underline{\quad} \\ \underline{\quad} - \underline{\quad} = \underline{\quad} \end{array}$$

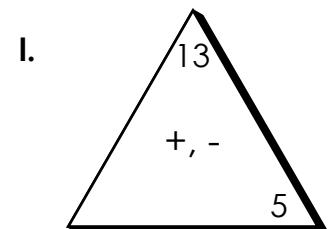
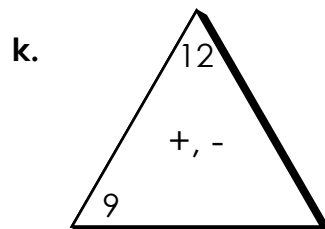
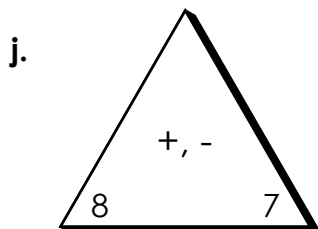
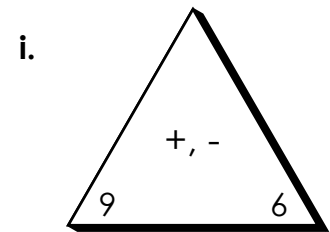
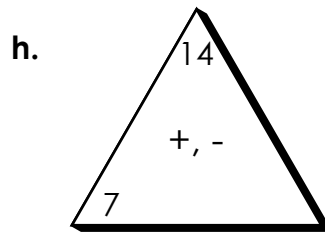
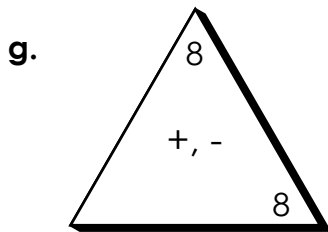
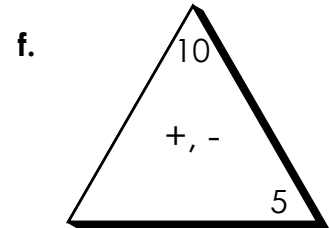
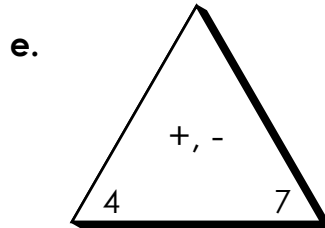
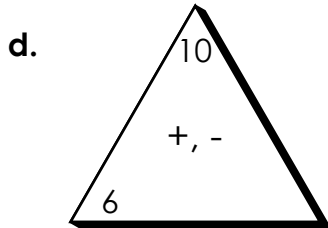


$$\begin{array}{l} \underline{\quad} + \underline{\quad} = \underline{\quad} \\ \underline{\quad} + \underline{\quad} = \underline{\quad} \\ \underline{\quad} - \underline{\quad} = \underline{\quad} \\ \underline{\quad} - \underline{\quad} = \underline{\quad} \end{array}$$



$$\begin{array}{l} \underline{\quad} + \underline{\quad} = \underline{\quad} \\ \underline{\quad} + \underline{\quad} = \underline{\quad} \\ \underline{\quad} - \underline{\quad} = \underline{\quad} \\ \underline{\quad} - \underline{\quad} = \underline{\quad} \end{array}$$

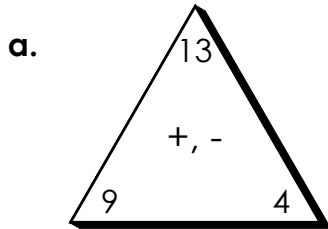
Use addition and subtraction to fill in the missing fact in each family.



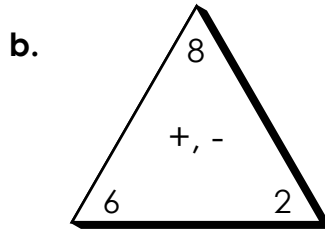
# ANSWER KEY

## Fact Families

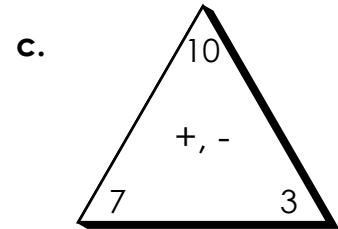
Use addition and subtraction to write the fact family for each.



$$\begin{array}{r} \underline{9} + \underline{4} = \underline{13} \\ \underline{4} + \underline{9} = \underline{13} \\ \underline{13} - \underline{9} = \underline{4} \\ \underline{13} - \underline{4} = \underline{9} \end{array}$$



$$\begin{array}{r} \underline{6} + \underline{2} = \underline{8} \\ \underline{2} + \underline{6} = \underline{8} \\ \underline{8} - \underline{6} = \underline{2} \\ \underline{8} - \underline{2} = \underline{6} \end{array}$$



$$\begin{array}{r} \underline{7} + \underline{3} = \underline{10} \\ \underline{3} + \underline{7} = \underline{10} \\ \underline{10} - \underline{7} = \underline{3} \\ \underline{10} - \underline{3} = \underline{7} \end{array}$$

Use addition and subtraction to fill in the missing fact in each family.

