




Name: _____

Shape Multiplication



Find the product of the numbers in the trapezoids.

Find the product of the numbers in the circles.

Find the product of the numbers in the triangles.



Preview




Please log in to download
the printable version of this worksheet.

Find the product of the numbers in the squares.

Find the product of the numbers in the octagons.

Find the product of the numbers in the hexagons.

Shape Multiplication



Find the product of the numbers in the trapezoids.

Find the product of the numbers in the circles.

Find the product of the numbers in the triangles.



Preview

Please log in to download
the printable version of this worksheet.

Find the product of the numbers in the squares.

$$\begin{array}{r} 506 \\ \times 407 \\ \hline 205,942 \end{array}$$

Find the product of the numbers in the octagons.

$$\begin{array}{r} 566 \\ \times 175 \\ \hline 99,050 \end{array}$$

Find the product of the numbers in the hexagons.

$$\begin{array}{r} 880 \\ \times 274 \\ \hline 241,120 \end{array}$$