



Name: \_\_\_\_\_

## Shape Multiplication



Find the product of the numbers in the squares.

Find the product of the numbers in the triangles.

Find the product of the numbers in the trapezoids.



# Preview



Please log in to download  
the printable version of this worksheet.

Find the product of the numbers in the hexagons.

Find the product of the numbers in the octagons.

Find the product of the numbers in the circles.

## Shape Multiplication



Find the product of the numbers in the squares

Find the product of the numbers in the triangles

Find the product of the numbers in the trapezoids



# Preview

Please log in to download  
the printable version of this worksheet.

5,220

570

702

Find the product of the numbers in the hexagons.

$$\begin{array}{r} \text{Hexagon } 79 \\ \times \text{Hexagon } 29 \\ \hline 2,291 \end{array}$$

Find the product of the numbers in the octagons.

$$\begin{array}{r} \text{Octagon } 23 \\ \times \text{Octagon } 24 \\ \hline 552 \end{array}$$

Find the product of the numbers in the circles.

$$\begin{array}{r} \text{Circle } 41 \\ \times \text{Circle } 18 \\ \hline 738 \end{array}$$