



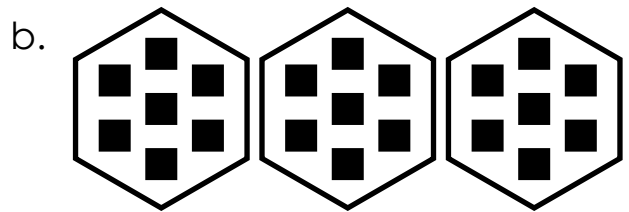
Name: _____


Picture Math


Write a multiplication and addition problem for each picture.

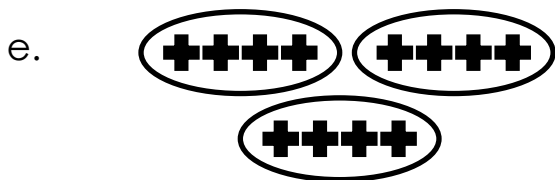
example:



$$\begin{array}{r} 3 \times 6 = 18 \\ \hline 6 + 6 + 6 = 18 \end{array}$$













ANSWER KEY

Picture Math

Write a multiplication and addition problem for each picture.


example:



$$3 \times 6 = 18$$

$$6 + 6 + 6 = 18$$

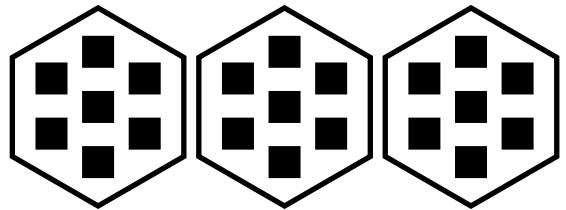
a.



$$5 \times 4 = 20$$

$$4 + 4 + 4 + 4 + 4 = 20$$


b.



$$3 \times 7 = 21$$

$$7 + 7 + 7 = 21$$


c.



$$2 \times 3 = 6$$

$$3 + 3 = 6$$


d.



$$8 \times 4 = 32$$

$$4 + 4 + 4 + 4 + 4 + 4 + 4 + 4 = 32$$


e.



$$3 \times 4 = 12$$

$$4 + 4 + 4 = 12$$

f.



$$3 \times 5 = 15$$

$$5 + 5 + 5 = 15$$