


Name: _____

Picture Math

Write a multiplication and addition problem for each picture.

example:



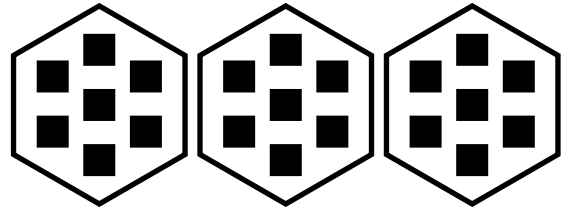
$$\underline{3 \times 6 = 18}$$

$$\underline{6 + 6 + 6 = 18}$$

a.



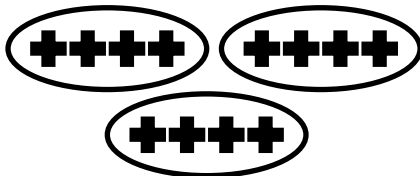
b.




PREVIEW

Please log in or register to download the printable version of this worksheet.

e.



f.




ANSWER KEY

Picture Math

Write a multiplication and addition problem for each picture.


example:



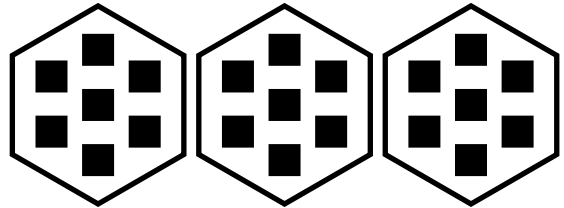
$$3 \times 6 = 18$$

$$6 + 6 + 6 = 18$$

a.



b.




~ PREVIEW ~

Please log in or register to download the printable version of this worksheet.

$$2 \times 3 = 6$$

$$3 + 3 = 6$$

e.




$$3 \times 4 = 12$$

$$4 + 4 + 4 = 12$$

$$8 \times 4 = 32$$

$$4 + 4 + 4 + 4 + 4 + 4 + 4 + 4 = 32$$

f.



$$3 \times 5 = 15$$

$$5 + 5 + 5 = 15$$