

Name: _____

Multiply by 2s

Skip count by 2s.

0	→	2	→	4	→		→		→		→		→		→		→	20
---	---	---	---	---	---	--	---	--	---	--	---	--	---	--	---	--	---	----

Complete the Input/Output Table.

Input	2	6	8	3	7	10	5	1	0	4
Output										

Rule: Multiply by 2



Preview

Please log in to download
the printable version of this worksheet.

Compare. $<$, $>$, or $=$


$2 \times 3 \quad \square \quad 8$

$2 \times 7 \quad \square \quad 2 \times 9$

$20 \quad \square \quad 2 \times 10$

$2 \times 6 \quad \square \quad 2 \times 5$

What fact is shown by the illustration?




$$\underline{\hspace{2cm}} \times \underline{\hspace{2cm}} = \underline{\hspace{2cm}}$$

ANSWER KEY

Multiply by 2s

Skip count by 2s.



Complete the Input/Output Table.

Input	2	6	8	3	7	10	5	1	0	4
Output	4	12	16	6	14	20	10	2	0	8

Rule: Multiply by 2



Preview

Please log in to download
the printable version of this worksheet.

Compare. $<$, $>$, or $=$


$$2 \times 3 \quad \boxed{<} \quad 8$$

$$2 \times 7 \quad \boxed{<} \quad 2 \times 9$$

$$20 \quad \boxed{=} \quad 2 \times 10$$

$$2 \times 6 \quad \boxed{>} \quad 2 \times 5$$

What fact is shown by the illustration?



$$\underline{2} \times \underline{4} = \underline{8}$$