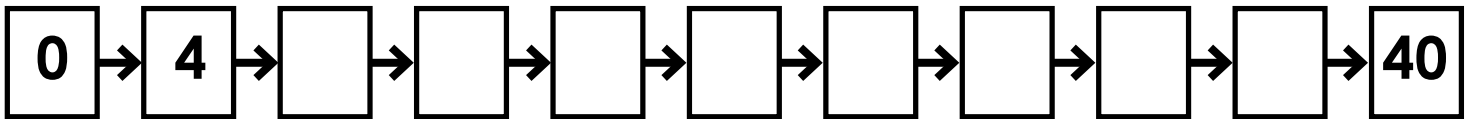


Name: _____

Multiply by 4s

Skip count by 4s.



Complete the Input/Output Table.

Input	2	6	8	3	7	10	5	1	0	4
Output										

Rule: Multiply by 4



Preview

Please log in to download
the printable version of this worksheet.

Compare. <, >, or =


$4 \times 4 \quad \square \quad 20$

$4 \times 7 \quad \square \quad 4 \times 9$

$28 \quad \square \quad 4 \times 6$

$4 \times 6 \quad \square \quad 4 \times 7$

What fact is shown by the illustration?



$\underline{\quad} \times \underline{\quad} = \underline{\quad}$

ANSWER KEY

Multiply by 4s

Skip count by 4s.



Complete the Input/Output Table.

Input	2	6	8	3	7	10	5	1	0	4
Output	8	24	32	12	28	40	20	4	0	16

Rule: Multiply by 4



Preview

Please log in to download
the printable version of this worksheet.

Compare. <, >, or =


$4 \times 4 < 20$

$4 \times 7 < 4 \times 9$

$28 > 4 \times 6$

$4 \times 6 < 4 \times 7$

What fact is shown by the illustration?



$4 \times 7 = 28$