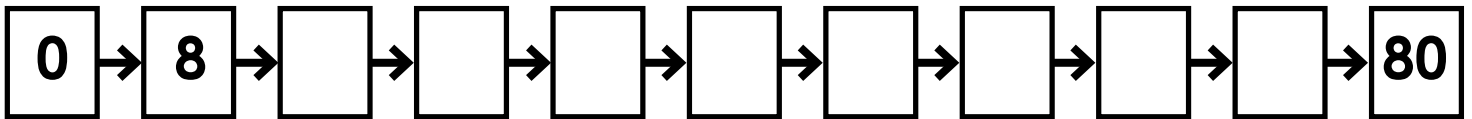


Name: \_\_\_\_\_

## Multiply by 8s

Skip count by 8s.



Complete the Input/Output Table.

Input	8	6	9	4	7	3	5	10	1	0
Output										

**Rule: Multiply by 8**



# Preview

Please log in to download  
the printable version of this worksheet.

Compare. <, >, or =




$7 \times 8 \quad \square \quad 50$

$8 \times 4 \quad \square \quad 4 \times 8$

$45 \quad \square \quad 5 \times 8$

$9 \times 8 \quad \square \quad 70$

What fact is shown by the illustration?




\_\_\_\_\_ X \_\_\_\_\_ = \_\_\_\_\_

# ANSWER KEY

## Multiply by 8s

Skip count by 8s.



Complete the Input/Output Table.

Input	8	6	9	4	7	3	5	10	1	0
Output	64	48	72	32	56	24	40	80	8	0

**Rule: Multiply by 8**



# Preview

Please log in to download  
the printable version of this worksheet.

Compare.  $<$ ,  $>$ , or  $=$




$$7 \times 8 \quad > \quad 50$$

$$8 \times 4 \quad = \quad 4 \times 8$$

$$45 \quad > \quad 5 \times 8$$

$$9 \times 8 \quad > \quad 70$$

What fact is shown by the illustration?



$$\underline{8} \times \underline{3} = \underline{24}$$