

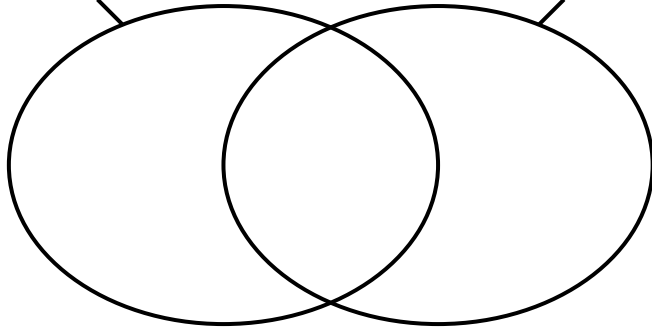
Name: _____

Sorting Multiples on Venns

Place the numbers in the correct positions on the Venn diagrams.

Multiples of 2

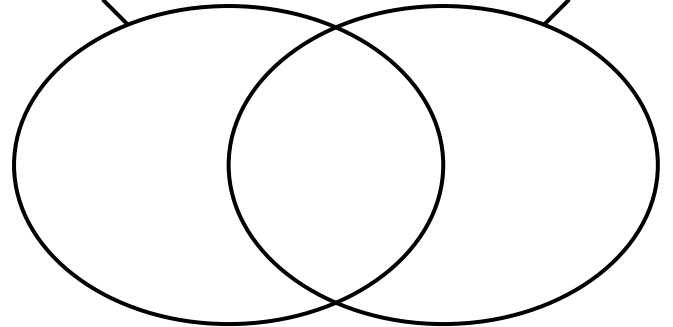
Multiples of 3



6 9 12 15

Multiples of 7

Multiples of 8



21 24 35 40



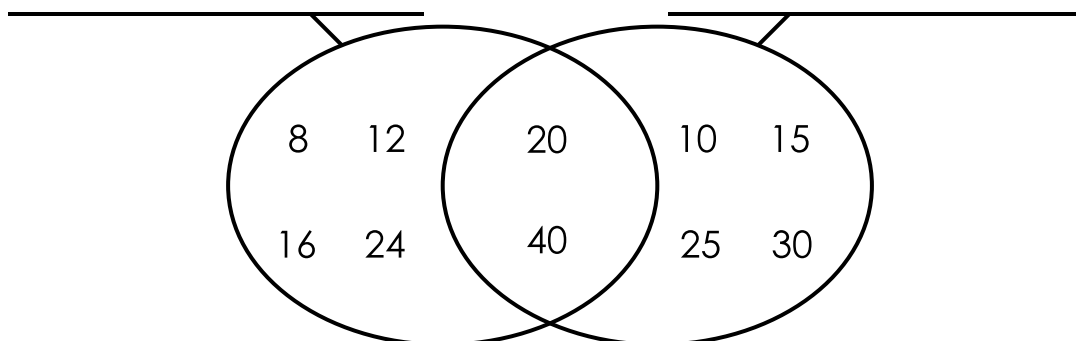
Preview

Please log in to download
the printable version of this worksheet.

5 10 15 20
25 30 35 40

4 8 9 12
15 17 20 23

Write labels for the right and left sections of the Venn diagram.



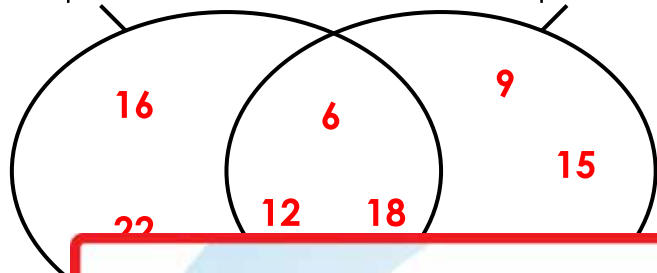
ANSWER KEY

Sorting Multiples on Venns

Place the numbers in the correct positions on the Venn diagrams.

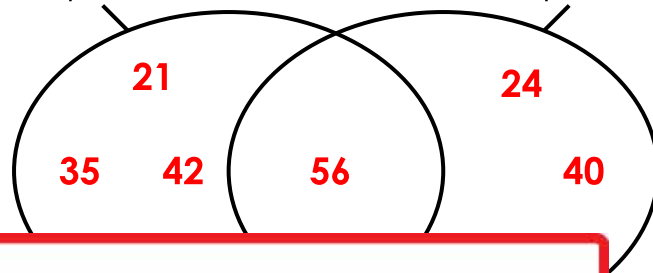
Multiples of 2

Multiples of 3



Multiples of 7

Multiples of 8



Preview

Please log in to download
the printable version of this worksheet.

