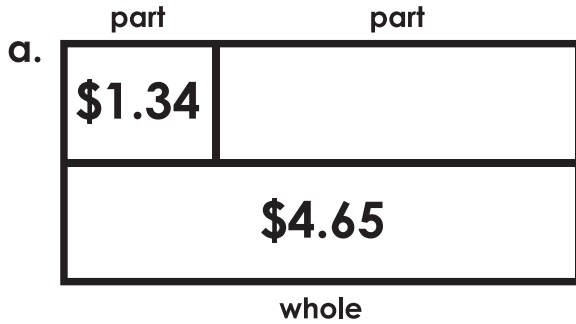


Name: _____

Money Operations with Bar Models

Find the missing value for each bar model. Then write an addition and subtraction number sentence for each.



$$\underline{\quad} + \underline{\quad} = \underline{\quad}$$
$$\underline{\quad} - \underline{\quad} = \underline{\quad}$$



$$\underline{\quad} + \underline{\quad} = \underline{\quad}$$
$$\underline{\quad} - \underline{\quad} = \underline{\quad}$$

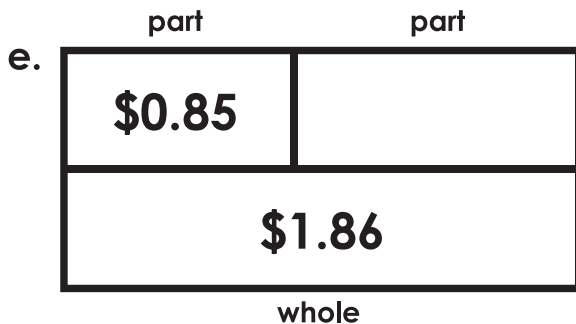


Preview

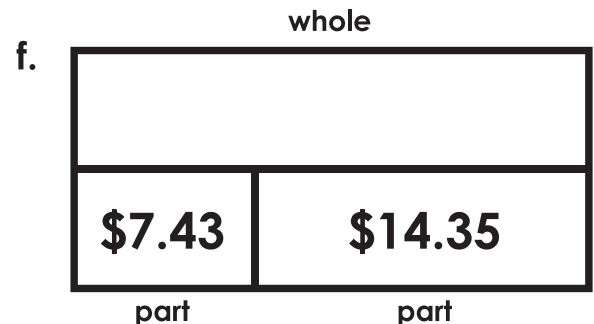
Please log in to download the printable version of this worksheet.

$$\underline{\quad} - \underline{\quad} = \underline{\quad}$$

$$\underline{\quad} - \underline{\quad} = \underline{\quad}$$



$$\underline{\quad} + \underline{\quad} = \underline{\quad}$$
$$\underline{\quad} - \underline{\quad} = \underline{\quad}$$

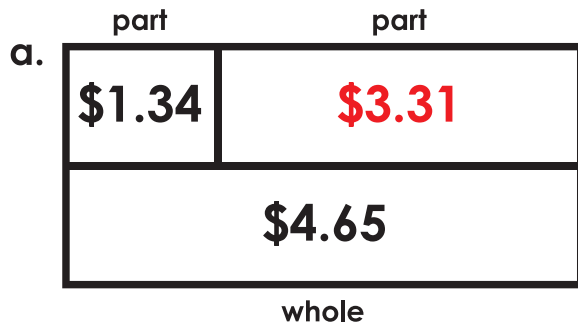


$$\underline{\quad} + \underline{\quad} = \underline{\quad}$$
$$\underline{\quad} - \underline{\quad} = \underline{\quad}$$

ANSWER KEY

Money Operations with Bar Models

Note to teacher: Addition and subtraction number sentences may be reversed.
(example: student may write $\$4.65 - \$1.34 = \$3.31$ or $\$4.65 - \$3.31 = \$1.34$)



$$\underline{\$1.34} + \underline{\$3.31} = \underline{\$4.65}$$

$$\underline{\$4.65} - \underline{\$1.34} = \underline{\$3.31}$$



$$\underline{\$0.92} + \underline{\$2.97} = \underline{\$3.89}$$

$$\underline{\$3.89} - \underline{\$0.92} = \underline{\$2.97}$$

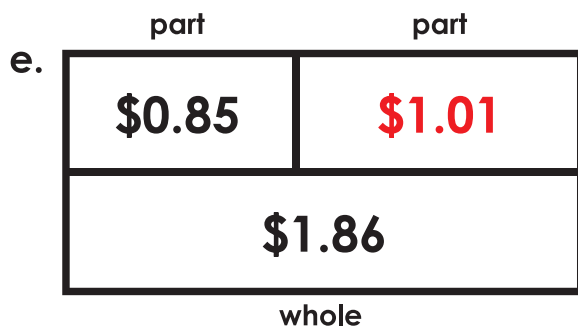


Preview

Please log in to download
the printable version of this worksheet.

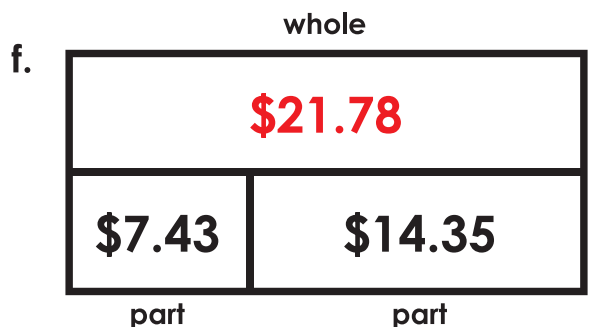
$$\underline{\$7.50} - \underline{\$2.00} = \underline{\$5.50}$$

$$\underline{\$14.32} - \underline{\$10.26} = \underline{\$4.06}$$



$$\underline{\$0.85} + \underline{\$1.01} = \underline{\$1.86}$$

$$\underline{\$1.86} - \underline{\$0.85} = \underline{\$1.01}$$



$$\underline{\$7.43} + \underline{\$14.35} = \underline{\$21.78}$$

$$\underline{\$21.78} - \underline{\$14.35} = \underline{\$7.43}$$