

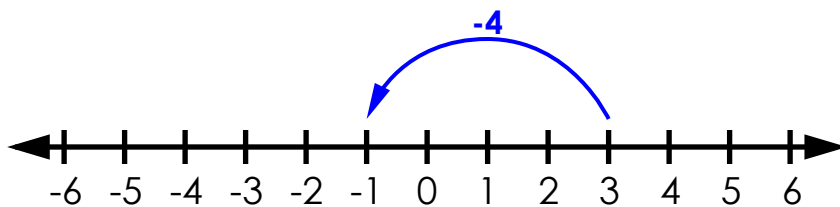
Name: _____

Subtracting Integers

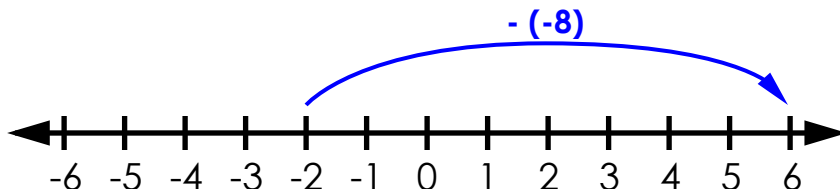
Use the number lines to solve.

examples:

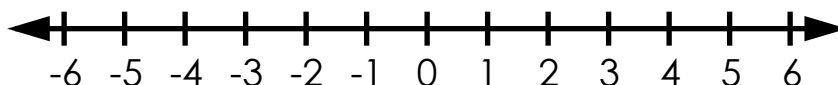
$$3 - 4 = \underline{-1}$$



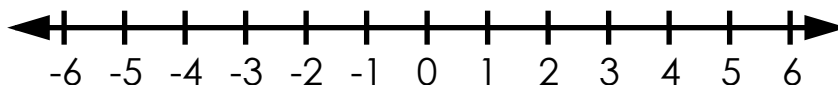
$$-2 - (-8) = \underline{6}$$



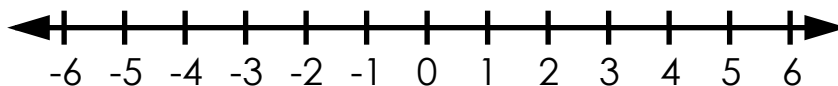
a. $-6 - (-5) = \underline{\hspace{2cm}}$



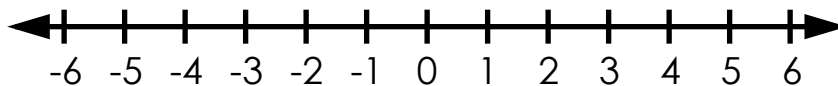
b. $1 - (-2) = \underline{\hspace{2cm}}$



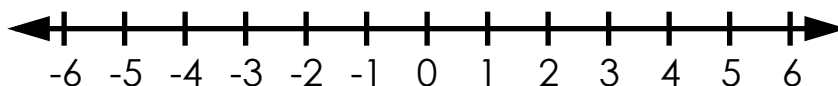
c. $0 - 3 = \underline{\hspace{2cm}}$



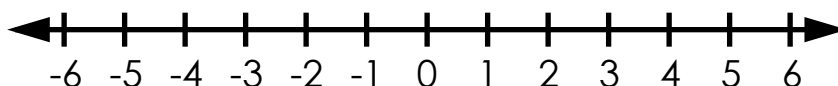
d. $-3 - (-7) = \underline{\hspace{2cm}}$



e. $-2 - (-2) = \underline{\hspace{2cm}}$



f. $3 - 8 = \underline{\hspace{2cm}}$



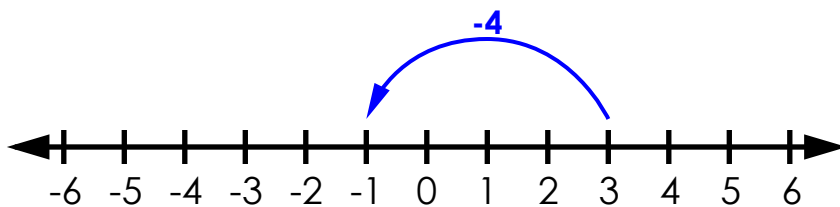
ANSWER KEY

Subtracting Integers

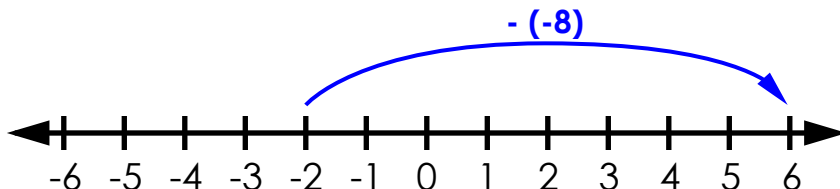
Use the number lines to solve.

examples:

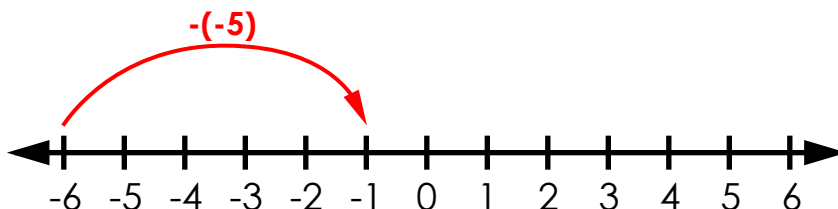
$$3 - 4 = \underline{-1}$$



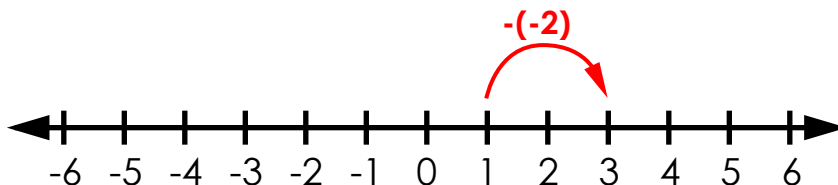
$$-2 - (-8) = \underline{6}$$



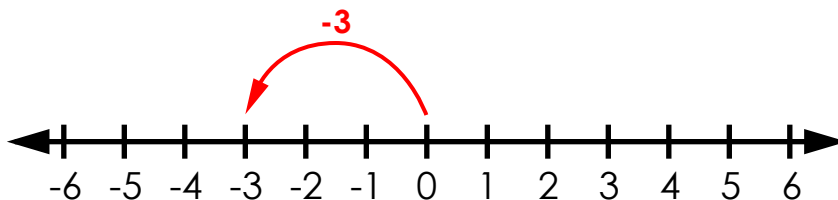
a. $-6 - (-5) = \underline{-1}$



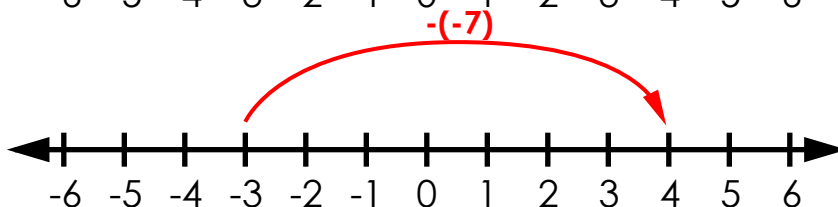
b. $1 - (-2) = \underline{3}$



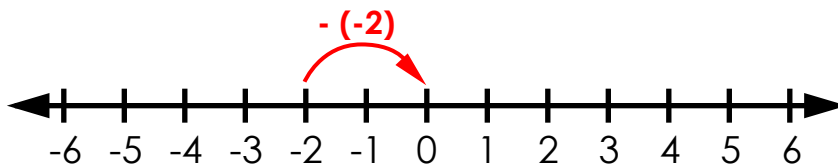
c. $0 - 3 = \underline{-3}$



d. $-3 - (-7) = \underline{4}$



e. $-2 - (-2) = \underline{0}$



f. $3 - 8 = \underline{-5}$

