
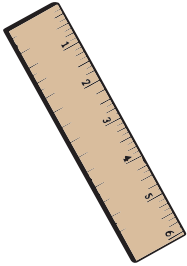


Name: _____

Histogram



Mr. Hamlin measured the height of all of his students.
Use the information from his data to fill in the chart and
answer the questions.



The measurements of
Mr. Hamlin's students are:

- | | | |
|------|-------|-------|
| 4'7" | 4'9" | 5'4" |
| 5'9" | 4'2" | 4'10" |
| 5'3" | 4'4" | 5'7" |
| 4'1" | 4'11" | 5'3" |
| 4'8" | 5'2" | 5'0" |

10				
9				
8				
7				
6				
5				




Preview
Please log in to download
the printable version of this worksheet.

1. What height range has the most students? _____
2. What height range has the fewest students? _____
3. How many students are 5 feet or under? _____
4. How many students are taller than 5 feet? _____
5. Can you tell how many students are exactly 5 feet tall just from the information on the graph? Why or why not?

ANSWER KEY

Histogram



Mr. Hamlin measured the height of all of his students.
Use the information from his data to fill in the chart and
answer the questions.



The measurements of
Mr. Hamlin's students are:

- 4' 7" 4' 9" 5' 4"
- 5' 9" 4' 2" 4' 10"
- 5' 3" 4' 4" 5' 7"
- 4' 1" 4' 11" 5' 2"

10				
9				
8				

Preview

Please log in to download
the printable version of this worksheet.

