

Name: \_\_\_\_\_

## Volume of Rectangular Prisms

Zoe paints small wooden boxes and places her gemstones in them. The table below shows the dimensions of each box. Find the volume for each box.

box color	length	width	height	volume
green box	9 cm	6 cm	2 cm	
yellow box	2 cm	4 cm	7 cm	
orange box	3 cm	5 cm	5 cm	
brown box	8 cm	4 cm	3 cm	
red box	4 cm	6 cm	7 cm	
blue box	2 cm	5 cm	8 cm	



# Preview

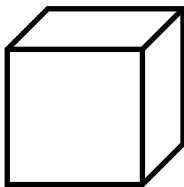
Please log in to download the printable version of this worksheet.

volume =  $168 \text{ cm}^3$

volume =  $96 \text{ cm}^3$

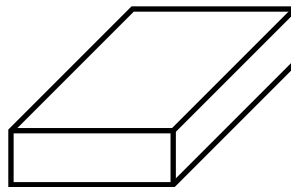
volume =  $80 \text{ cm}^3$

d.




volume =  $75 \text{ cm}^3$

e.



volume =  $108 \text{ cm}^3$

f.



volume =  $56 \text{ cm}^3$

- g. Zoe also has a black box. It is 14 cm tall, 3 cm deep, and 2 cm wide. What is the volume of this box?

\_\_\_\_\_

# ANSWER KEY

## Volume of Rectangular Prisms

Zoe paints small wooden boxes and places her gemstones in them. The table below shows the dimensions of each box. Find the volume for each box.

box color	length	width	height	volume
green box	9 cm	6 cm	2 cm	<b>108 cm<sup>3</sup></b>

# Preview

Please log in to download  
the printable version of this worksheet.



3 cm deep, and 2 cm wide. What is the volume of this box?

**84 cm<sup>3</sup>**