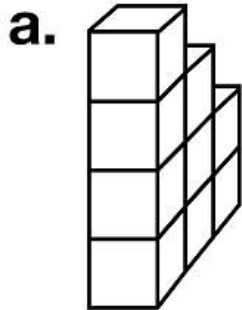


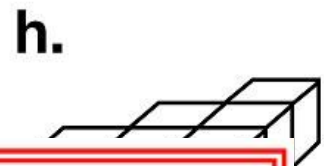
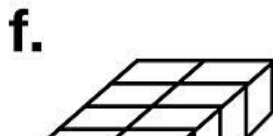
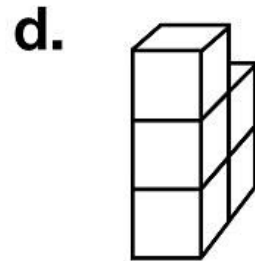
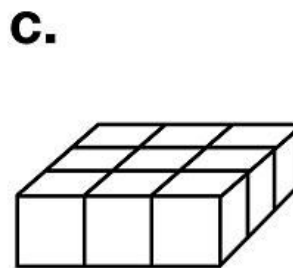
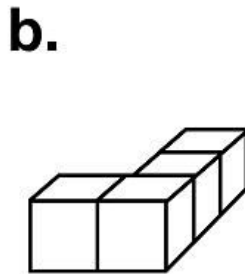
Name: _____

Volume Cubes

Count the cubes and write the volume of each shape.
The first one has been done for you as an example.

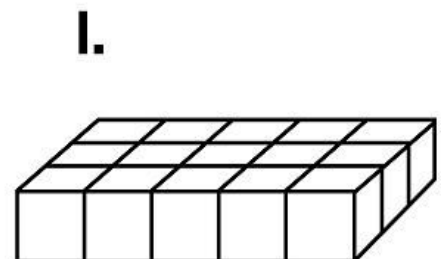
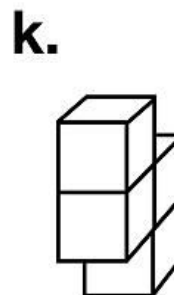
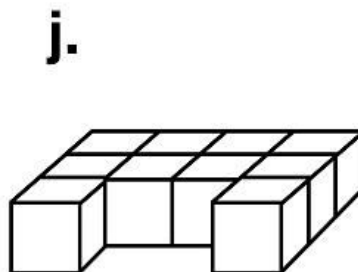
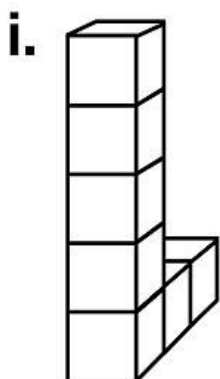


9 cubic units



PREVIEW

Please log in or register to download
the printable version of this worksheet.

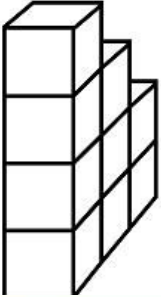


Answer Key

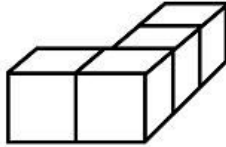
Volume Cubes

Count the cubes and write the volume of each shape.
The first one has been done for you as an example.

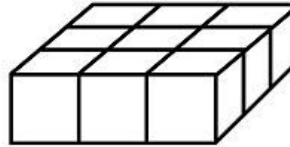
a.



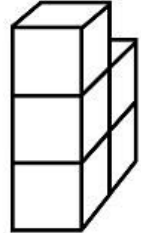
b.



c.



d.



~ PREVIEW ~

Please log in or register to download
the printable version of this worksheet.