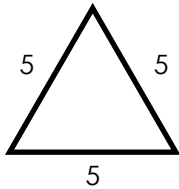
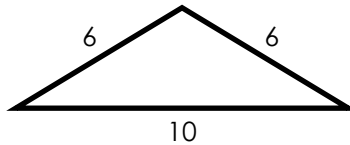


Name: _____

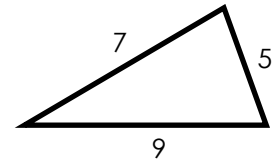
Triangles



Equilateral Triangle
All sides are the same length.



Isosceles Triangle
At least 2 sides are the same length.



Scalene Triangle
No sides are the same length.

Name each triangle by the lengths of its sides.

a. 3 in., 5 in., 3 in.

b. 14 cm, 9 cm, 8 cm




~ PREVIEW ~

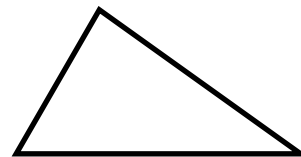
Please log in or register to download the printable version of this worksheet.

Name each triangle pictured.

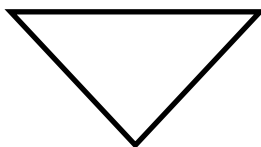
g.



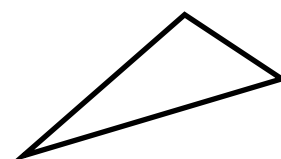
h.



i.

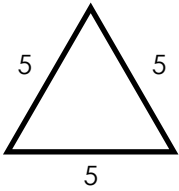


j.

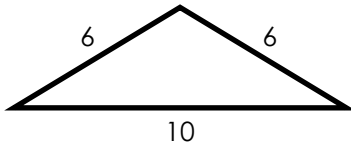


ANSWER KEY

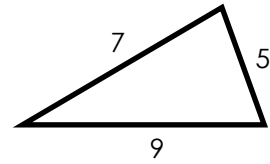
Triangles



Equilateral Triangle
All sides are the same length.



Isosceles Triangle
At least 2 sides are the same length.



Scalene Triangle
No sides are the same length.

Name each triangle by the lengths of its sides.



~ PREVIEW ~

Please log in or register to download the printable version of this worksheet.