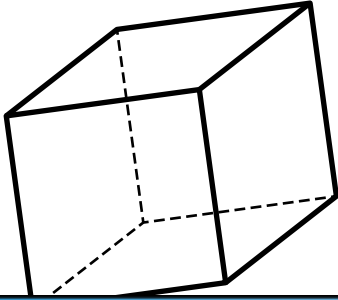


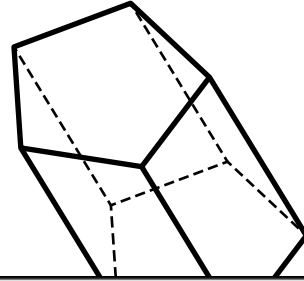
1. Faces, Edges, and Vertices

Find the number of faces for the cube.



2. Faces, Edges, and Vertices

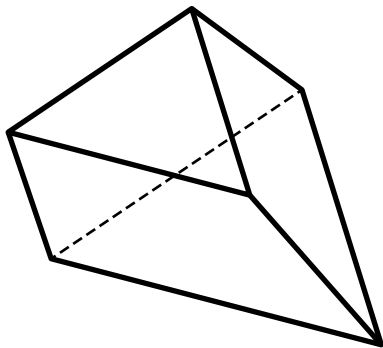
Find the number of edges for the pentagonal prism.



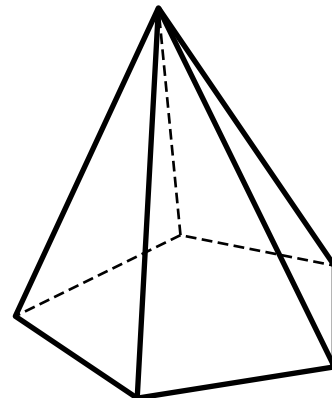
Preview

Please log in to download the printable version of this worksheet.

Find the number of vertices for the triangular prism.

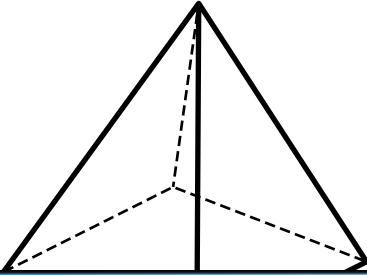


Find the number of faces for the pentagonal pyramid.



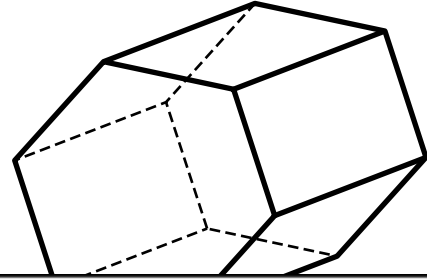
5. Faces, Edges, and Vertices

Find the number of edges for the rectangular pyramid.



6. Faces, Edges, and Vertices

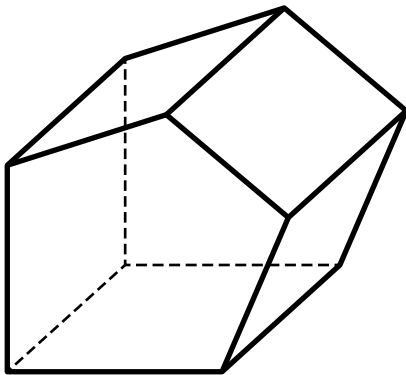
Find the number of vertices for the hexagonal prism.



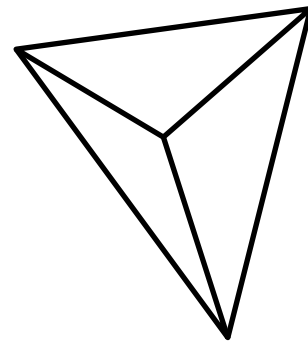
Preview

Please log in to download the printable version of this worksheet.

Find the number of faces for the pentagonal prism.

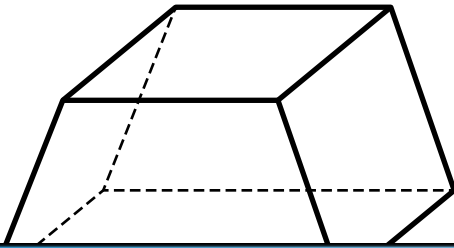


Find the number of edges for the triangular pyramid.



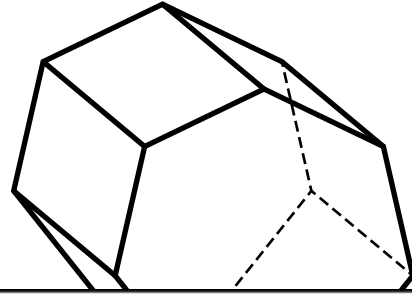
9. Faces, Edges, and Vertices

Find the number of vertices for the trapezoidal prism.



10. Faces, Edges, and Vertices

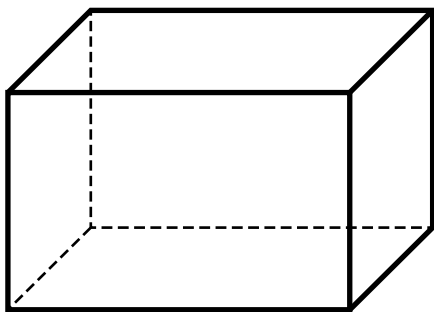
Find the number of faces for the heptagonal prism.



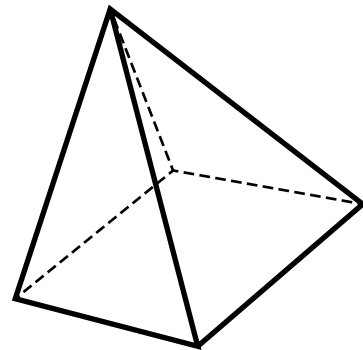
Preview

Please log in to download the printable version of this worksheet.

Find the number of edges for the rectangular prism.

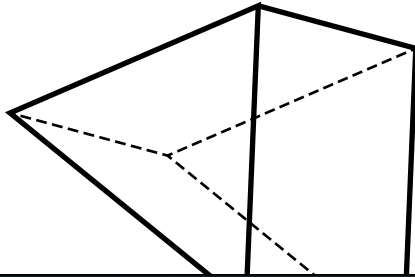


Find the number of vertices for the rectangular pyramid.



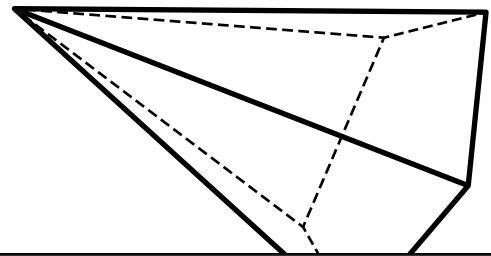
13. Faces, Edges, and Vertices

Find the number of faces for the triangular prism.



14. Faces, Edges, and Vertices

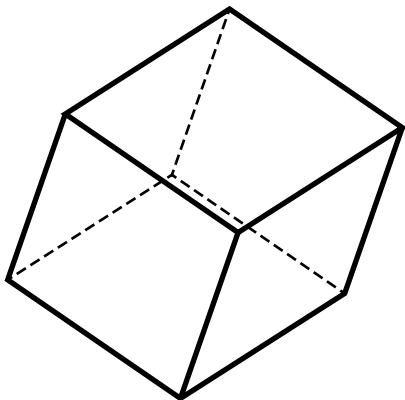
Find the number of edges for the pentagonal pyramid.



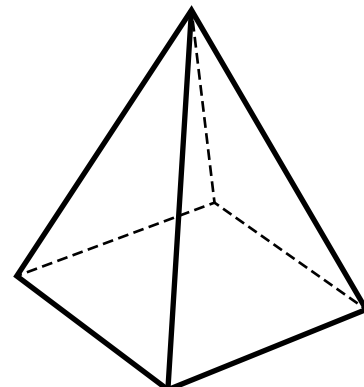
Preview

Please log in to download the printable version of this worksheet.

Find the number of vertices for the cube.

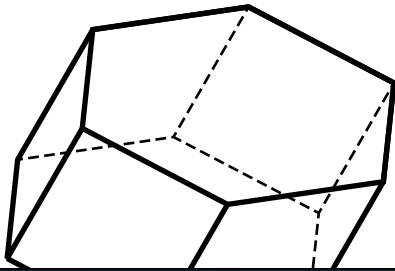


Find the number of faces for the rectangular pyramid.



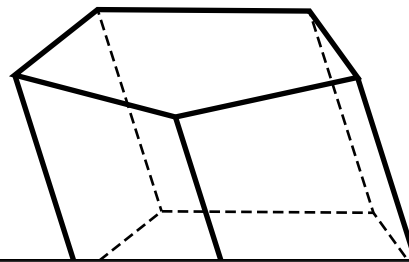
17. Faces, Edges, and Vertices

Find the number of edges for the hexagonal prism.



18. Faces, Edges, and Vertices

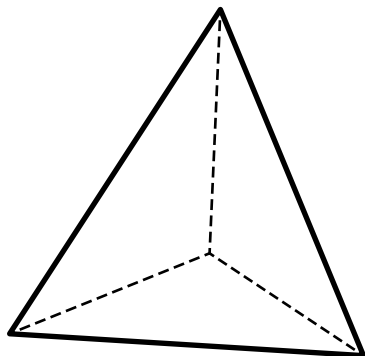
Find the number of vertices for the pentagonal prism.



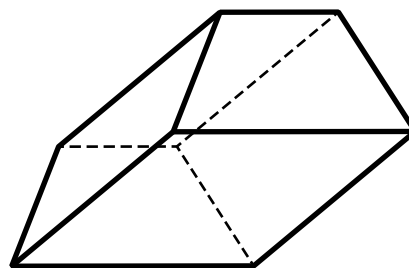
Preview

Please log in to download the printable version of this worksheet.

Find the number of faces for the triangular pyramid.

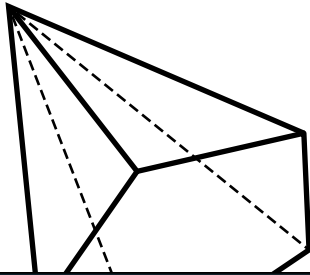


Find the number of edges for the trapezoidal prism.



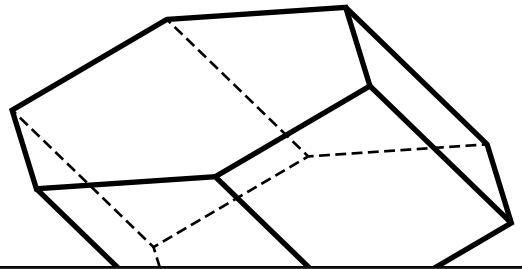
21. Faces, Edges, and Vertices

Find the number of vertices for the pentagonal pyramid.



22. Faces, Edges, and Vertices

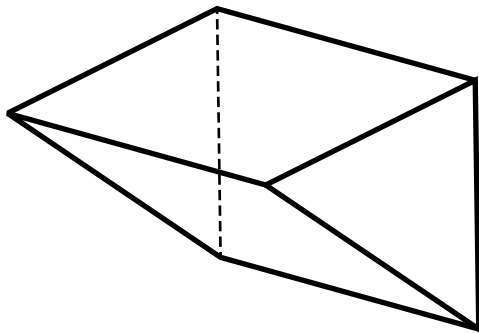
Find the number of faces for the hexagonal prism.



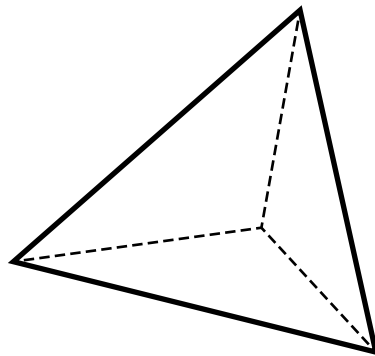
Preview

Please log in to download the printable version of this worksheet.

Find the number of edges for the triangular prism.

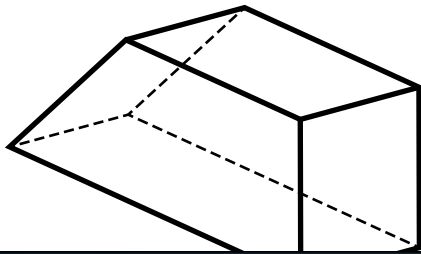


Find the number of vertices for the triangular pyramid.



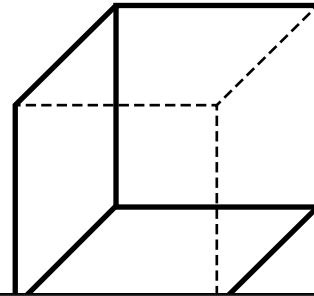
25. Faces, Edges, and Vertices

Find the number of faces for the trapezoidal prism.



26. Faces, Edges, and Vertices

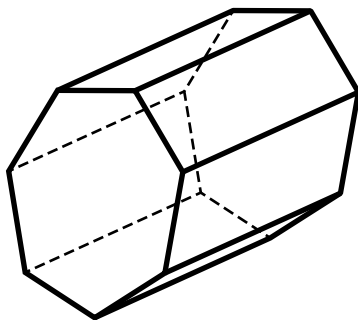
Find the number of edges for the cube.



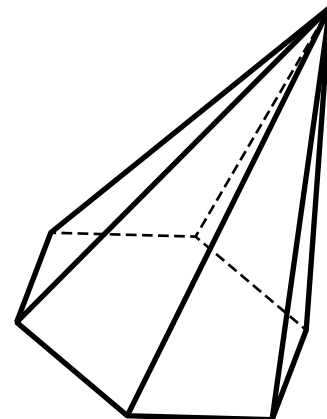
Preview

Please log in to download the printable version of this worksheet.

Find the number of vertices for the heptagonal prism.



Find the number of faces for the hexagonal pyramid.



29. Faces, Edges,
and Vertices

Find the number of
edges for the

30. Faces, Edges,
and Vertices

Find the number of
vertices for the



Preview

Please log in to download
the printable version of this worksheet.

Name: _____

Task Cards: Faces, Edges, and Vertices

1. faces = _____

16. faces = _____

2. edges = _____

17. edges = _____



13. faces = _____

28. faces = _____

14. edges = _____

29. edges = _____

15. vertices = _____

30. vertices = _____

ANSWER KEY

Task Cards: Faces, Edges, and Vertices

1. faces = 6

16. faces = 5

2. edges = 15

17. edges = 18



13. faces = 5

28. faces = 7

14. edges = 10

29. edges = 15

15. vertices = 8

30. vertices = 8