

Name: _____

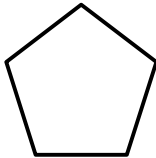
Solids and Polygons

Write the name of each shape.

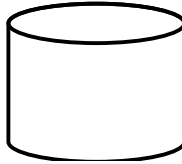
Word Bank
(You will not use all of the words)

octagon	pentagon	hexagon	rectangle
parallelogram	triangle	square	trapezoid
cylinder	rectangular prism	cube	sphere

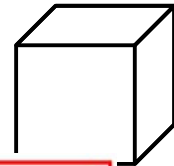
1.



2.



3.



4.

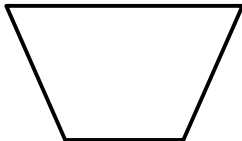


~ PREVIEW ~


Please log in or register to download the printable version of this worksheet.



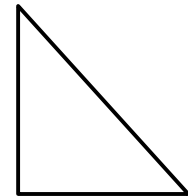
7.



8.



9.



ANSWER KEY

Solids and Polygons

Write the name of each shape.

Word Bank

(You will not use all of the words)

octagon

pentagon

hexagon

rectangle

parallelogram

triangle

square

trapezoid

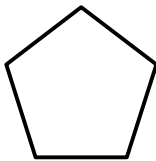
cylinder

rectangular prism

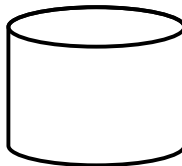
cube

sphere

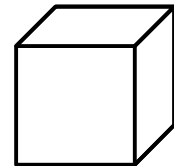
1.



2.



3.



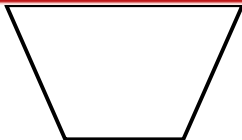
4.



~ PREVIEW ~

Please log in or register to download
the printable version of this worksheet.


7.



8.



9.



trapezoid

parallelogram

triangle