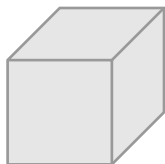


Name: _____

Solid Figures



Cube



Sphere



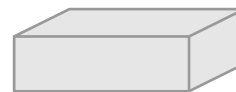
Cylinder



Cone




Pyramid

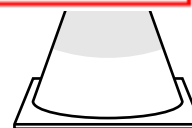
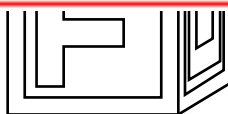
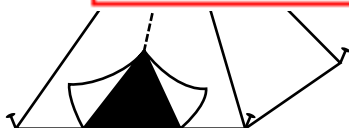


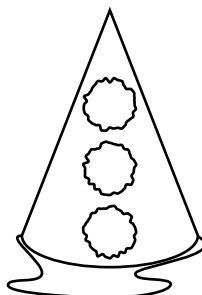

Rectangular Prism

Write the name of the solid figure that each object looks like.



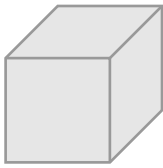
 **~ PREVIEW ~**
Please log in or register to download the printable version of this worksheet.





ANSWER KEY

Solid Figures



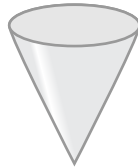
Cube



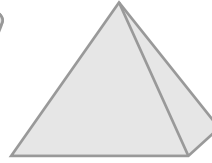
Sphere



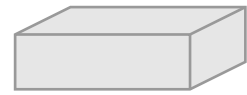
Cylinder



Cone

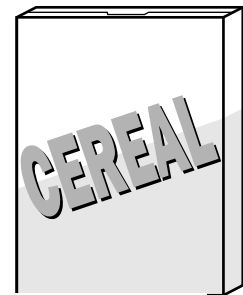


Pyramid



Rectangular Prism

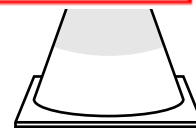
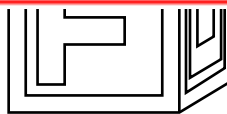
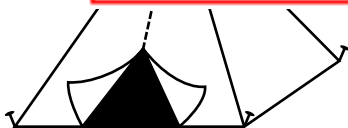
Write the name of the solid figure that each object looks like.



 **PREVIEW**  

Please log in or register to download the printable version of this worksheet.

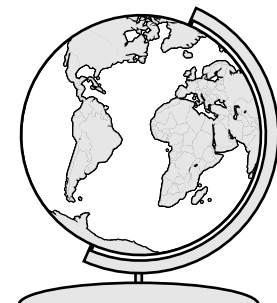
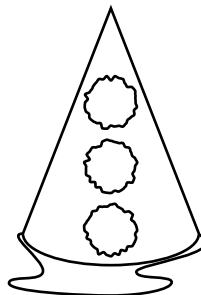

PRISM



PYRAMID

CUBE

CONE



CYLINDER

CONE

SPHERE